



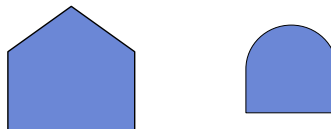
Determina si las figuras que se muestran son 'similares', 'congruentes' o 'ninguna'.

Respuestas

1)



2)



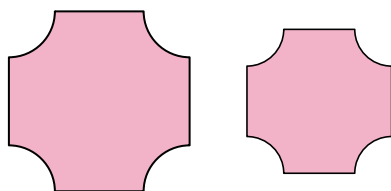
3)



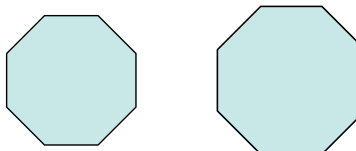
4)




5)



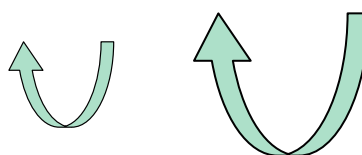
6)



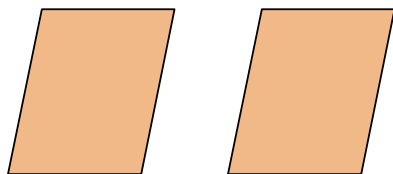
7)



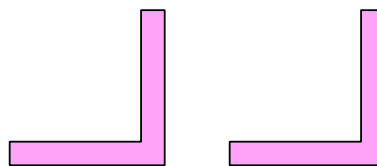
8)



9)



10)



11)



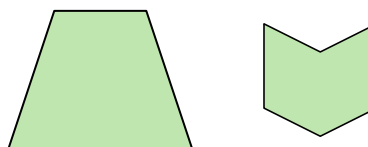
12)



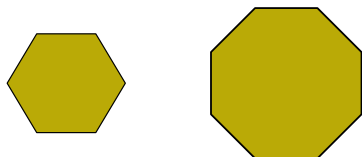
13)



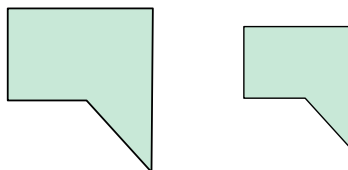
14)



15)



16)



1. _____

2. _____

3. _____

4. _____

5. _____

6. _____

7. _____

8. _____

9. _____

10. _____

11. _____

12. _____

13. _____

14. _____

15. _____

16. _____



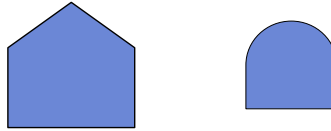
Determina si las figuras que se muestran son 'similares', 'congruentes' o 'ninguna'.

Respuestas

1)



2)



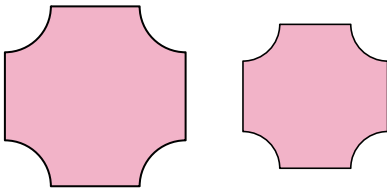
3)



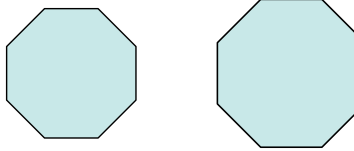
4)




5)



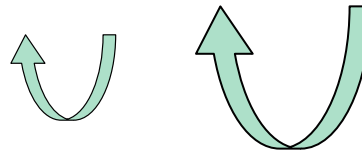
6)



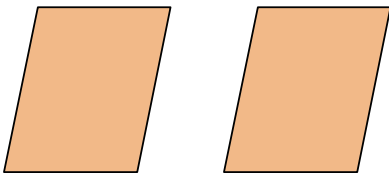
7)



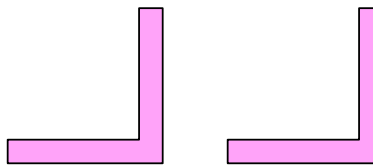
8)




9)




10)



11)



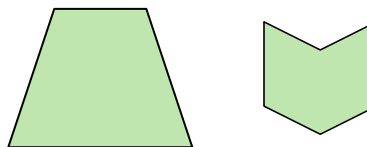
12)



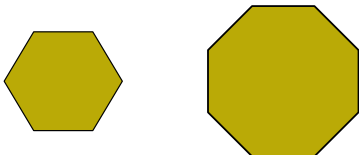
13)



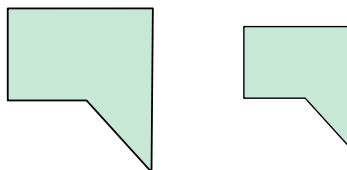
14)



15)



16)



1. congruente

2. ninguno

3. congruente

4. similar

5. similar

6. similar

7. similar

8. similar

9. congruente

10. congruente

11. congruente

12. ninguno

13. congruente

14. ninguno

15. ninguno

16. similar