

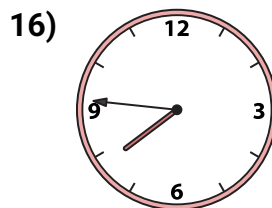
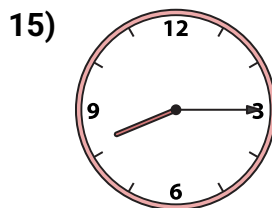
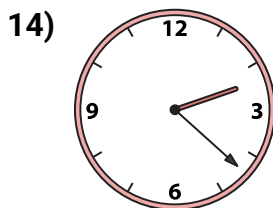
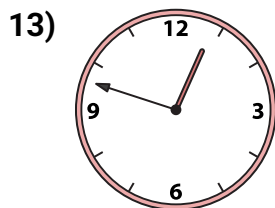
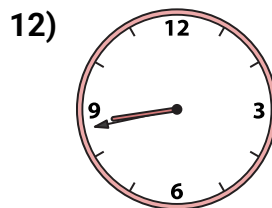
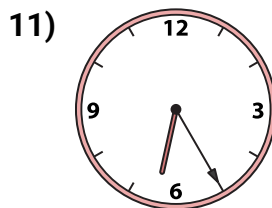
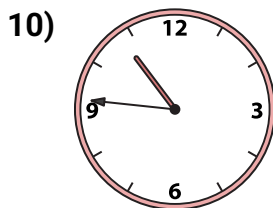
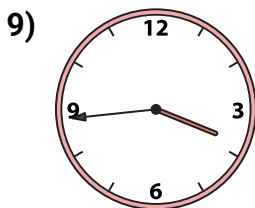
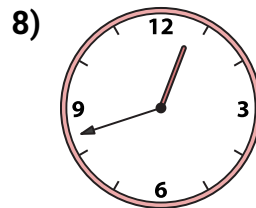
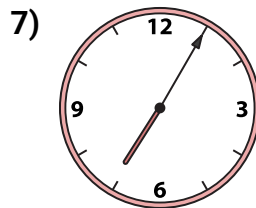
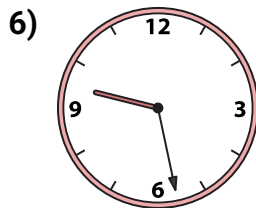
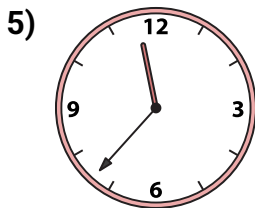
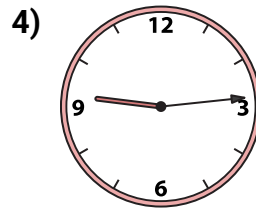
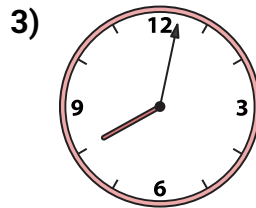
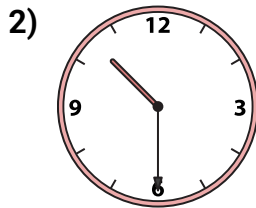
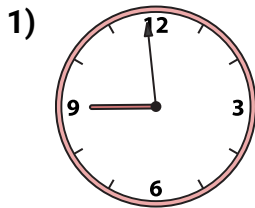


# Emparejando Relojes

Nombre: \_\_\_\_\_

Emparejar el reloj analógico con el reloj digital correspondiente.

Respuestas



A.

B.

C.

D.

E.

F.

G.

H.

I.

J.

K.

L.

M.

N.

O.

P.

1. \_\_\_\_\_

2. \_\_\_\_\_

3. \_\_\_\_\_

4. \_\_\_\_\_

5. \_\_\_\_\_

6. \_\_\_\_\_

7. \_\_\_\_\_

8. \_\_\_\_\_

9. \_\_\_\_\_

10. \_\_\_\_\_

11. \_\_\_\_\_

12. \_\_\_\_\_

13. \_\_\_\_\_

14. \_\_\_\_\_

15. \_\_\_\_\_

16. \_\_\_\_\_

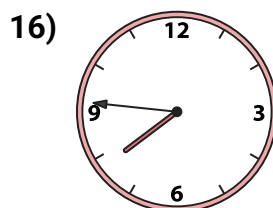
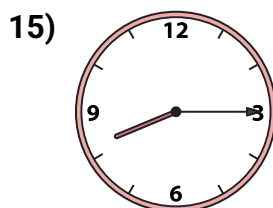
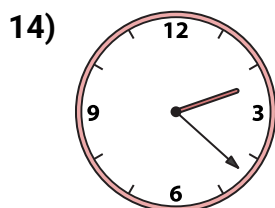
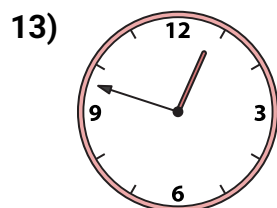
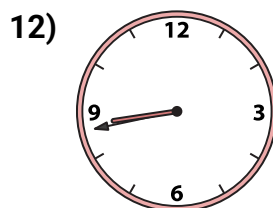
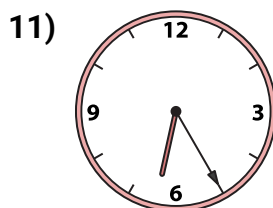
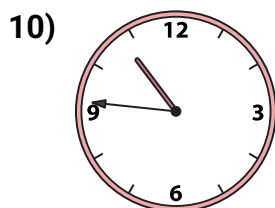
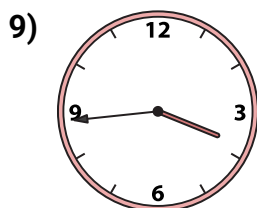
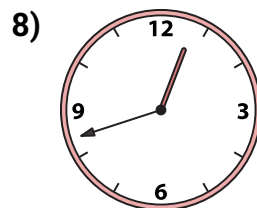
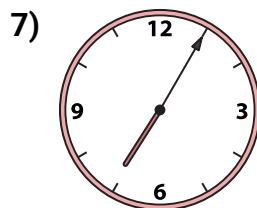
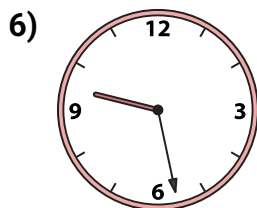
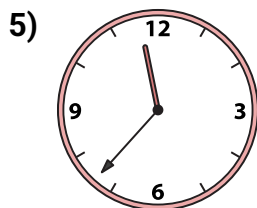
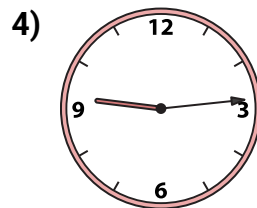
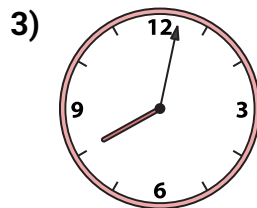
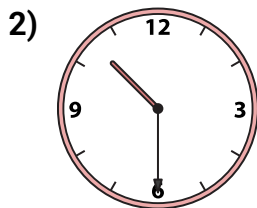
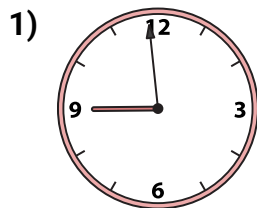


# Emparejando Relojes

Nombre: **Clave De Respuestas**

Emparejar el reloj analógico con el reloj digital correspondiente.

Respuestas



A. **9:14**

B. **7:05**

C. **12:48**

D. **10:30**

E. **9:28**

F. **11:37**

G. **2:22**

H. **10:46**

I. **8:43**

J. **7:46**

K. **8:15**

L. **6:25**

M. **12:42**

N. **8:59**

O. **8:02**

P. **3:44**

1. **N**

2. **D**

3. **O**

4. **A**

5. **F**

6. **E**

7. **B**

8. **M**

9. **P**

10. **H**

11. **L**

12. **I**

13. **C**

14. **G**

15. **K**

16. **J**