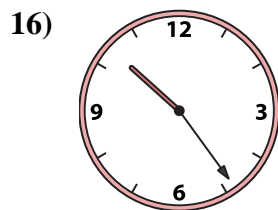
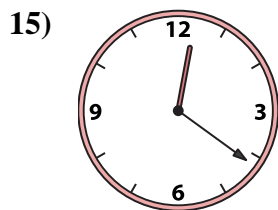
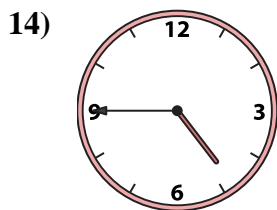

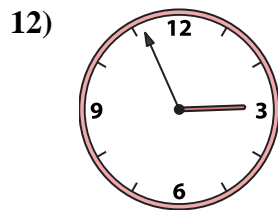
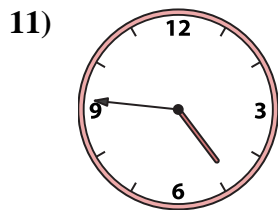
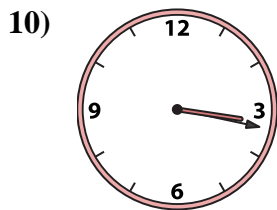
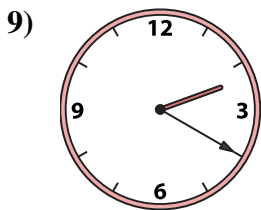
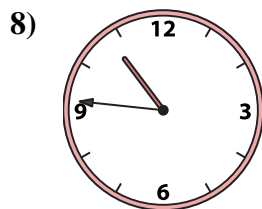


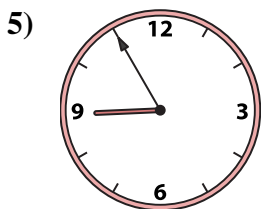
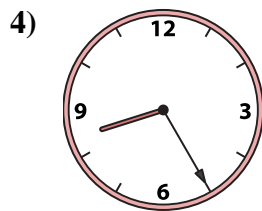
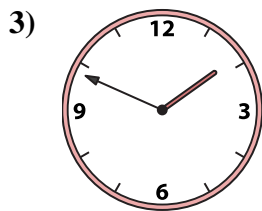
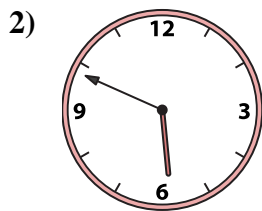
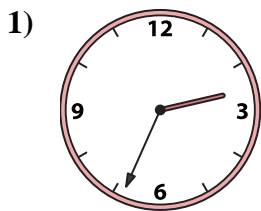




Emparejar el reloj analógico con el reloj digital correspondiente.

Respuestas



1. _____
2. _____
3. _____
4. _____
5. _____
6. _____
7. _____
8. _____
9. _____
10. _____
11. _____
12. _____
13. _____
14. _____
15. _____
16. _____

A. 12:21

B. 8:25

C. 1:49

D. 3:17

E. 2:56

F. 4:45

G. 2:20

H. 2:26

I. 4:46

J. 10:46

K. 9:23

L. 10:24

M. 5:49

N. 2:34


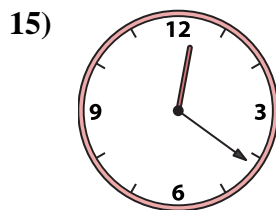
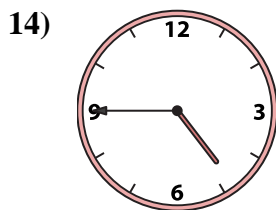

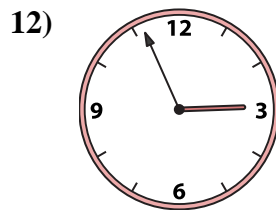
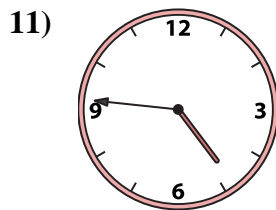
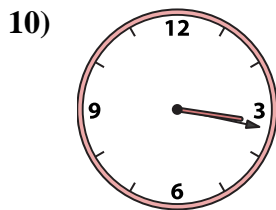
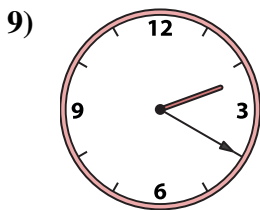
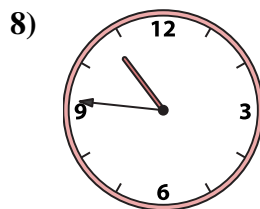
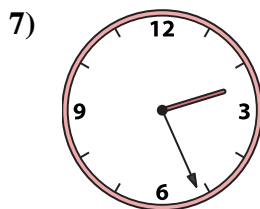

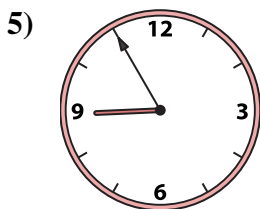
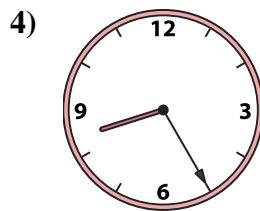
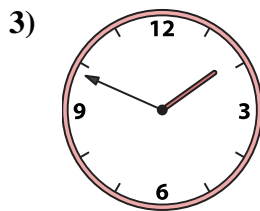
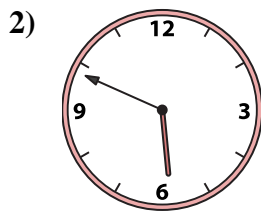
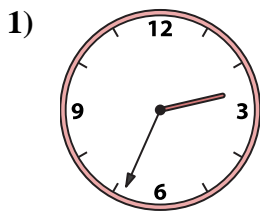
O. 9:58

P. 8:55



Emparejar el reloj analógico con el reloj digital correspondiente.

Respuestas



1. **N**

2. **M**

3. **C**

4. **B**

5. **P**

6. **K**

7. **H**

8. **J**

9. **G**

10. **D**

11. **I**

12. **E**

13. **O**

14. **F**

15. **A**

16. **L**

A. **12:21**

B. **8:25**

C. **1:49**

D. **3:17**

E. **2:56**

F. **4:45**

G. **2:20**

H. **2:26**

I. **4:46**

J. **10:46**

K. **9:23**

L. **10:24**

M. **5:49**

N. **2:34**

O. **9:58**

P. **8:55**