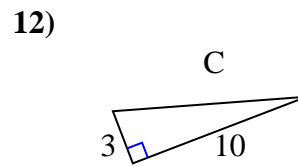
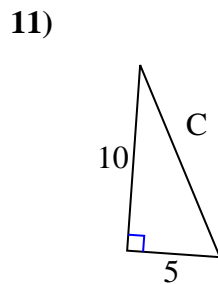
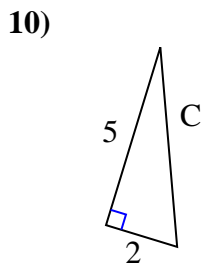
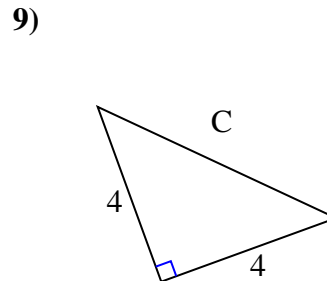
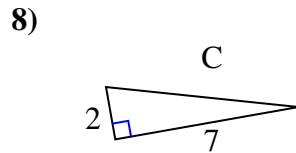
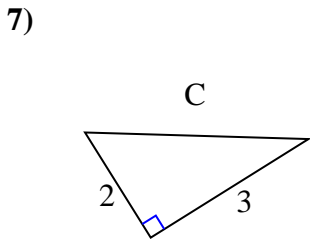
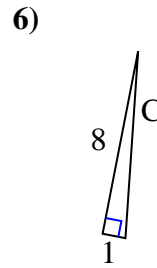
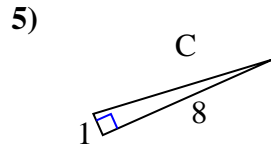
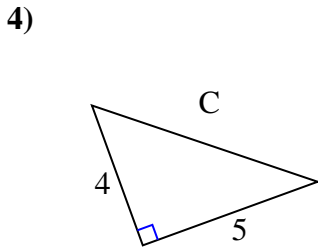
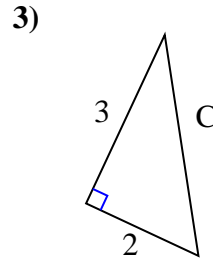
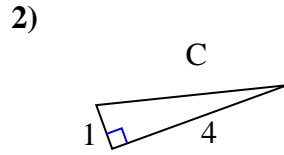
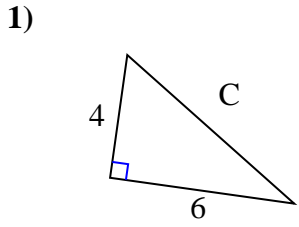




Encuentra el valor de 'C', redondea tu respuesta al centésimo más cercano.

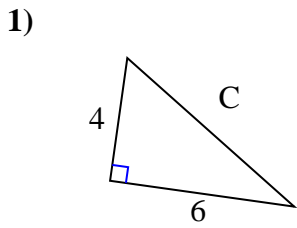
Respuestas



1. _____
2. _____
3. _____
4. _____
5. _____
6. _____
7. _____
8. _____
9. _____
10. _____
11. _____
12. _____

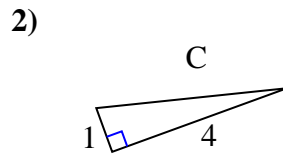


Encuentra el valor de 'C', redondea tu respuesta al centésimo más cercano.

Respuestas

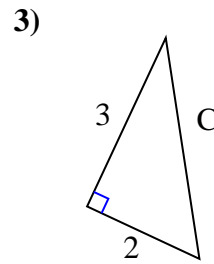
$$16 + 36 = 52$$

$$\sqrt{52} = 7.21$$



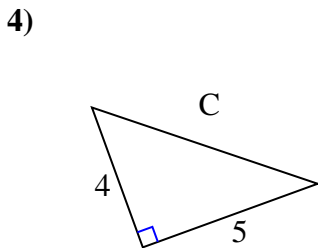
$$1 + 16 = 17$$

$$\sqrt{17} = 4.12$$



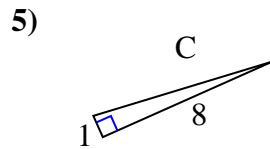
$$9 + 4 = 13$$

$$\sqrt{13} = 3.61$$



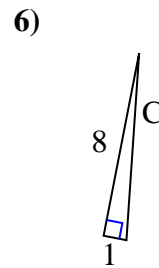
$$16 + 25 = 41$$

$$\sqrt{41} = 6.4$$



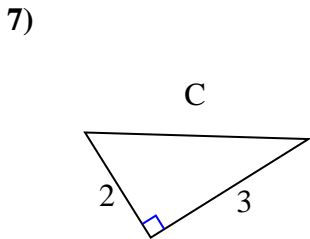
$$1 + 64 = 65$$

$$\sqrt{65} = 8.06$$



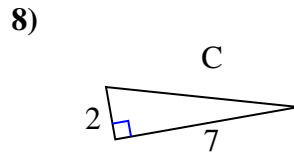
$$64 + 1 = 65$$

$$\sqrt{65} = 8.06$$



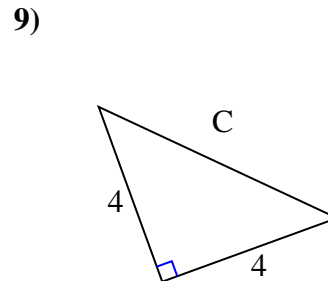
$$4 + 9 = 13$$

$$\sqrt{13} = 3.61$$



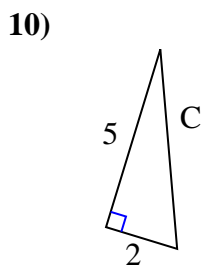
$$4 + 49 = 53$$

$$\sqrt{53} = 7.28$$



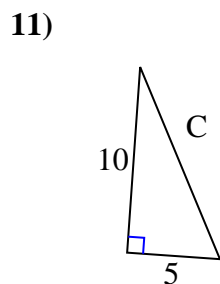
$$16 + 16 = 32$$

$$\sqrt{32} = 5.66$$



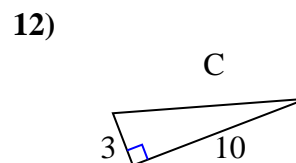
$$25 + 4 = 29$$

$$\sqrt{29} = 5.39$$



$$100 + 25 = 125$$

$$\sqrt{125} = 11.18$$



$$9 + 100 = 109$$

$$\sqrt{109} = 10.44$$

1. 7.21
2. 4.12
3. 3.61
4. 6.4
5. 8.06
6. 8.06
7. 3.61
8. 7.28
9. 5.66
10. 5.39
11. 11.18
12. 10.44