

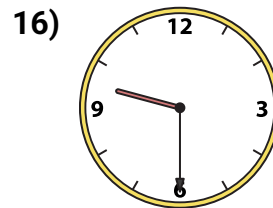
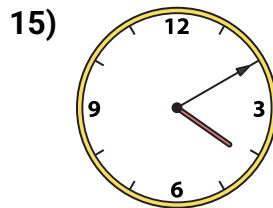
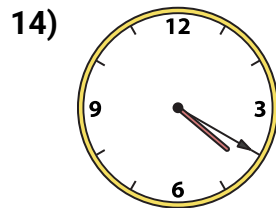
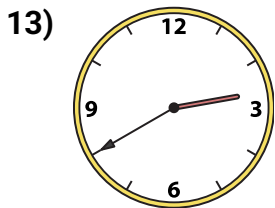
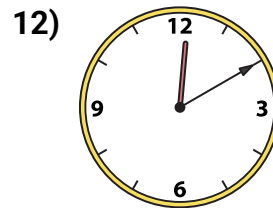
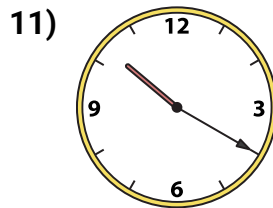
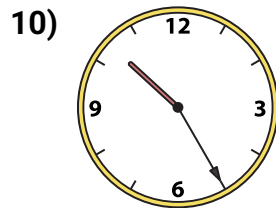
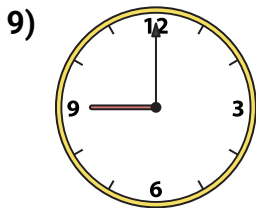
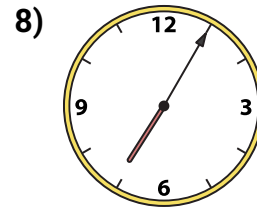
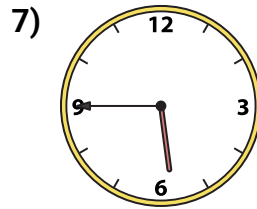
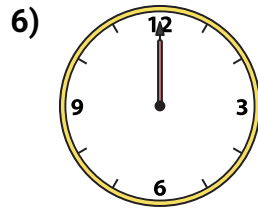
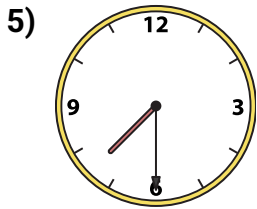
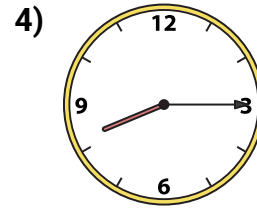
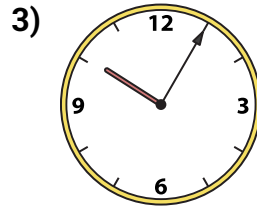
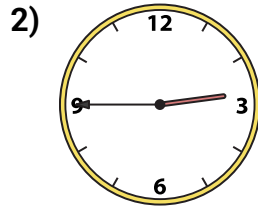
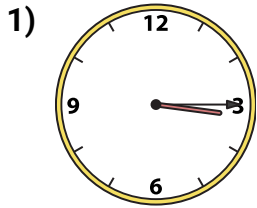


Emparejando Relojes

Nombre: _____

Emparejar el reloj analógico con el reloj digital correspondiente.

Respuestas



A.

B.

C.

D.

E.

F.

G.

H.

I.

J.

K.

L.

M.

N.

O.

P.

1. _____

2. _____

3. _____

4. _____

5. _____

6. _____

7. _____

8. _____

9. _____

10. _____

11. _____

12. _____

13. _____

14. _____

15. _____

16. _____

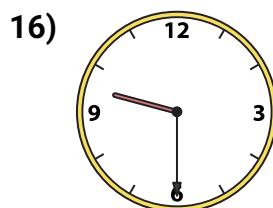
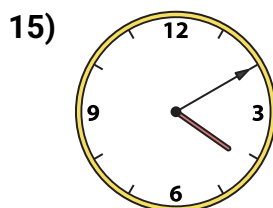
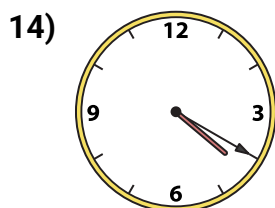
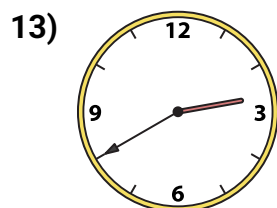
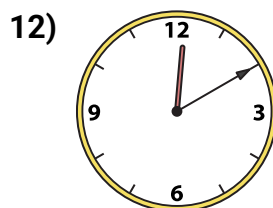
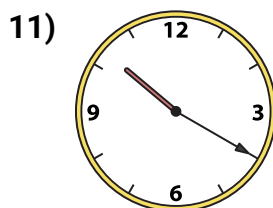
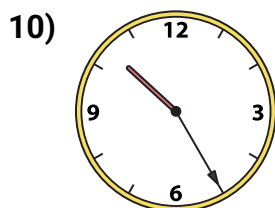
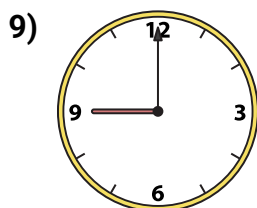
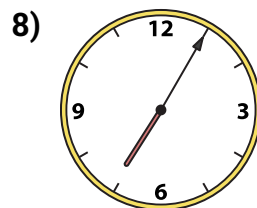
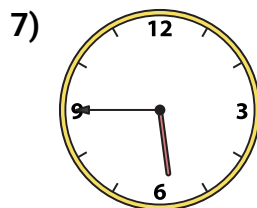
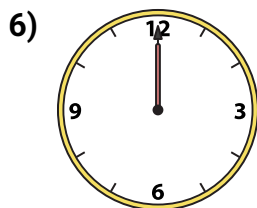
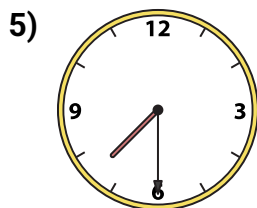
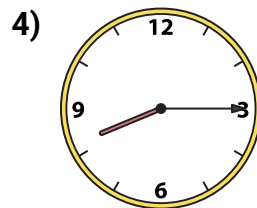
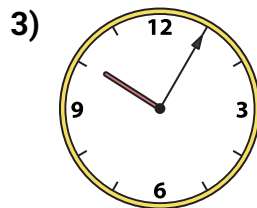
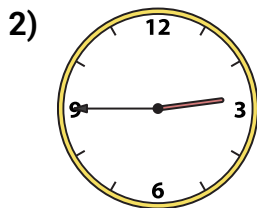
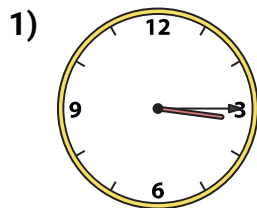


Emparejando Relojes

Nombre: **Clave De Respuestas**

Emparejar el reloj analógico con el reloj digital correspondiente.

Respuestas



A. **4:20**

B. **3:15**

C. **2:45**

D. **10:20**

E. **2:40**

F. **7:30**

G. **5:45**

H. **10:25**

I. **12:00**

J. **10:05**

K. **12:10**

L. **7:05**

M. **9:30**

N. **9:00**

O. **8:15**

P. **4:10**

1. **B**

2. **C**

3. **J**

4. **O**

5. **F**

6. **I**

7. **G**

8. **L**

9. **N**

10. **H**

11. **D**

12. **K**

13. **E**

14. **A**

15. **P**

16. **M**