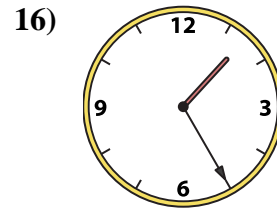
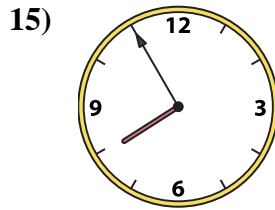
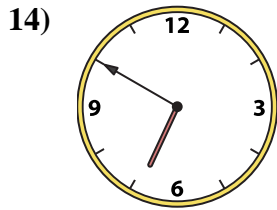
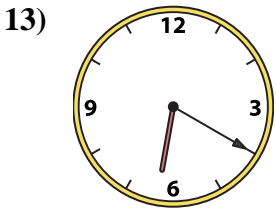
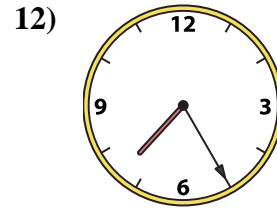
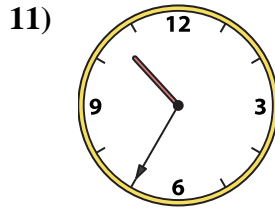
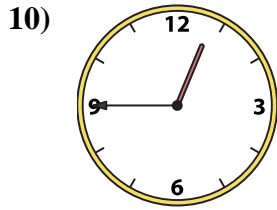
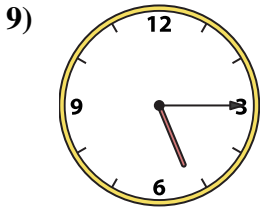
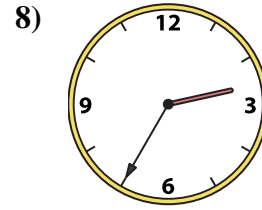
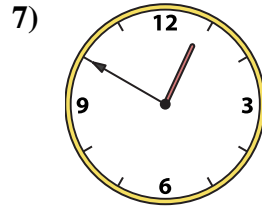
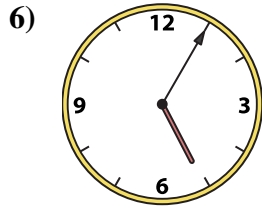
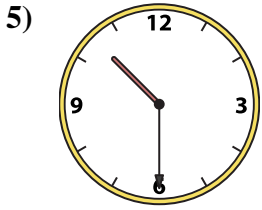
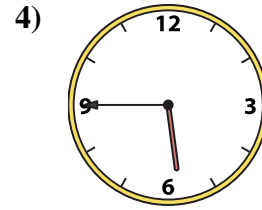
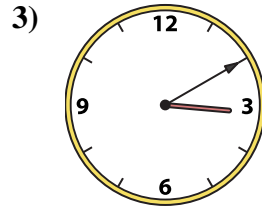






Emparejar el reloj analógico con el reloj digital correspondiente.

Respuestas



1. _____
2. _____
3. _____
4. _____
5. _____
6. _____
7. _____
8. _____
9. _____
10. _____
11. _____
12. _____
13. _____
14. _____
15. _____
16. _____

A. 2:55

B. 10:30

C. 7:55

D. 6:20

E. 3:10

F. 5:45

G. 2:35

H. 1:25

I. 5:05

J. 10:35

K. 7:25

L. 12:50

M. 5:15

N. 12:45

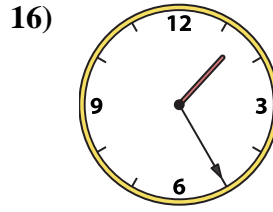
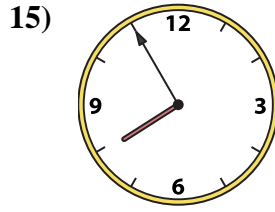
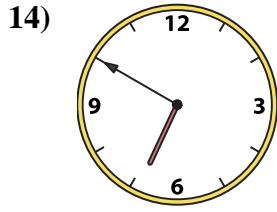
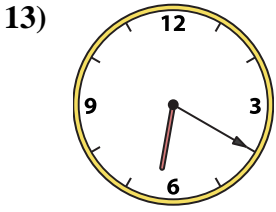
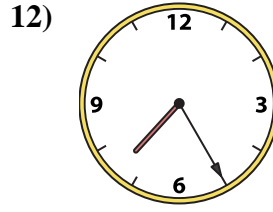
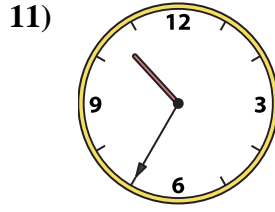
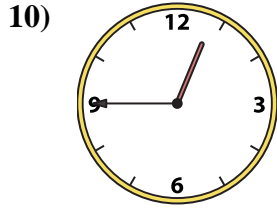
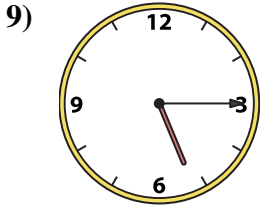
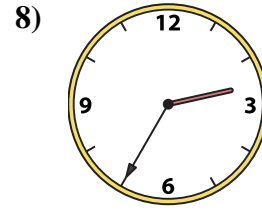
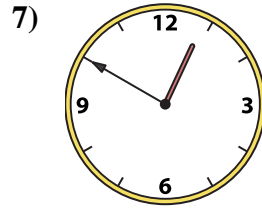
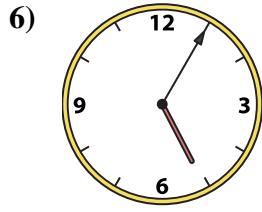
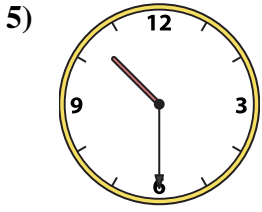
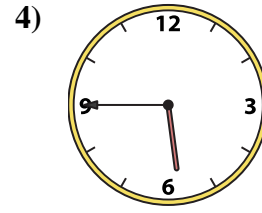
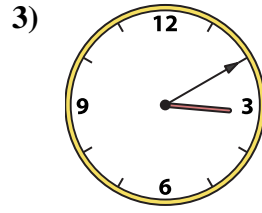
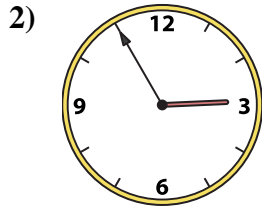

O. 11:00

P. 6:50



Emparejar el reloj analógico con el reloj digital correspondiente.

Respuestas



- 1. **O**
- 2. **A**
- 3. **E**
- 4. **F**
- 5. **B**
- 6. **I**
- 7. **L**
- 8. **G**
- 9. **M**
- 10. **N**
- 11. **J**
- 12. **K**
- 13. **D**
- 14. **P**
- 15. **C**
- 16. **H**

A. **2:55**

B. **10:30**

C. **7:55**

D. **6:20**

E. **3:10**

F. **5:45**

G. **2:35**

H. **1:25**

I. **5:05**

J. **10:35**

K. **7:25**

L. **12:50**

M. **5:15**

N. **12:45**

O. **11:00**

P. **6:50**