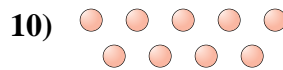
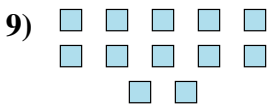

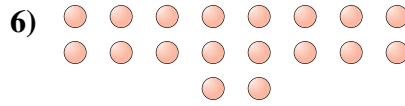

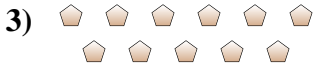
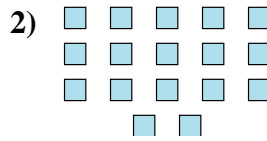
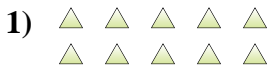




Determinar si el número de figuras en la caja es par o impar.

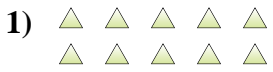
**Respuestas**



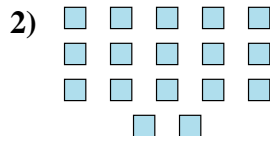
- 1. \_\_\_\_\_
- 2. \_\_\_\_\_
- 3. \_\_\_\_\_
- 4. \_\_\_\_\_
- 5. \_\_\_\_\_
- 6. \_\_\_\_\_
- 7. \_\_\_\_\_
- 8. \_\_\_\_\_
- 9. \_\_\_\_\_
- 10. \_\_\_\_\_



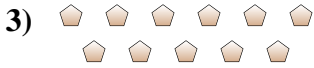
Determinar si el número de figuras en la caja es par o impar.




10



17



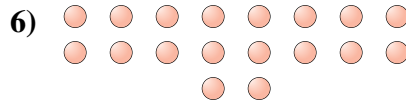
11




19



14



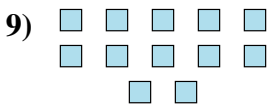
18



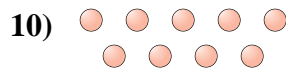
18



8



12



9

**Respuestas**

1. **Par**

2. **Impar**

3. **Impar**

4. **Impar**

5. **Par**

6. **Par**

7. **Par**

8. **Par**

9. **Par**

10. **Impar**