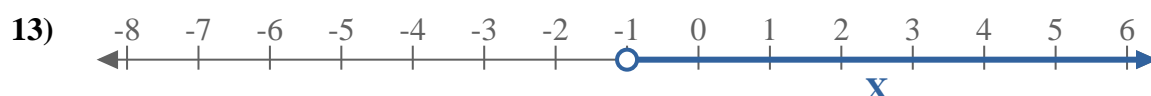
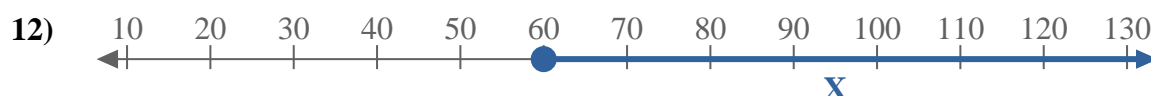
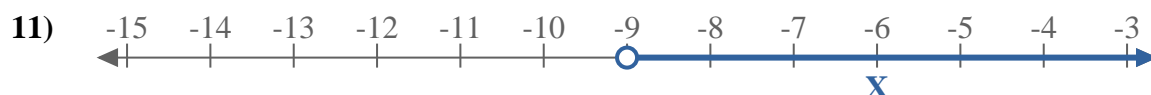
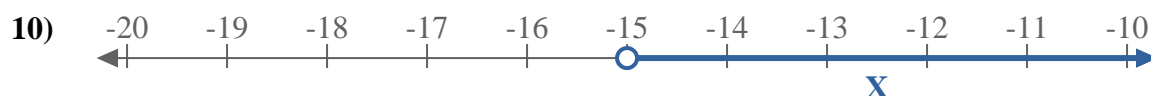
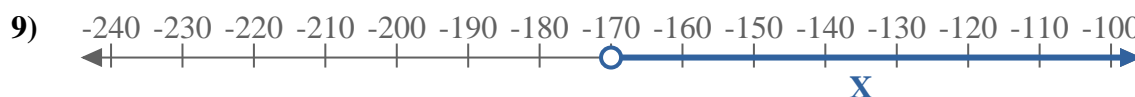
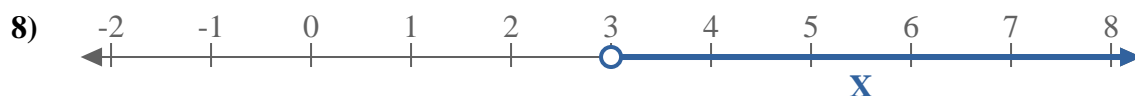
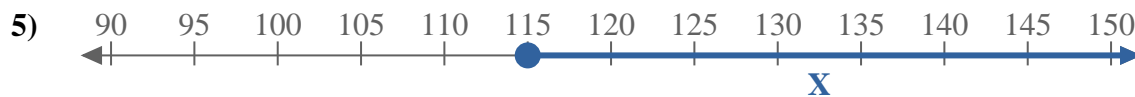
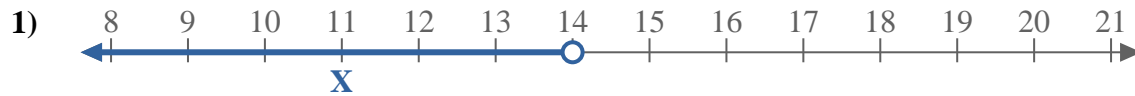




Escribe una desigualdad para expresar la línea de número.



**Respuestas**

Ej.  $x \geq -3$

1. \_\_\_\_\_

2. \_\_\_\_\_

3. \_\_\_\_\_

4. \_\_\_\_\_

5. \_\_\_\_\_

6. \_\_\_\_\_

7. \_\_\_\_\_

8. \_\_\_\_\_

9. \_\_\_\_\_

10. \_\_\_\_\_

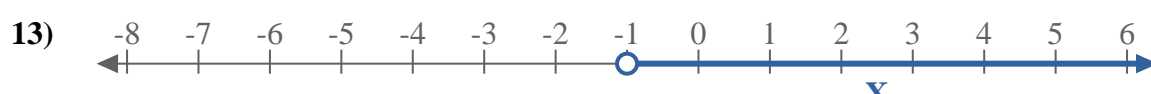
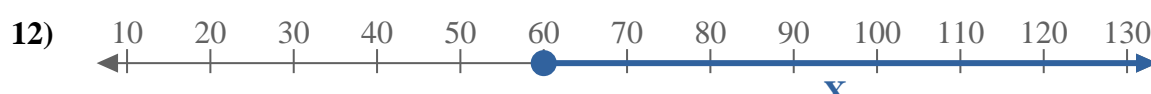
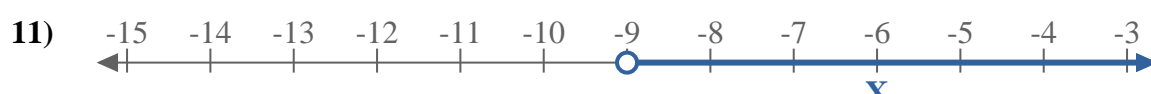
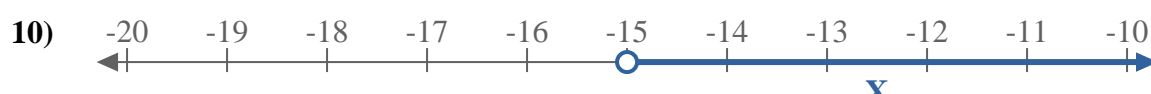
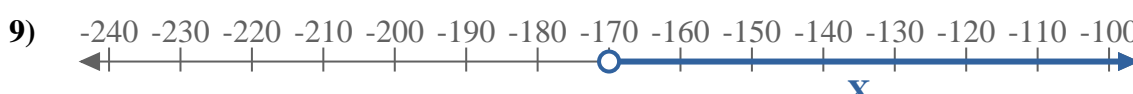
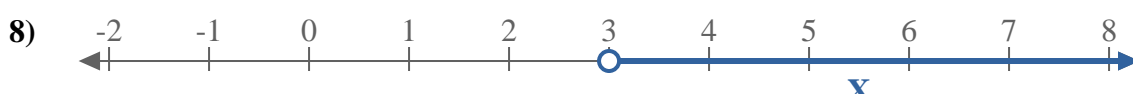
11. \_\_\_\_\_

12. \_\_\_\_\_

13. \_\_\_\_\_



Escribe una desigualdad para expresar la línea de número.



**Respuestas**

Ej.  $X \geq -3$

1.  $X < 14$

2.  $X \leq 5$

3.  $X \leq -19$

4.  $X < -120$

5.  $X \geq 115$

6.  $X \leq 5$

7.  $X \geq -70$

8.  $X > 3$

9.  $X > -170$

10.  $X > -15$

11.  $X > -9$

12.  $X \geq 60$

13.  $X > -1$