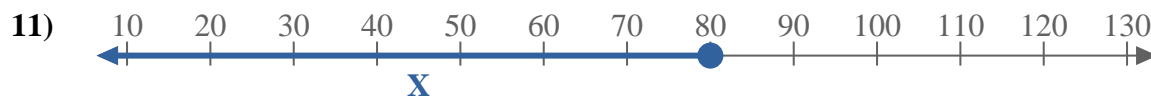
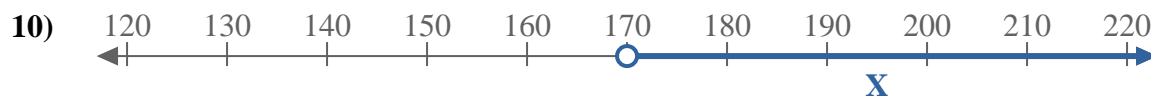
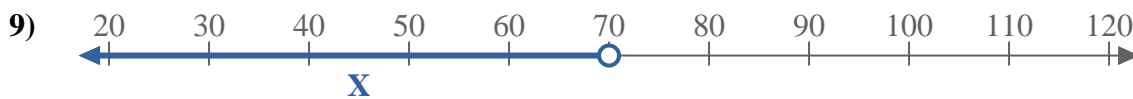
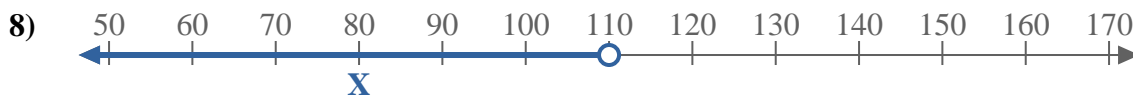

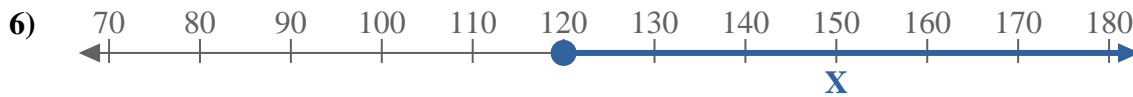
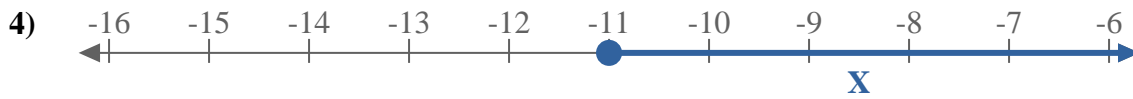
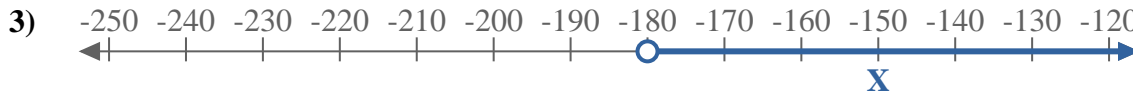




Escribe una desigualdad para expresar la línea de número.



**Respuestas**

Ej.  $X \leq 170$

1. \_\_\_\_\_

2. \_\_\_\_\_

3. \_\_\_\_\_

4. \_\_\_\_\_

5. \_\_\_\_\_

6. \_\_\_\_\_

7. \_\_\_\_\_

8. \_\_\_\_\_

9. \_\_\_\_\_

10. \_\_\_\_\_

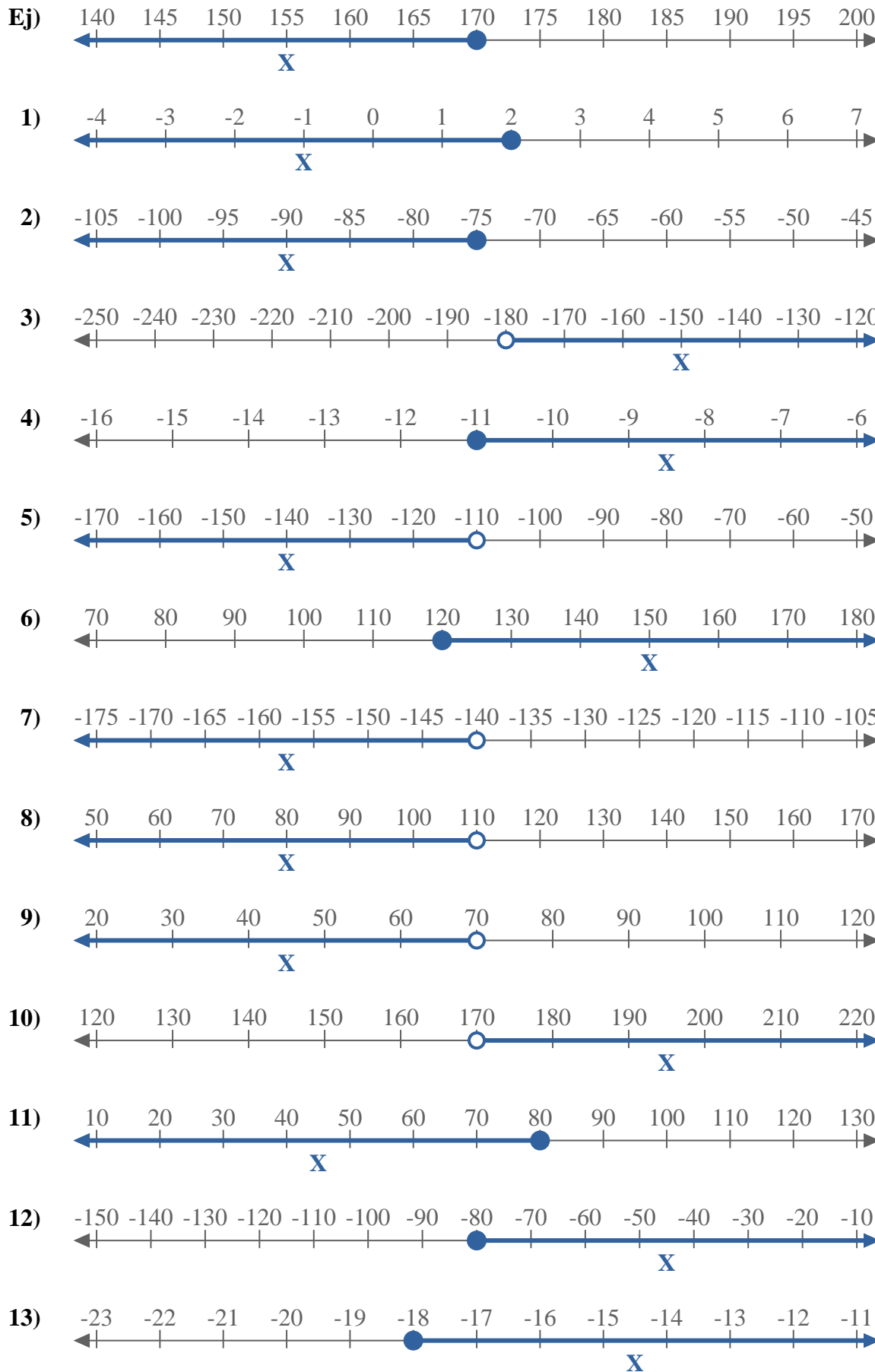
11. \_\_\_\_\_

12. \_\_\_\_\_

13. \_\_\_\_\_



Escribe una desigualdad para expresar la línea de número.



**Respuestas**

- Ej.  $X \leq 170$
1.  $X \leq 2$
2.  $X \leq -75$
3.  $X > -180$
4.  $X \geq -11$
5.  $X < -110$
6.  $X \geq 120$
7.  $X < -140$
8.  $X < 110$
9.  $X < 70$
10.  $X > 170$
11.  $X \leq 80$
12.  $X \geq -80$
13.  $X \geq -18$