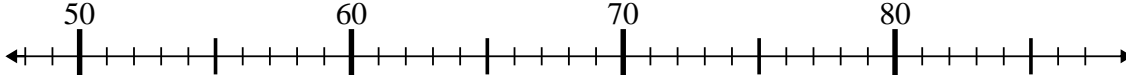




Usar las líneas de números para resolver cada problema.

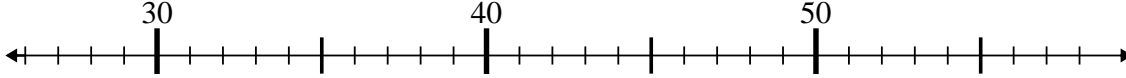
Respuestas

1) $68 - 17 = ?$



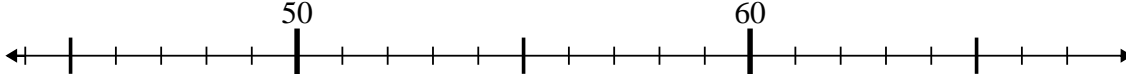
1. _____

2) $49 + 4 = ?$



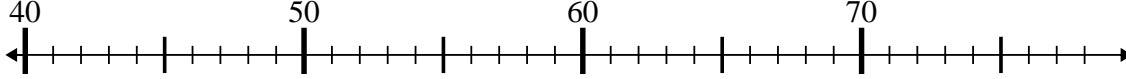
2. _____

3) $57 - 10 = ?$



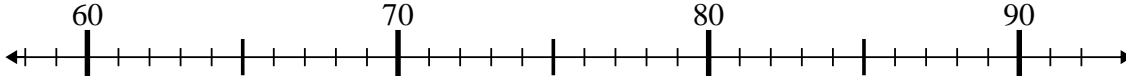
3. _____

4) $67 - 7 = ?$



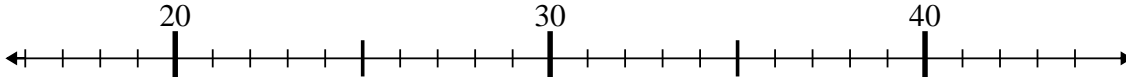
4. _____

5) $63 - 1 = ?$



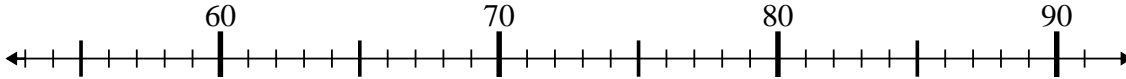
5. _____

6) $25 - 1 = ?$



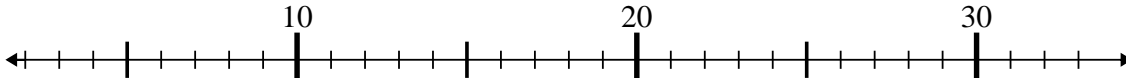
6. _____

7) $58 + 9 = ?$



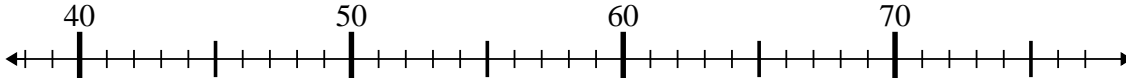
7. _____

8) $8 + 10 = ?$



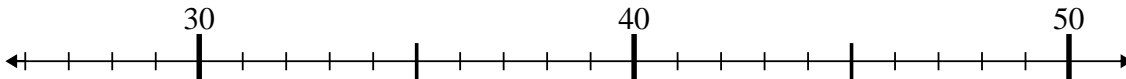
8. _____

9) $58 - 12 = ?$



9. _____

10) $41 - 1 = ?$

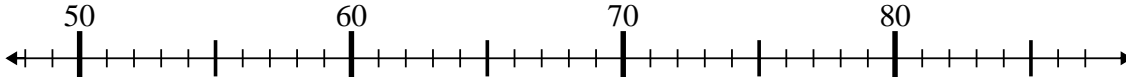


10. _____

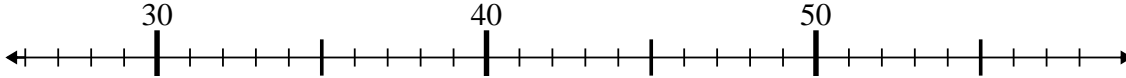


Usar las líneas de números para resolver cada problema.

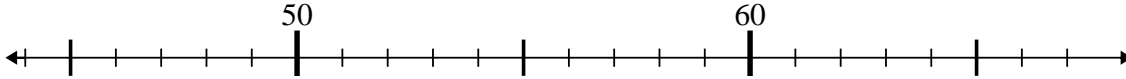
1) $68 - 17 = ?$



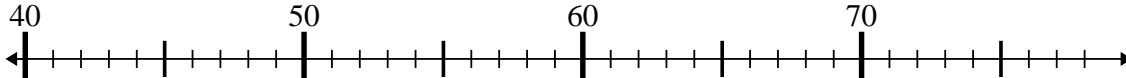
2) $49 + 4 = ?$



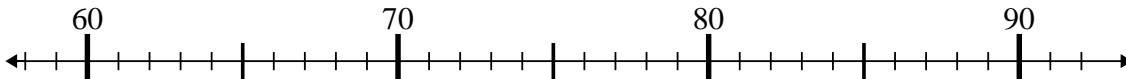
3) $57 - 10 = ?$



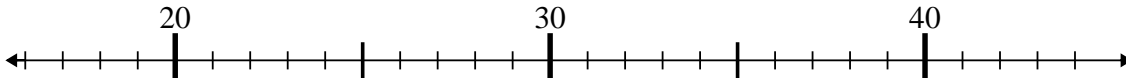
4) $67 - 7 = ?$



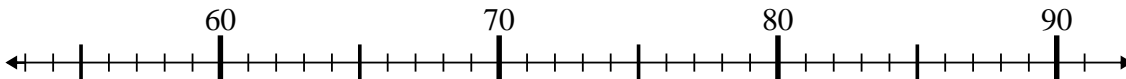
5) $63 - 1 = ?$



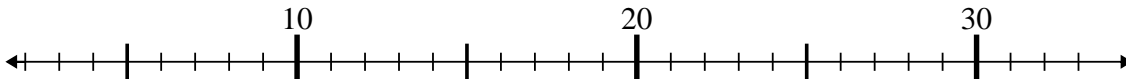
6) $25 - 1 = ?$



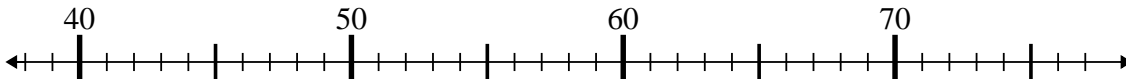
7) $58 + 9 = ?$



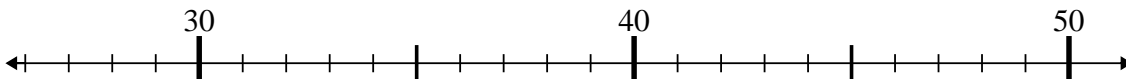
8) $8 + 10 = ?$



9) $58 - 12 = ?$



10) $41 - 1 = ?$



Respuestas

1. 51
2. 53
3. 47
4. 60
5. 62
6. 24
7. 67
8. 18
9. 46
10. 40