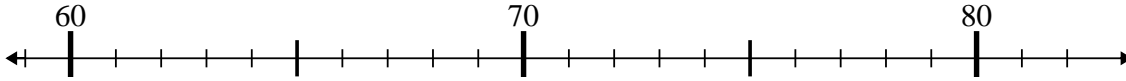




Usar las líneas de números para resolver cada problema.

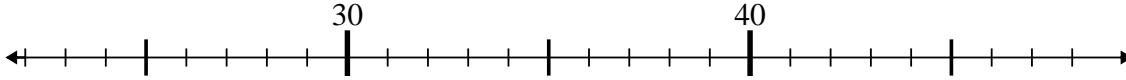
Respuestas

1) $65 - 0 = ?$



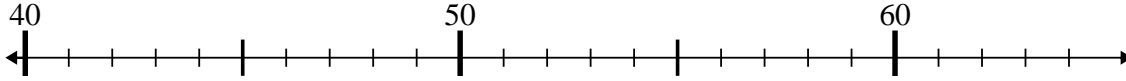
1. _____

2) $30 - 1 = ?$



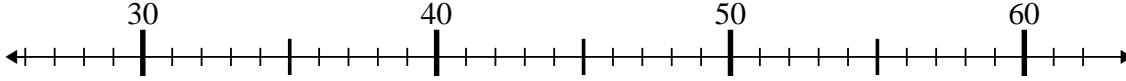
2. _____

3) $54 - 1 = ?$



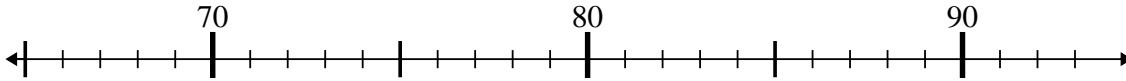
3. _____

4) $42 + 7 = ?$



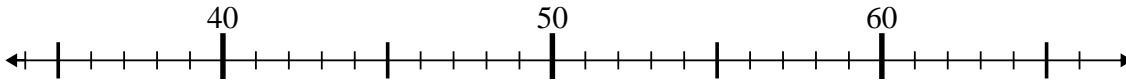
4. _____

5) $68 + 10 = ?$



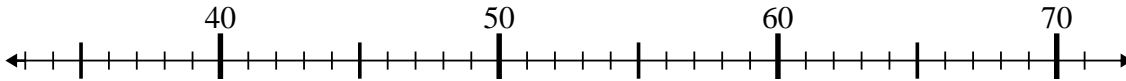
5. _____

6) $48 - 9 = ?$



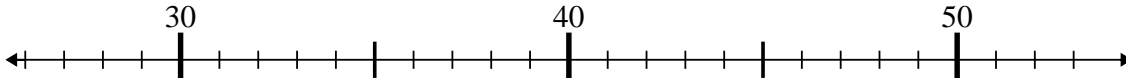
6. _____

7) $62 - 29 = ?$



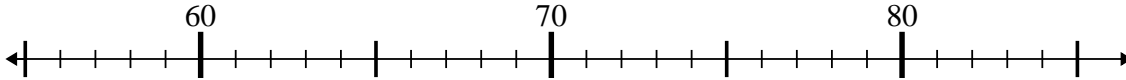
7. _____

8) $49 - 10 = ?$



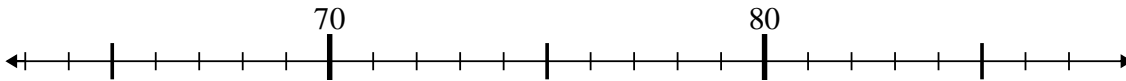
8. _____

9) $55 + 25 = ?$



9. _____

10) $69 - 1 = ?$

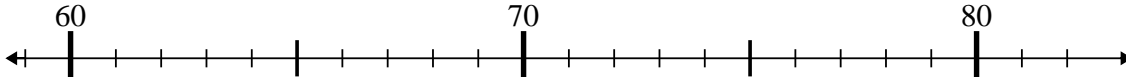


10. _____

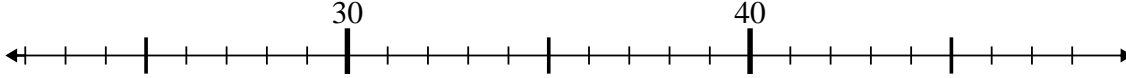


Usar las líneas de números para resolver cada problema.

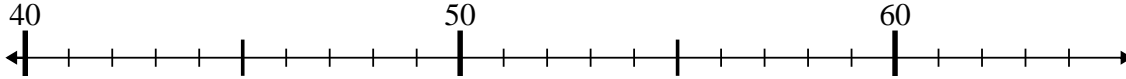
1) $65 - 0 = ?$



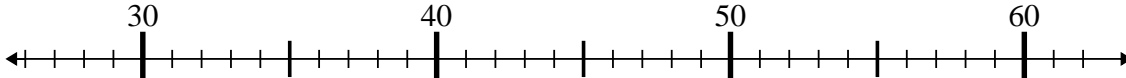
2) $30 - 1 = ?$



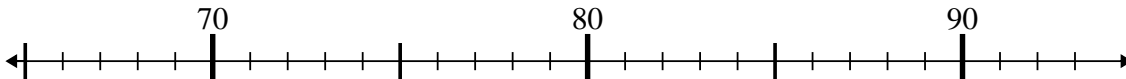
3) $54 - 1 = ?$



4) $42 + 7 = ?$



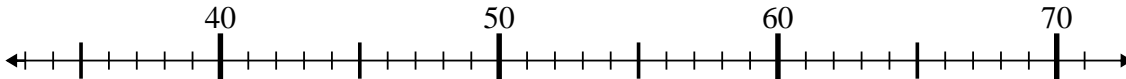
5) $68 + 10 = ?$



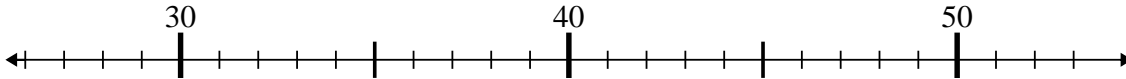
6) $48 - 9 = ?$



7) $62 - 29 = ?$



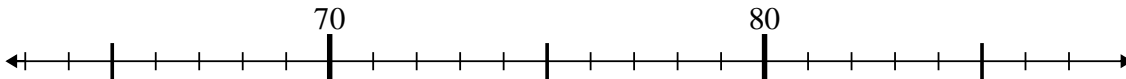
8) $49 - 10 = ?$



9) $55 + 25 = ?$



10) $69 - 1 = ?$



Respuestas

1. 65
2. 29
3. 53
4. 49
5. 78
6. 39
7. 33
8. 39
9. 80
10. 68