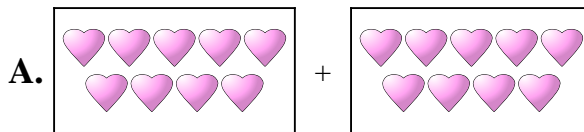




Iguala cada ecuación de suma a su equivalente visual.

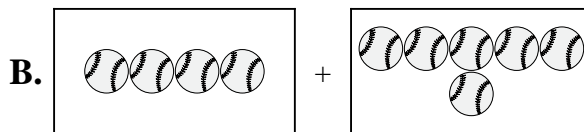
**Respuestas**

1)  $8 + 6$



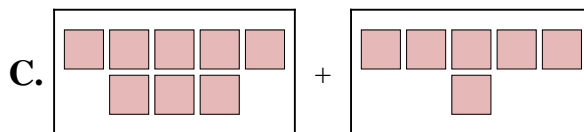
1. \_\_\_\_\_

2)  $3 + 2$



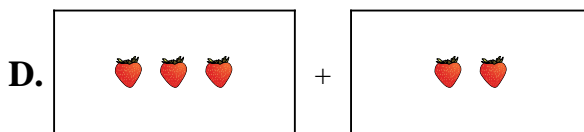
2. \_\_\_\_\_

3)  $4 + 6$



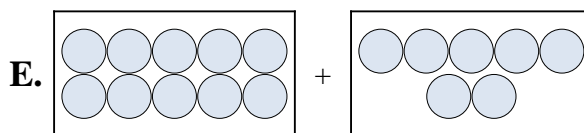
3. \_\_\_\_\_

4)  $5 + 2$



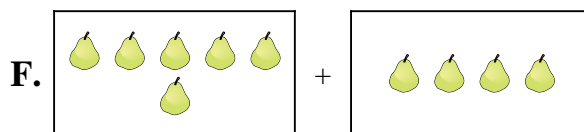
4. \_\_\_\_\_

5)  $6 + 4$



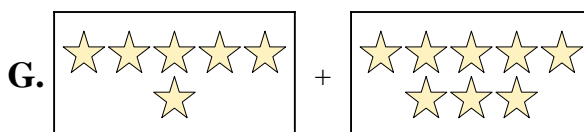
5. \_\_\_\_\_

6)  $9 + 9$



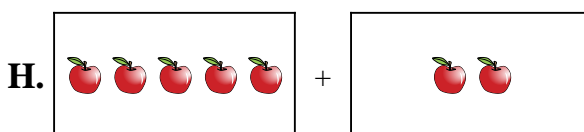
6. \_\_\_\_\_

7)  $6 + 3$



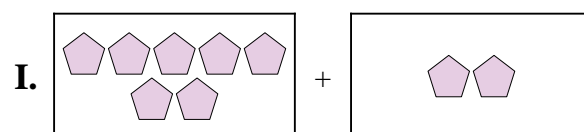
7. \_\_\_\_\_

8)  $6 + 8$




8. \_\_\_\_\_

9)  $7 + 2$



9. \_\_\_\_\_

10)  $10 + 7$

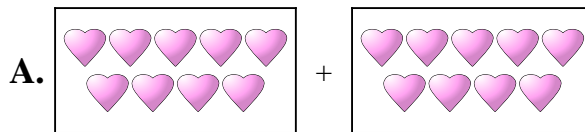


10. \_\_\_\_\_

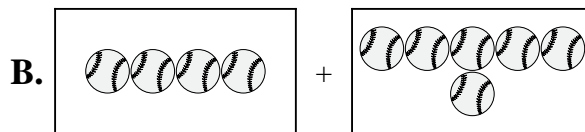


Iguala cada ecuación de suma a su equivalente visual.

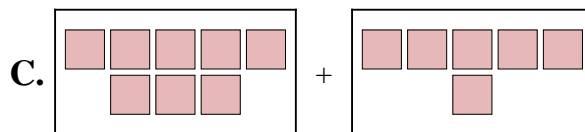
1)  $8 + 6$



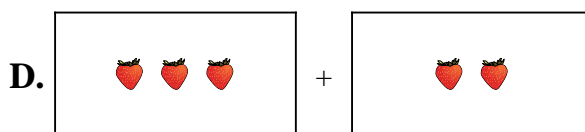
2)  $3 + 2$



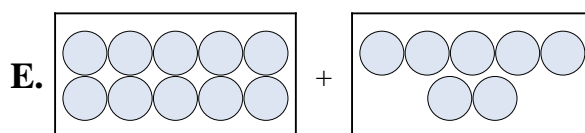
3)  $4 + 6$



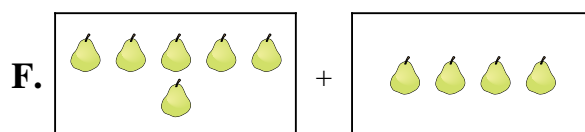
4)  $5 + 2$



5)  $6 + 4$



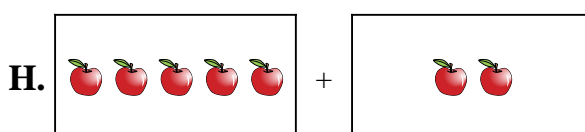
6)  $9 + 9$



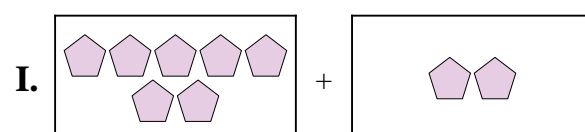
7)  $6 + 3$




8)  $6 + 8$



9)  $7 + 2$



10)  $10 + 7$



**Respuestas**

1. **C**

2. **D**

3. **B**

4. **H**

5. **F**

6. **A**

7. **J**

8. **G**

9. **I**

10. **E**