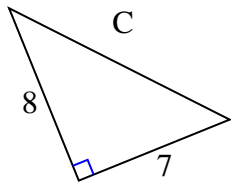




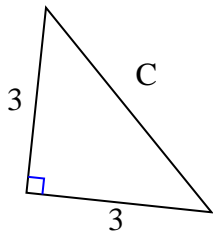
Encuentra el valor de 'C' redondea tu respuesta al centésimo más cercano.

Respuestas

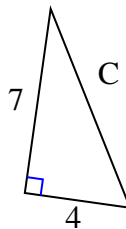
1)



2)



3)



1. _____

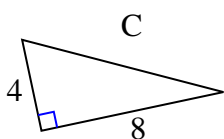
2. _____

3. _____

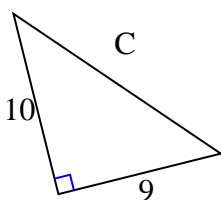
4. _____

5. _____

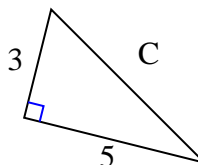
4)



5)



6)



6. _____

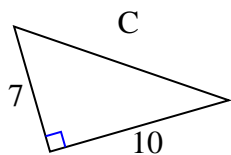
7. _____

8. _____

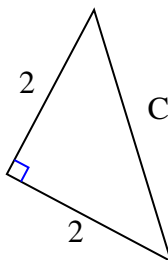
9. _____

10. _____

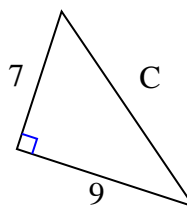
7)



8)



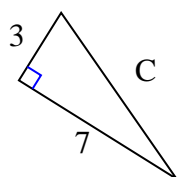
9)



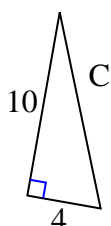
11. _____

12. _____

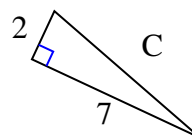
10)



11)



12)

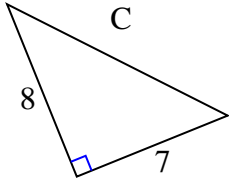




Encuentra el valor de 'C' redondea tu respuesta al centésimo más cercano.

Respuestas

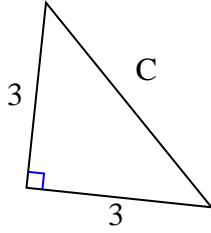
1)



$$64 + 49 = 113$$

$$\sqrt{113} = 10.63$$

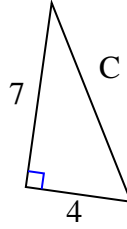
2)



$$9 + 9 = 18$$

$$\sqrt{18} = 4.24$$

3)



$$49 + 16 = 65$$

$$\sqrt{65} = 8.06$$

1. 10.63

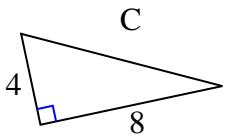
2. 4.24

3. 8.06

4. 8.94

5. 13.45

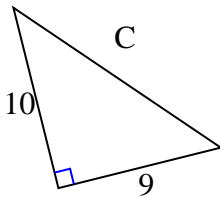
4)



$$16 + 64 = 80$$

$$\sqrt{80} = 8.94$$

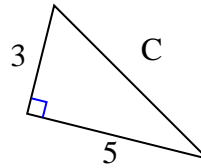
5)



$$100 + 81 = 181$$

$$\sqrt{181} = 13.45$$

6)



$$9 + 25 = 34$$

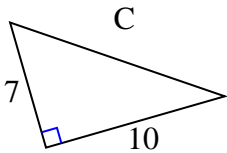
$$\sqrt{34} = 5.83$$

6. 5.83

7. 12.21

8. 2.83

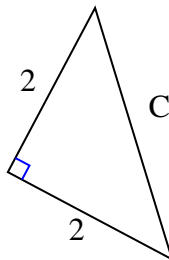
7)



$$49 + 100 = 149$$

$$\sqrt{149} = 12.21$$

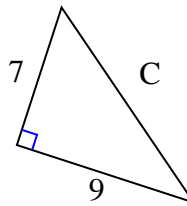
8)



$$4 + 4 = 8$$

$$\sqrt{8} = 2.83$$

9)



$$49 + 81 = 130$$

$$\sqrt{130} = 11.4$$

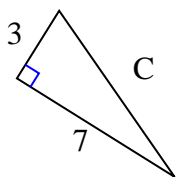
9. 11.4

10. 7.62

11. 10.77

12. 7.28

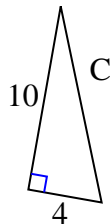
10)



$$9 + 49 = 58$$

$$\sqrt{58} = 7.62$$

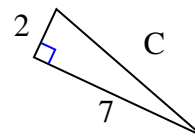
11)



$$100 + 16 = 116$$

$$\sqrt{116} = 10.77$$

12)



$$4 + 49 = 53$$

$$\sqrt{53} = 7.28$$