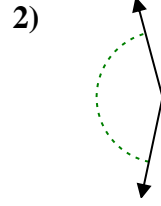
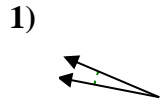
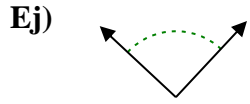




Determina si el ángulo mostrado es agudo, obtuso, derecho o recto.

Respuestas

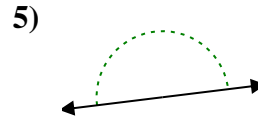
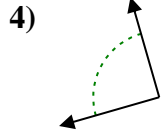
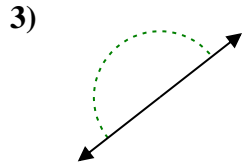
Ej. **derecho**



Ej. _____

1. _____

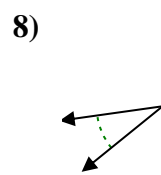
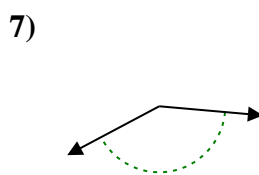
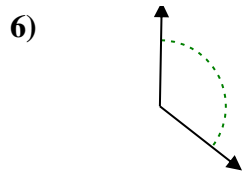
2. _____



3. _____

4. _____

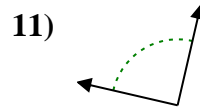
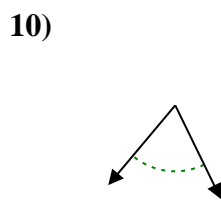
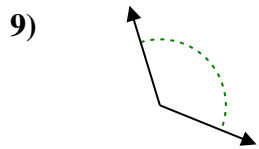
5. _____



6. _____

7. _____

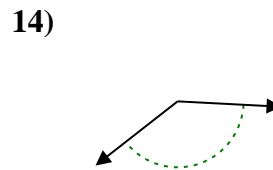
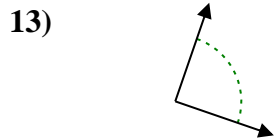
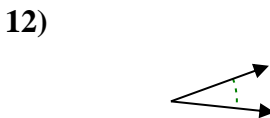
8. _____



9. _____

10. _____

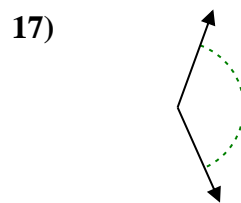
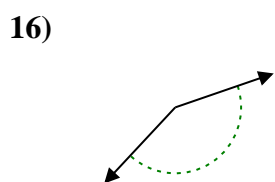
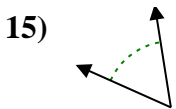
11. _____



12. _____

13. _____

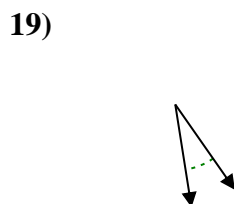
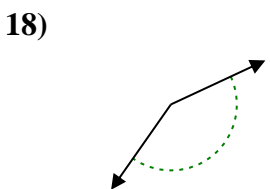
14. _____



15. _____

16. _____

17. _____



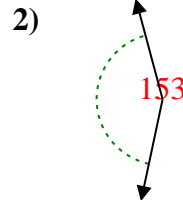
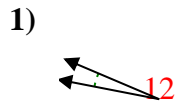
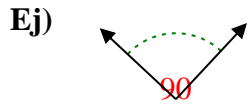
18. _____

19. _____

20. _____

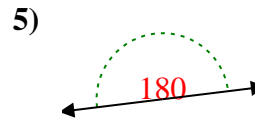
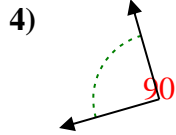
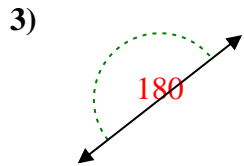


Determina si el ángulo mostrado es agudo, obtuso, derecho o recto.



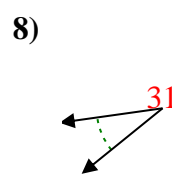
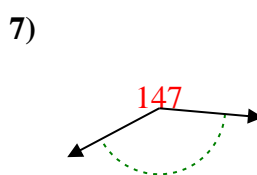
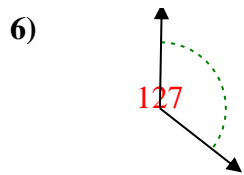
Respuestas

Ej. derecho



1. agudo

2. obtuso



3. recto

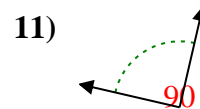
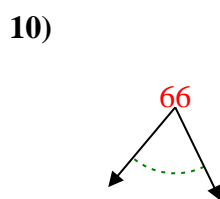
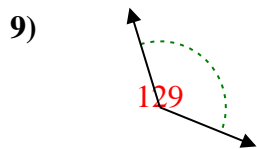
4. derecho

5. recto

6. obtuso

7. obtuso

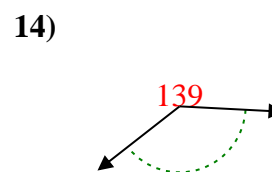
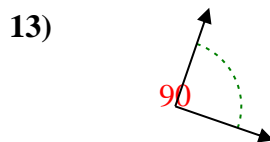

8. agudo



9. obtuso

10. agudo

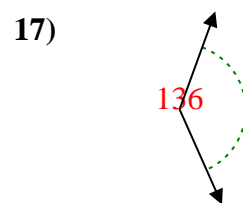
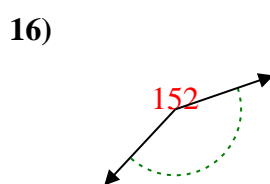
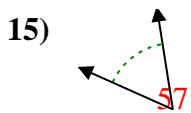
11. derecho



12. agudo

13. derecho

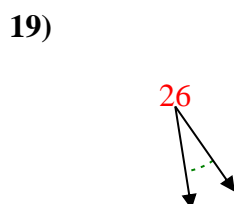
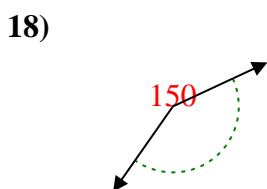
14. obtuso



15. agudo

16. obtuso

17. obtuso



18. obtuso

19. agudo

20. agudo