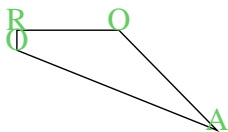




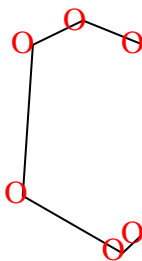


Cuenta el número de ángulos Agudos, Obtusos y Rectos dentro de cada figura

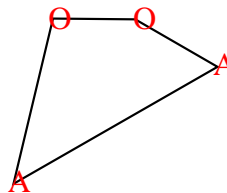
Ej)



1)



2)

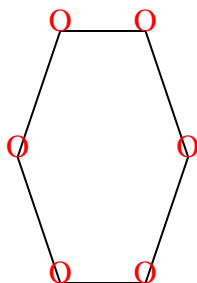


**Respuestas**

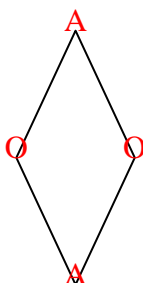
A O R

| Ej. | A        | O        | R        |
|-----|----------|----------|----------|
| Ej. | <u>1</u> | <u>2</u> | <u>1</u> |
| 1.  | <u>0</u> | <u>6</u> | <u>0</u> |
| 2.  | <u>2</u> | <u>2</u> | <u>0</u> |
| 3.  | <u>0</u> | <u>6</u> | <u>0</u> |
| 4.  | <u>2</u> | <u>2</u> | <u>0</u> |
| 5.  | <u>0</u> | <u>3</u> | <u>2</u> |
| 6.  | <u>1</u> | <u>4</u> | <u>0</u> |
| 7.  | <u>1</u> | <u>1</u> | <u>2</u> |
| 8.  | <u>0</u> | <u>2</u> | <u>3</u> |
| 9.  | <u>2</u> | <u>0</u> | <u>1</u> |
| 10. | <u>0</u> | <u>2</u> | <u>3</u> |
| 11. | <u>3</u> | <u>0</u> | <u>0</u> |

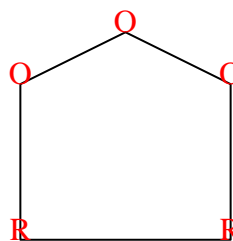
3)



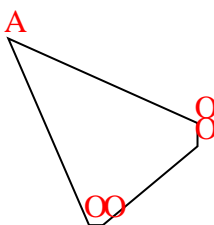
4)



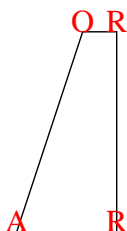
5)



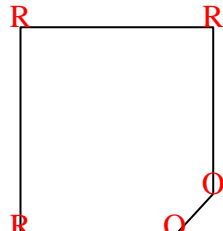
6)



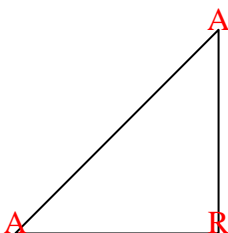
7)



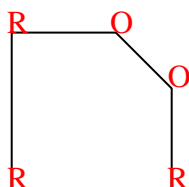
8)



9)



10)



11)

