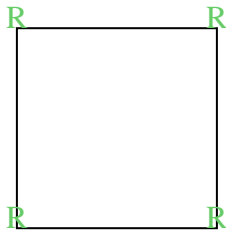




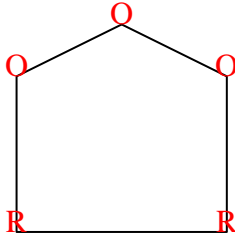


Cuenta el número de ángulos Agudos, Obtusos y Rectos dentro de cada figura

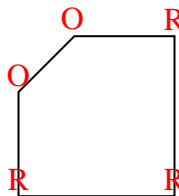
Ej)



1)



2)



**Respuestas**

A O R

Ej. 0 0 4

1. 0 3 2

2. 0 2 3

3. 0 4 1

4. 0 7 0

5. 2 0 1

6. 2 2 0

7. 0 0 4

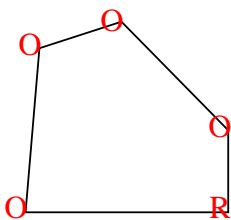
8. 1 2 1

9. 0 8 0

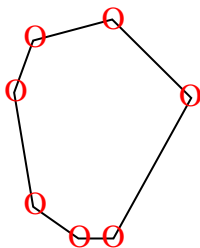
10. 0 6 0

11. 3 0 0

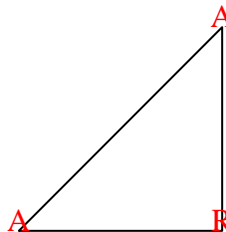
3)



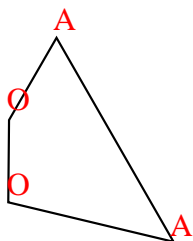
4)




5)



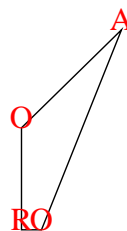
6)



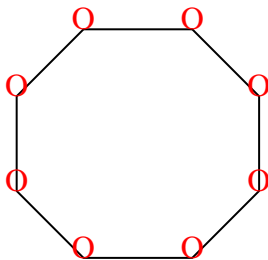
7)



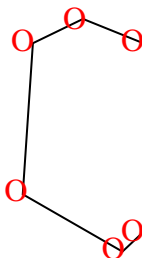
8)



9)



10)



11)

