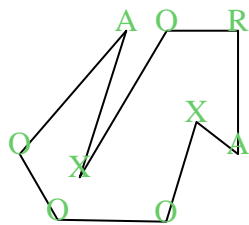




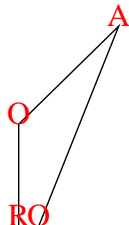


Cuenta el número de ángulos Agudos, Obtusos, Rectos y Reflejos dentro de cada figura.

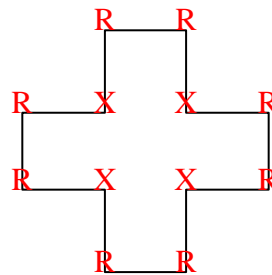
Ej)



1)



2)



**Respuestas**

A O R X

Ej. 2 4 1 2

1. 1 2 1 0

2. 0 0 8 4

3. 4 2 0 4

4. 2 2 0 0

5. 0 0 8 4

6. 0 2 3 0

7. 4 1 0 3

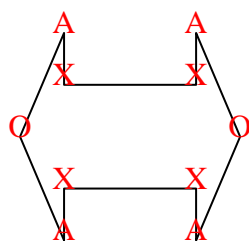
8. 2 2 1 1

9. 2 0 1 0

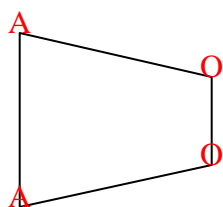
10. 2 4 4 0

11. 0 6 0 0

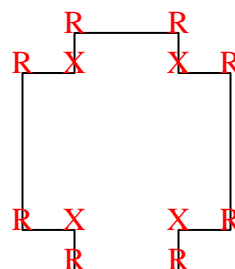
3)



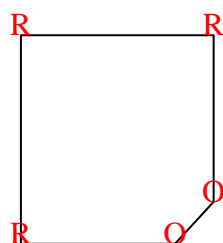
4)



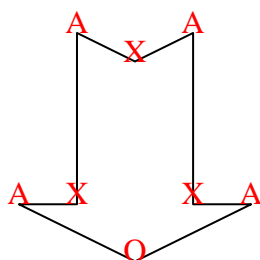
5)



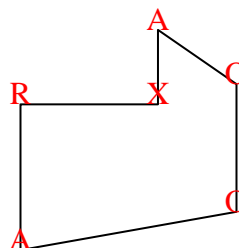
6)



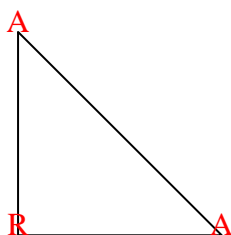
7)



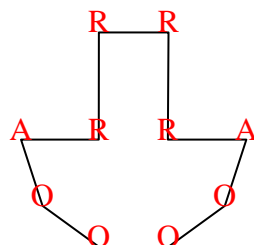
8)



9)



10)



11)

