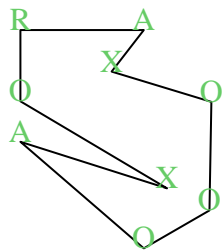


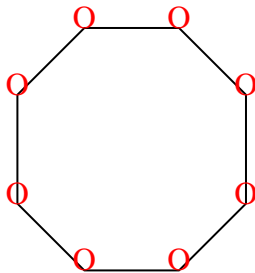


Cuenta el número de ángulos Agudos, Obtusos, Rectos y Reflejos dentro de cada figura.

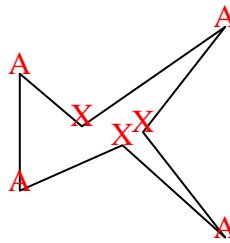
Ej)



1)



2)



Respuestas

A O R X

Ej. 2 4 1 2

1. 0 8 0 0

2. 4 0 0 3

3. 4 1 0 3

4. 3 0 0 0

5. 2 2 1 2

6. 2 4 4 0

7. 0 0 4 0

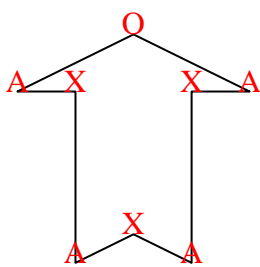
8. 0 0 8 4

9. 1 2 4 2

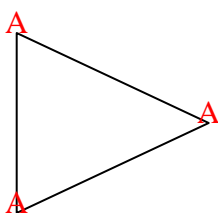
10. 0 6 0 0

11. 2 1 1 1

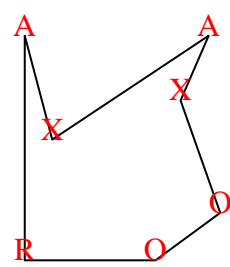
3)



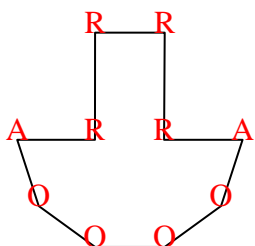
4)



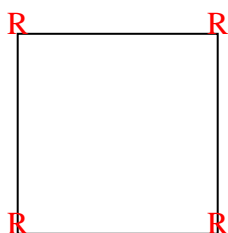
5)



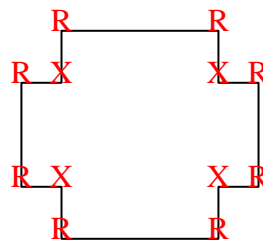
6)



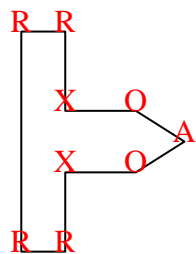
7)



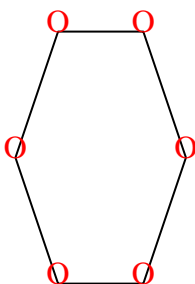
8)



9)



10)



11)

