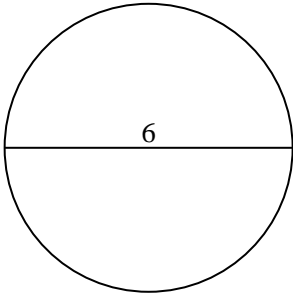


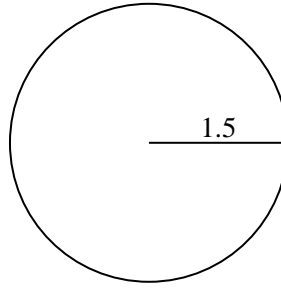


Encuentra el área y circunferencia de cada círculo. Los círculos no están a escala.

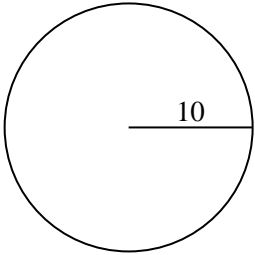
1)



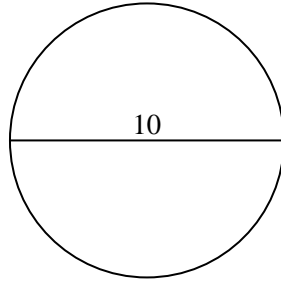
2)



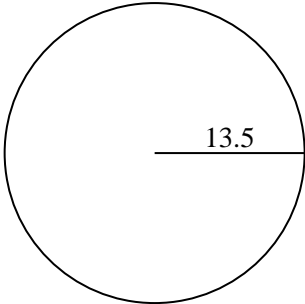
3)



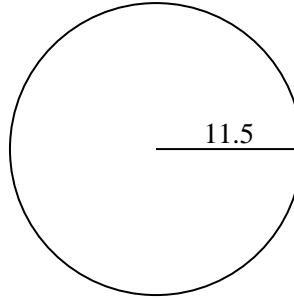
4)



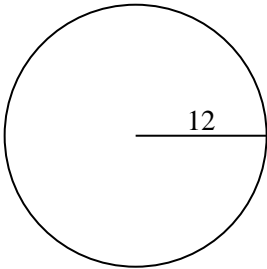
5)



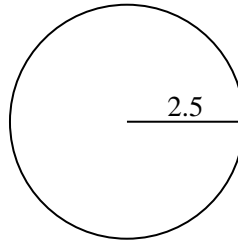
6)



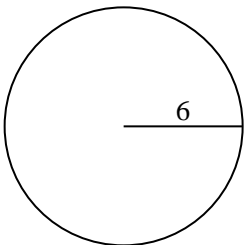
7)



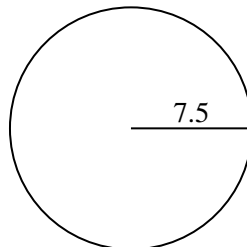
8)



9)



10)



Respuestas

1a. _____

1c. _____

2a. _____

2c. _____

3a. _____

3c. _____

4a. _____

4c. _____

5a. _____

5c. _____

6a. _____

6c. _____

7a. _____

7c. _____

8a. _____

8c. _____

9a. _____

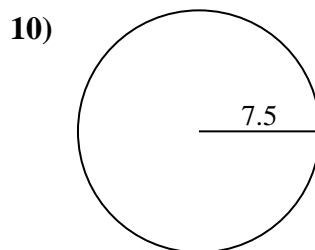
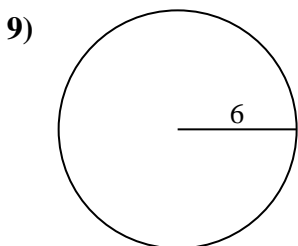
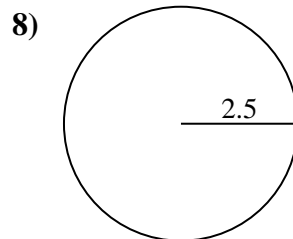
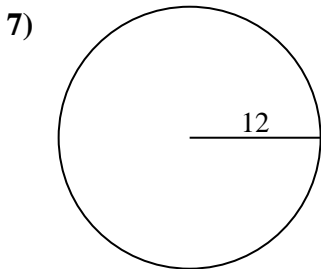
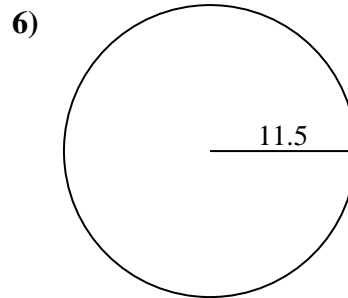
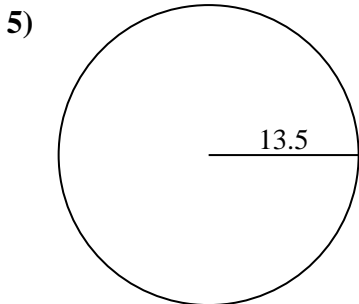
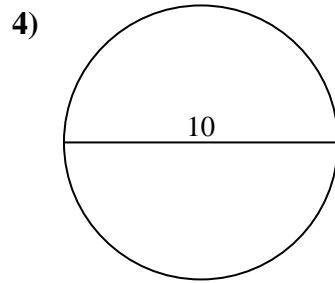
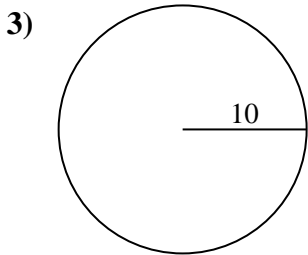
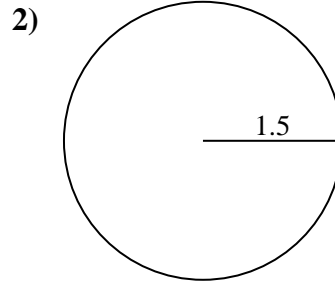
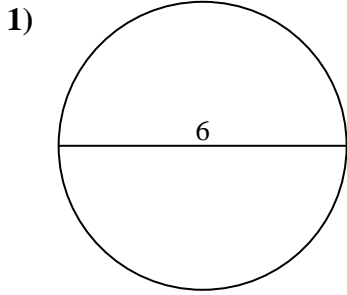
9c. _____

10a. _____

10c. _____



Encuentra el área y circunferencia de cada círculo. Los círculos no están a escala.



Respuestas

1a. 28.27 cm²

1c. 18.85 cm

2a. 7.07 cm²

2c. 9.42 cm

3a. 314.16 cm²

3c. 62.83 cm

4a. 78.54 cm²

4c. 31.42 cm

5a. 572.56 cm²

5c. 84.82 cm

6a. 415.48 cm²

6c. 72.26 cm

7a. 452.39 cm²

7c. 75.4 cm

8a. 19.63 cm²

8c. 15.71 cm

9a. 113.1 cm²

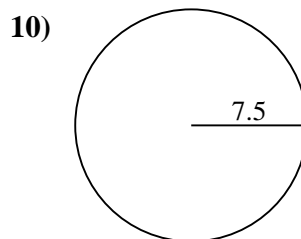
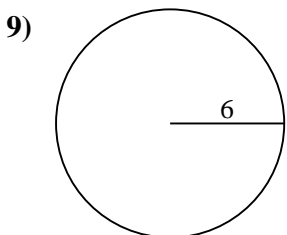
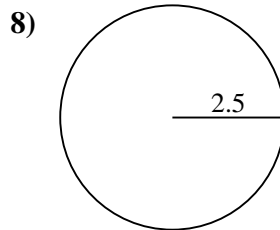
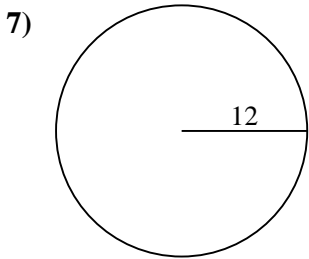
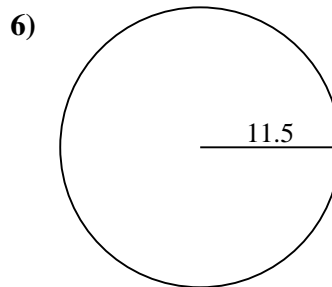
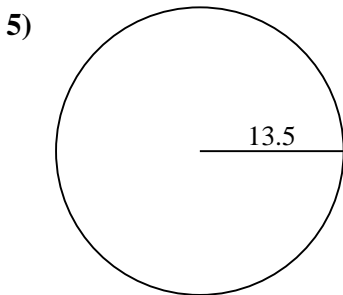
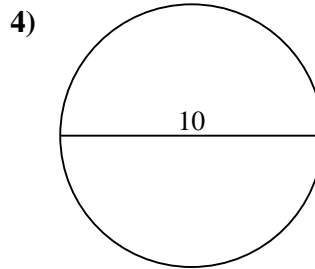
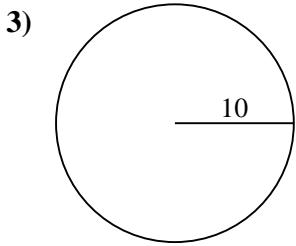
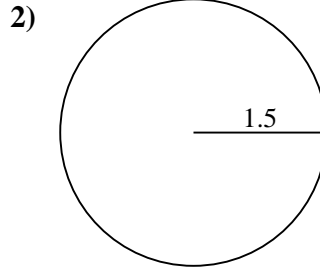
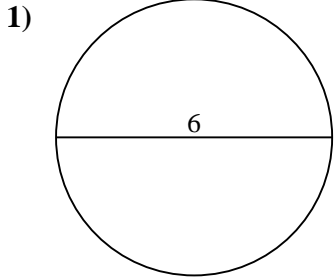
9c. 37.7 cm

10a. 176.71 cm²

10c. 47.12 cm



Encuentra el área y circunferencia de cada círculo. Los círculos no están a escala.



Respuestas

1a. _____

1c. _____

2a. _____

2c. _____

3a. _____

3c. _____

4a. _____

4c. _____

5a. _____

5c. _____

6a. _____

6c. _____

7a. _____

7c. _____

8a. _____

8c. _____

9a. _____

9c. _____

10a. _____

10c. _____