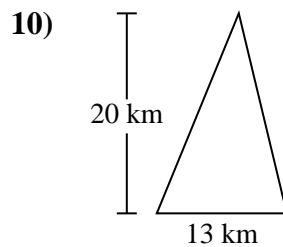
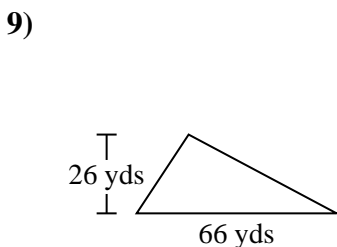
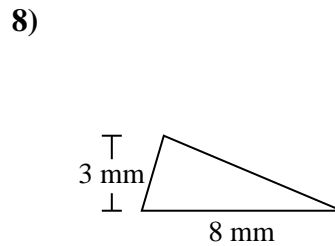
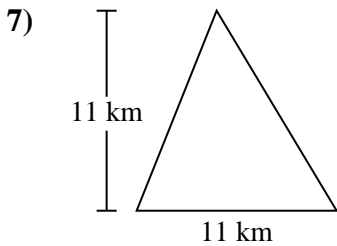
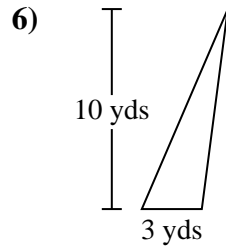
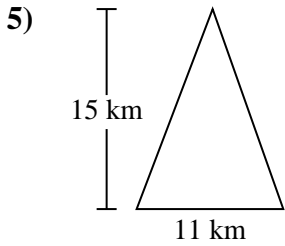
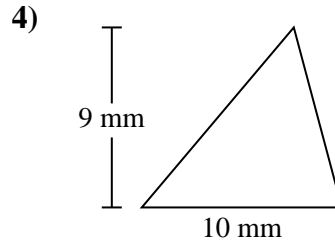
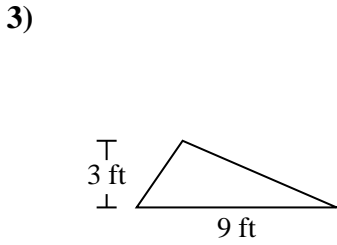
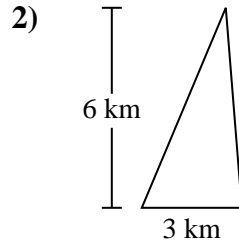
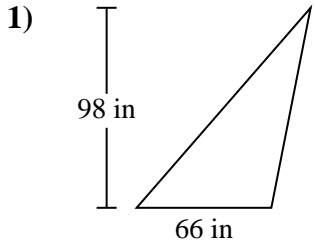




Encuentra el área de cada triángulo. Las unidades no están a escala.

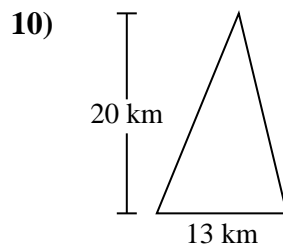
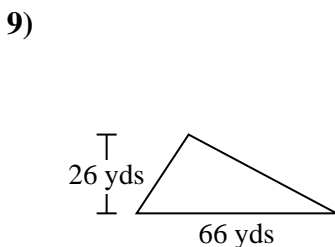
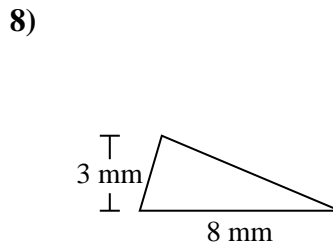
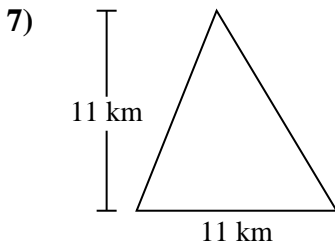
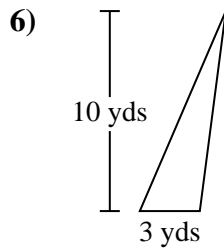
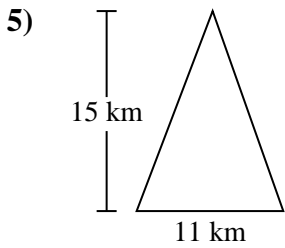
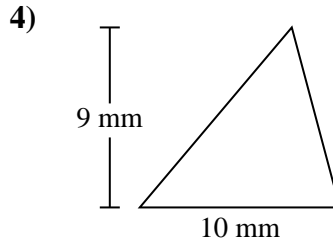
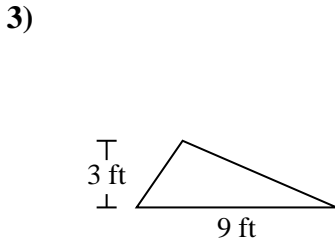
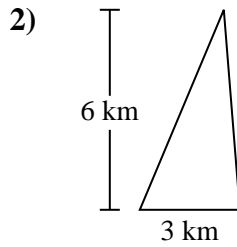
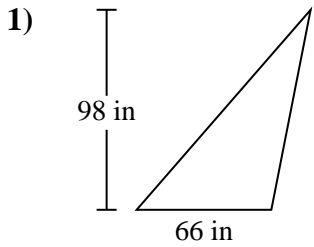


Respuestas

1. _____
2. _____
3. _____
4. _____
5. _____
6. _____
7. _____
8. _____
9. _____
10. _____



Encuentra el área de cada triángulo. Las unidades no están a escala.



Respuestas

1. 3,234 in²
2. 9 km²
3. 13.5 ft²
4. 45 mm²
5. 82.5 km²
6. 15 yds²
7. 60.5 km²
8. 12 mm²
9. 858 yds²
10. 130 km²



Encuentra el área de cada triángulo. Las unidades no están a escala.

Respuestas

82.5 km²

130 km²

15 yds²

12 mm²

858 yds²

45 mm²

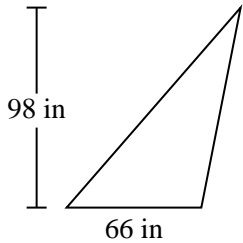
13.5 ft²

9 km²

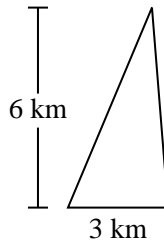
60.5 km²

3,234 in²

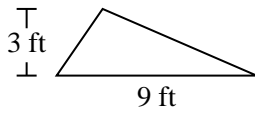
1)



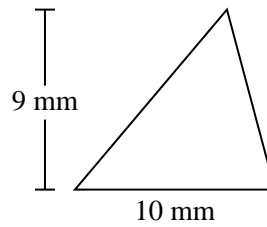
2)



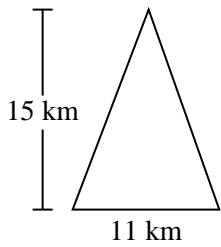
3)



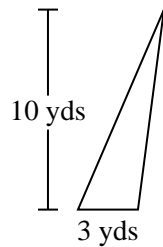
4)



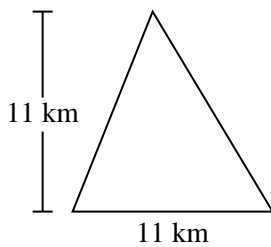
5)



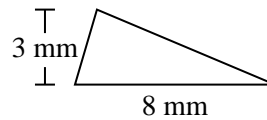
6)



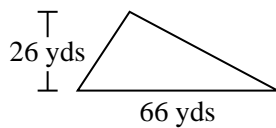
7)



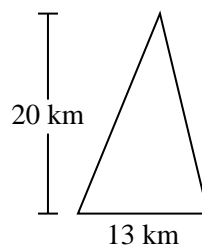
8)



9)



10)



1. _____
2. _____
3. _____
4. _____
5. _____
6. _____
7. _____
8. _____
9. _____
10. _____