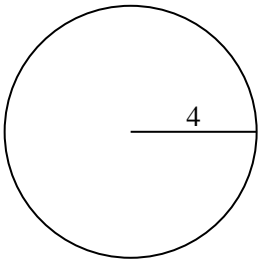


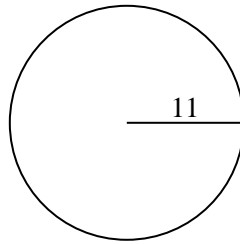


Encuentra la circunferencia de cada círculo. Los círculos no están a escala.

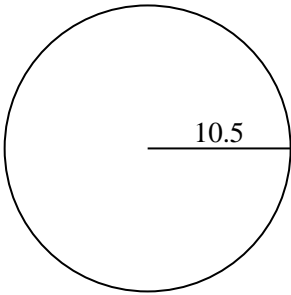
1)



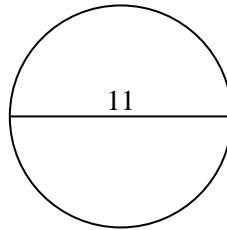
2)



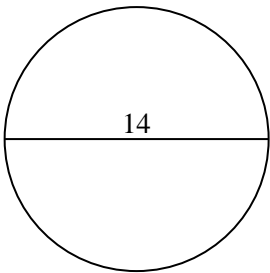
3)



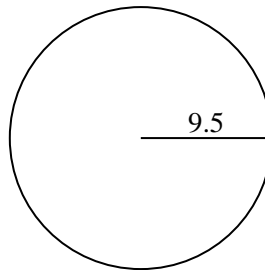
4)



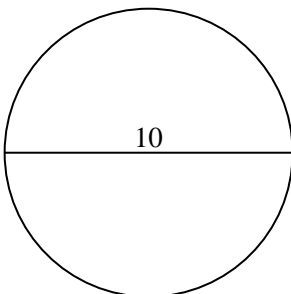
5)



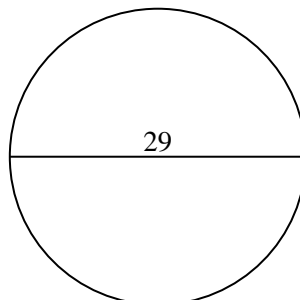
6)



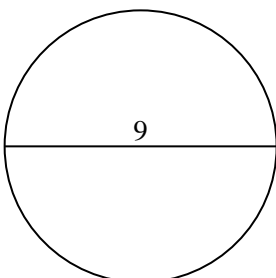
7)



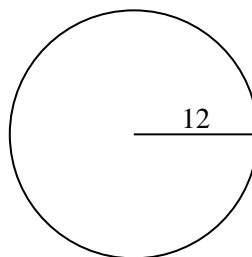
8)



9)



10)



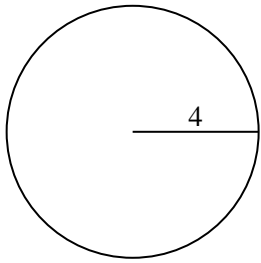
**Respuestas**

- 1. \_\_\_\_\_
- 2. \_\_\_\_\_
- 3. \_\_\_\_\_
- 4. \_\_\_\_\_
- 5. \_\_\_\_\_
- 6. \_\_\_\_\_
- 7. \_\_\_\_\_
- 8. \_\_\_\_\_
- 9. \_\_\_\_\_
- 10. \_\_\_\_\_

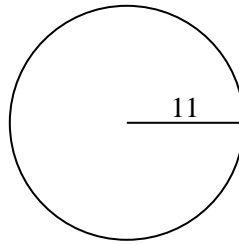


Encuentra la circunferencia de cada círculo. Los círculos no están a escala.

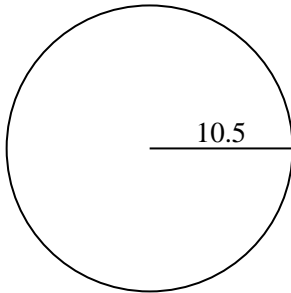
1)



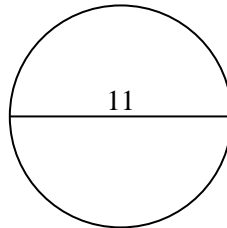
2)



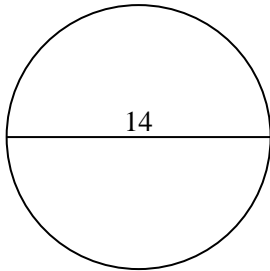
3)



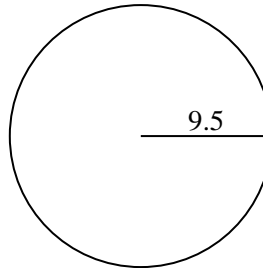
4)



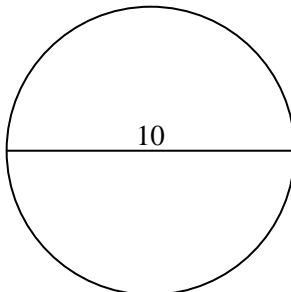
5)



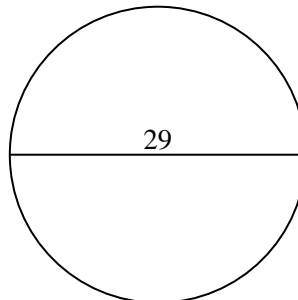
6)



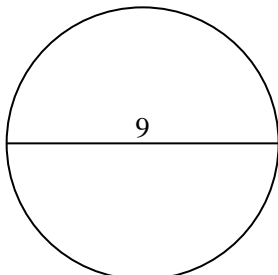
7)



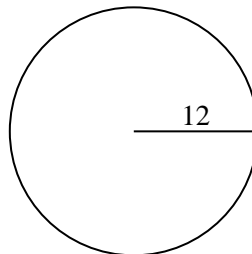
8)



9)



10)

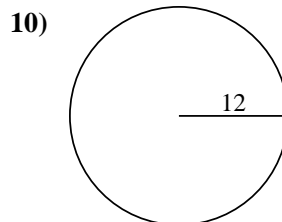
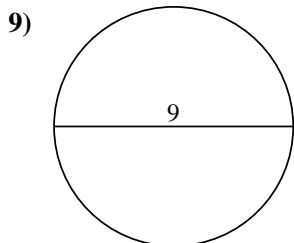
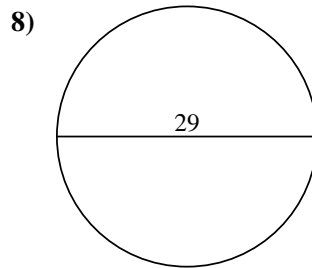
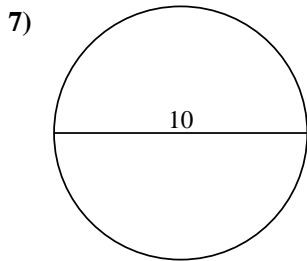
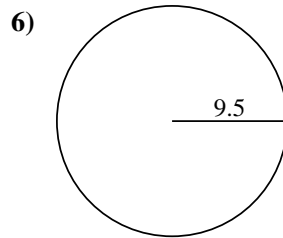
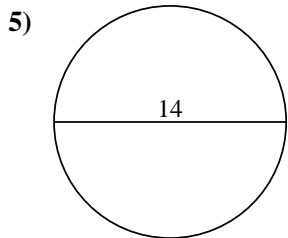
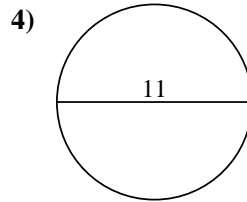
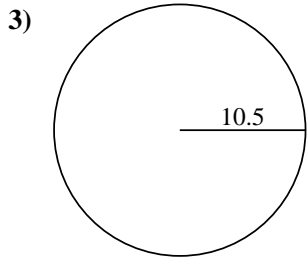
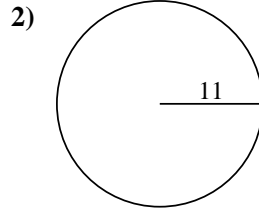
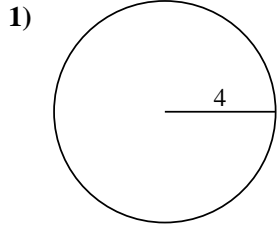
**Respuestas**1. 25.13 cm2. 69.12 cm3. 65.97 cm4. 34.56 cm5. 43.98 cm6. 59.69 cm7. 31.42 cm8. 91.11 cm9. 28.27 cm10. 75.4 cm



Encuentra la circunferencia de cada círculo. Los círculos no están a escala.

69.12 cm	34.56 cm	91.11 cm	59.69 cm	25.13 cm
31.42 cm	43.98 cm	65.97 cm	75.4 cm	28.27 cm

**Respuestas**



1. \_\_\_\_\_
2. \_\_\_\_\_
3. \_\_\_\_\_
4. \_\_\_\_\_
5. \_\_\_\_\_
6. \_\_\_\_\_
7. \_\_\_\_\_
8. \_\_\_\_\_
9. \_\_\_\_\_
10. \_\_\_\_\_