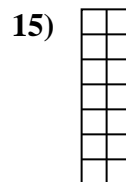
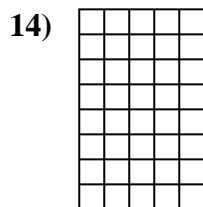
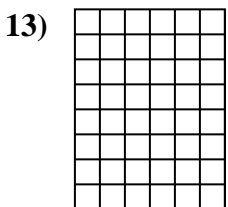

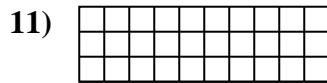

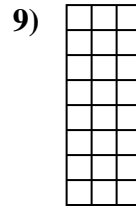
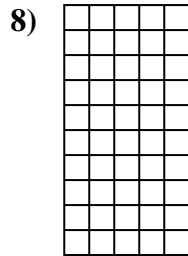
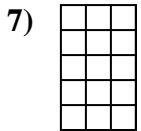
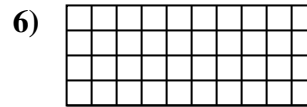
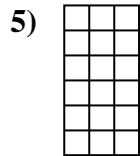
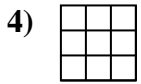
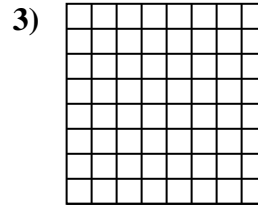
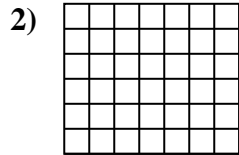
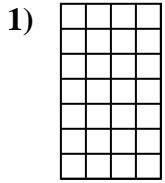




Determina el área. Cada  $\square = 1$  unidad ( $u^2$ )

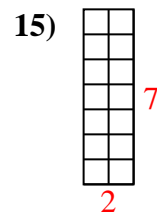
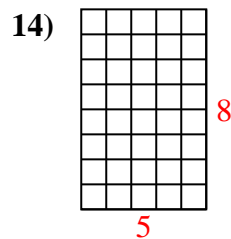
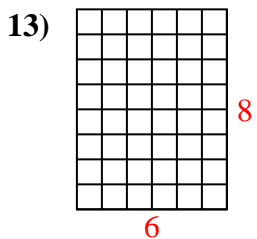
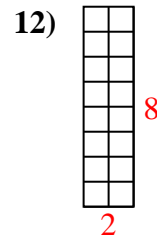
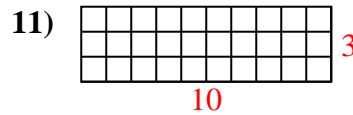
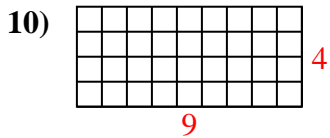
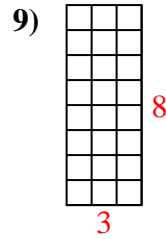
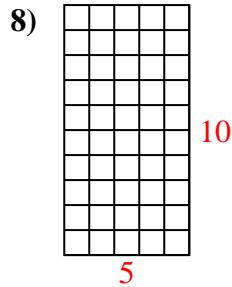
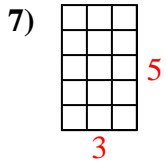
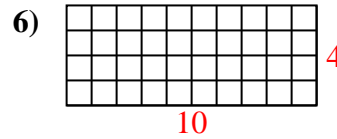
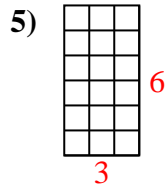
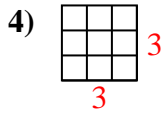
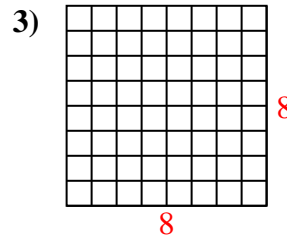
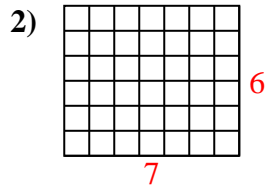
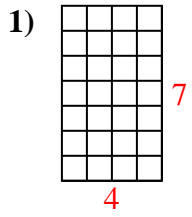


**Respuestas**

1. \_\_\_\_\_
2. \_\_\_\_\_
3. \_\_\_\_\_
4. \_\_\_\_\_
5. \_\_\_\_\_
6. \_\_\_\_\_
7. \_\_\_\_\_
8. \_\_\_\_\_
9. \_\_\_\_\_
10. \_\_\_\_\_
11. \_\_\_\_\_
12. \_\_\_\_\_
13. \_\_\_\_\_
14. \_\_\_\_\_
15. \_\_\_\_\_



Determina el área. Cada  $\square = 1$  unidad ( $u^2$ )



**Respuestas**

1. 28  $u^2$

2. 42  $u^2$

3. 64  $u^2$

4. 9  $u^2$

5. 18  $u^2$

6. 40  $u^2$

7. 15  $u^2$

8. 50  $u^2$

9. 24  $u^2$

10. 36  $u^2$

11. 30  $u^2$

12. 16  $u^2$

13. 48  $u^2$

14. 40  $u^2$

15. 14  $u^2$