

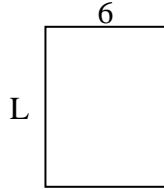


Determina el valor de 'P'.

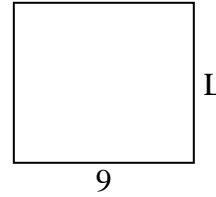
1) Área = $6 u^2$



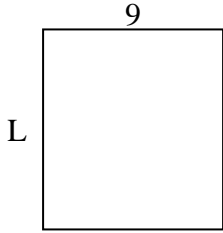
2) Área = $48 u^2$



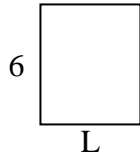
3) Área = $72 u^2$



4) Área = $90 u^2$



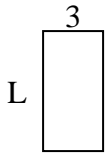
5) Área = $30 u^2$



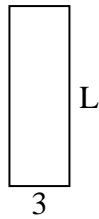
6) Área = $10 u^2$



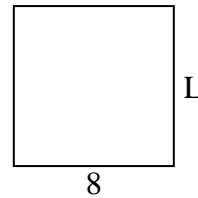
7) Área = $18 u^2$



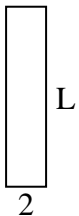
8) Área = $27 u^2$



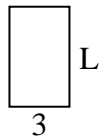
9) Área = $64 u^2$




10) Área = $18 u^2$



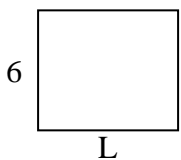
11) Área = $15 u^2$



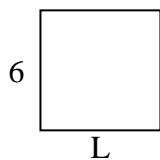
12) Área = $20 u^2$



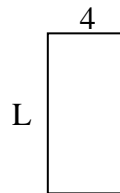
13) Área = $42 u^2$



14) Área = $36 u^2$



15) Área = $32 u^2$



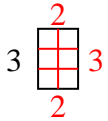
Respuestas

1. _____
2. _____
3. _____
4. _____
5. _____
6. _____
7. _____
8. _____
9. _____
10. _____
11. _____
12. _____
13. _____
14. _____
15. _____

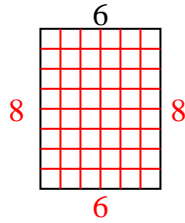


Determina el valor de 'P'.

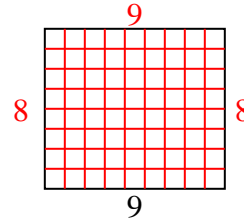
1) Área = $6 u^2$



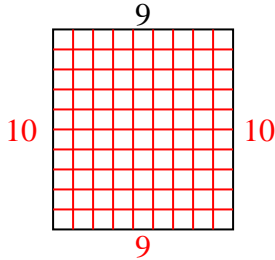
2) Área = $48 u^2$



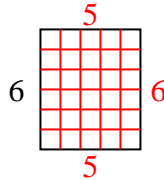
3) Área = $72 u^2$



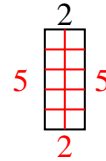
4) Área = $90 u^2$



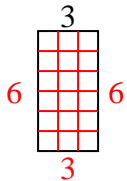
5) Área = $30 u^2$



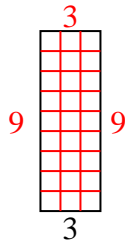
6) Área = $10 u^2$



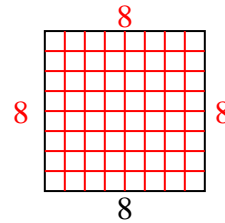
7) Área = $18 u^2$



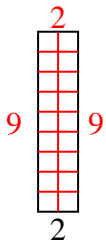
8) Área = $27 u^2$



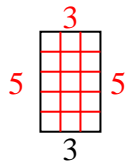
9) Área = $64 u^2$



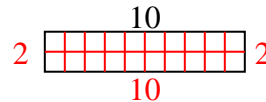
10) Área = $18 u^2$



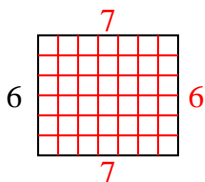
11) Área = $15 u^2$



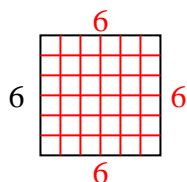
12) Área = $20 u^2$



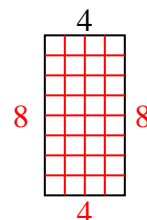
13) Área = $42 u^2$



14) Área = $36 u^2$



15) Área = $32 u^2$



Respuestas

1. 2
2. 8
3. 8
4. 10
5. 5
6. 5
7. 6
8. 9
9. 8
10. 9
11. 5
12. 2
13. 7
14. 6
15. 8