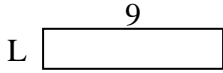


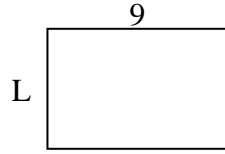


Determina el valor de 'P'.

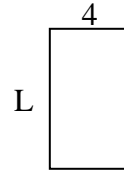
1) Área = $18 u^2$



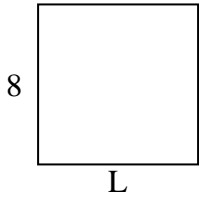
2) Área = $54 u^2$



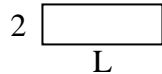
3) Área = $28 u^2$



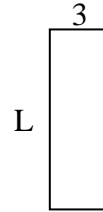
4) Área = $64 u^2$



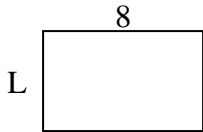
5) Área = $12 u^2$



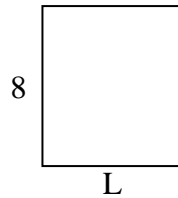
6) Área = $27 u^2$



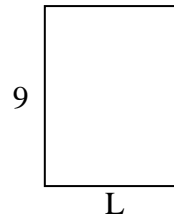
7) Área = $40 u^2$



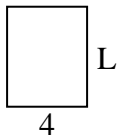
8) Área = $56 u^2$




9) Área = $63 u^2$



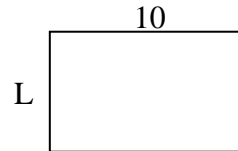
10) Área = $20 u^2$



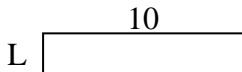
11) Área = $50 u^2$



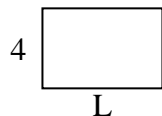
12) Área = $60 u^2$



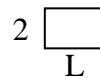
13) Área = $20 u^2$



14) Área = $24 u^2$



15) Área = $6 u^2$



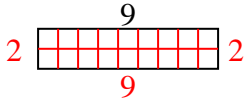
Respuestas

1. _____
2. _____
3. _____
4. _____
5. _____
6. _____
7. _____
8. _____
9. _____
10. _____
11. _____
12. _____
13. _____
14. _____
15. _____

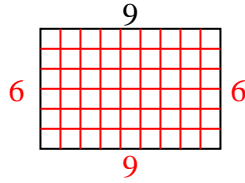


Determina el valor de 'P'.

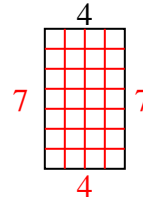
1) Área = $18 u^2$



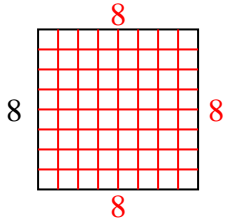
2) Área = $54 u^2$



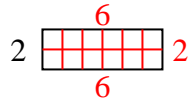
3) Área = $28 u^2$



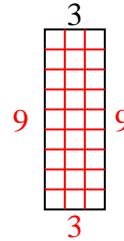
4) Área = $64 u^2$



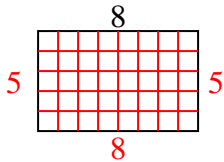
5) Área = $12 u^2$



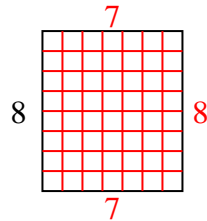
6) Área = $27 u^2$



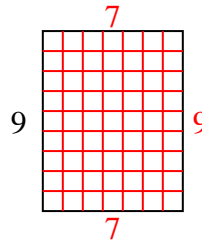
7) Área = $40 u^2$



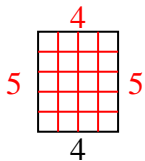
8) Área = $56 u^2$



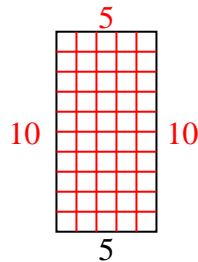
9) Área = $63 u^2$



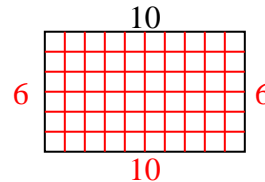
10) Área = $20 u^2$



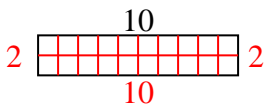
11) Área = $50 u^2$



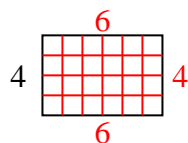
12) Área = $60 u^2$



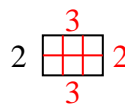
13) Área = $20 u^2$



14) Área = $24 u^2$



15) Área = $6 u^2$



Respuestas

1. 2

2. 6

3. 7

4. 8

5. 6

6. 9

7. 5

8. 7

9. 7

10. 5

11. 10

12. 6

13. 2

14. 6

15. 3