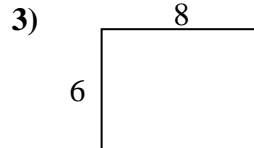

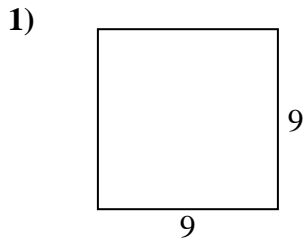


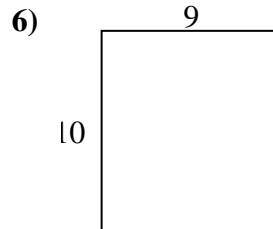
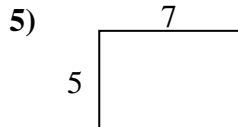
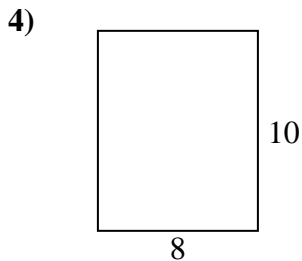


Encuentra el perímetro de cada figura. Cada figura está en pulgadas. No a escala.

**Respuestas**



1. \_\_\_\_\_



2. \_\_\_\_\_

3. \_\_\_\_\_

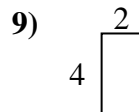
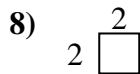
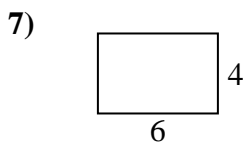
4. \_\_\_\_\_

5. \_\_\_\_\_

6. \_\_\_\_\_

7. \_\_\_\_\_

8. \_\_\_\_\_

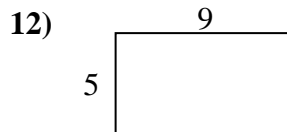
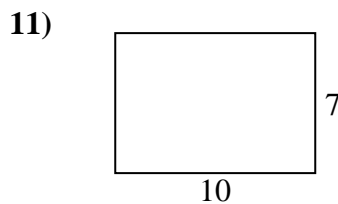
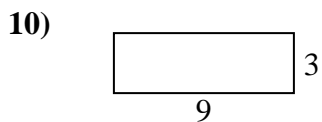


9. \_\_\_\_\_

10. \_\_\_\_\_

11. \_\_\_\_\_

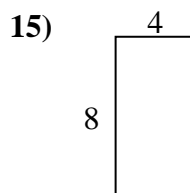
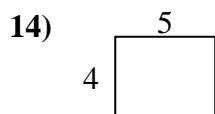
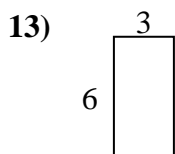
12. \_\_\_\_\_



13. \_\_\_\_\_

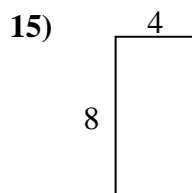
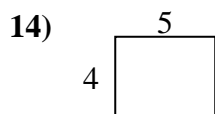
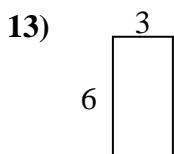
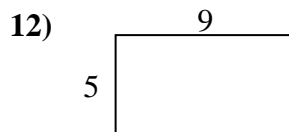
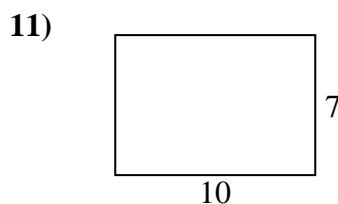
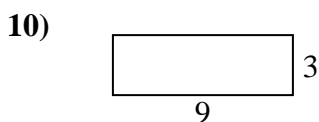
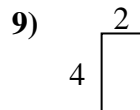
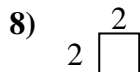
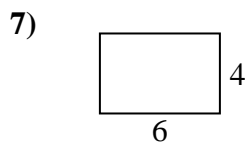
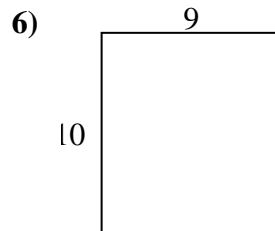
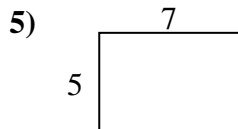
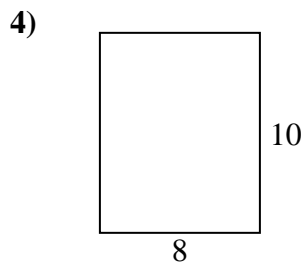
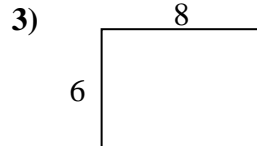

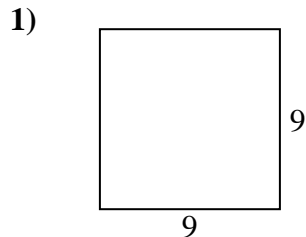
14. \_\_\_\_\_

15. \_\_\_\_\_





Encuentra el perímetro de cada figura. Cada figura está en pulgadas. No a escala.



**Respuestas**

1. 36 cm    81 cm<sup>2</sup>
2. 22 cm    18 cm<sup>2</sup>
3. 28 cm    48 cm<sup>2</sup>
4. 36 cm    80 cm<sup>2</sup>
5. 24 cm    35 cm<sup>2</sup>
6. 38 cm    90 cm<sup>2</sup>
7. 20 cm    24 cm<sup>2</sup>
8. 8 cm    4 cm<sup>2</sup>
9. 12 cm    8 cm<sup>2</sup>
10. 24 cm    27 cm<sup>2</sup>
11. 34 cm    70 cm<sup>2</sup>
12. 28 cm    45 cm<sup>2</sup>
13. 18 cm    18 cm<sup>2</sup>
14. 18 cm    20 cm<sup>2</sup>
15. 24 cm    32 cm<sup>2</sup>