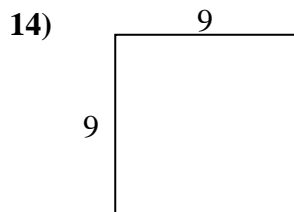
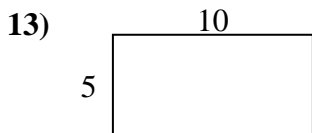
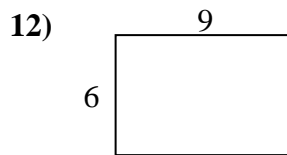
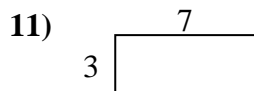
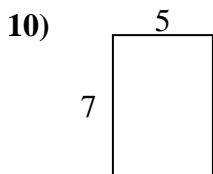
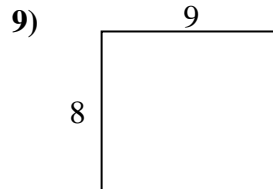
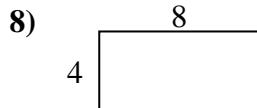
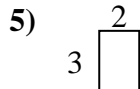

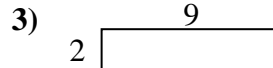
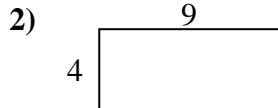
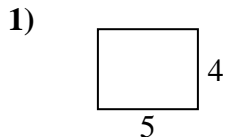




Encuentra el perímetro de cada figura. Cada figura está en pulgadas. No a escala.

Respuestas

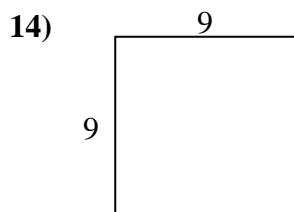
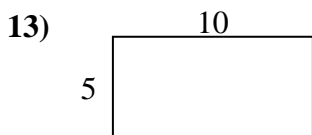
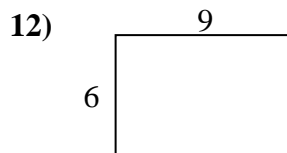
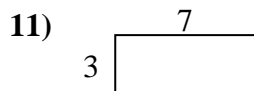
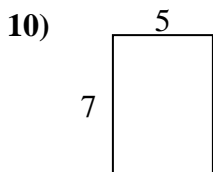
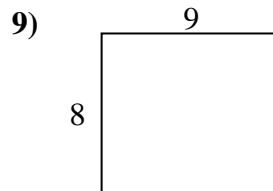
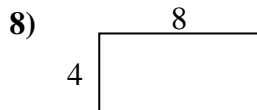
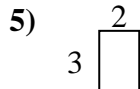

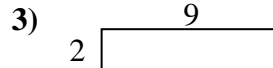
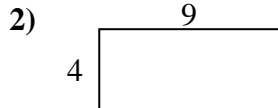
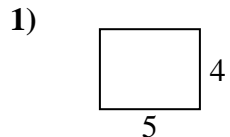


1. _____
2. _____
3. _____
4. _____
5. _____
6. _____
7. _____
8. _____
9. _____
10. _____
11. _____
12. _____
13. _____
14. _____
15. _____



Encuentra el perímetro de cada figura. Cada figura está en pulgadas. No a escala.

Respuestas



- 1. 18 cm 20 cm²
- 2. 26 cm 36 cm²
- 3. 22 cm 18 cm²
- 4. 24 cm 20 cm²
- 5. 10 cm 6 cm²
- 6. 14 cm 12 cm²
- 7. 14 cm 10 cm²
- 8. 24 cm 32 cm²
- 9. 34 cm 72 cm²
- 10. 24 cm 35 cm²
- 11. 20 cm 21 cm²
- 12. 30 cm 54 cm²
- 13. 30 cm 50 cm²
- 14. 36 cm 81 cm²
- 15. 26 cm 30 cm²