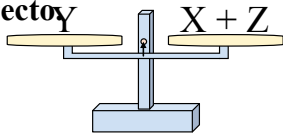


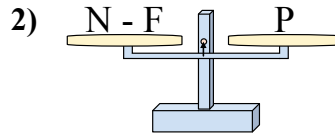


Las escalas mostradas están balanceadas. Determine que enunciado de número es

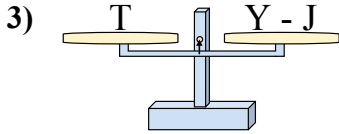
correcto



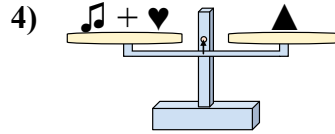
- A. $X = Z - Y$
- B. $X = Y + Z$
- C. $X = Y - Z$
- D. $X = Z + Y$



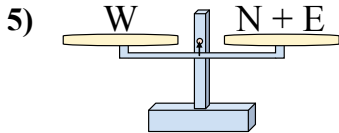
- A. $N = P + F$
- B. $N = F - P$
- C. $N = P - F$
- D. $N = P + P$



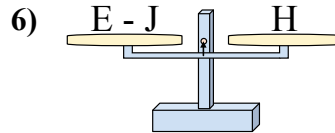
- A. $Y = T + J$
- B. $Y = J - T$
- C. $Y = T - J$
- D. $Y = T + T$



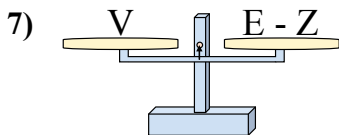
- A. $\text{Musical Note} = \text{Triangle} - \text{Heart}$
- B. $\text{Musical Note} = \text{Heart} - \text{Triangle}$
- C. $\text{Musical Note} = \text{Heart} + \text{Triangle}$
- D. $\text{Musical Note} = \text{Triangle} + \text{Heart}$



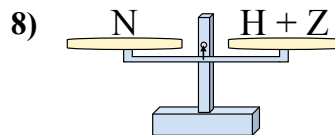
- A. $N = E - W$
- B. $N = W + E$
- C. $N = E + W$
- D. $N = W - E$



- A. $E = H - J$
- B. $E = J - H$
- C. $E = H + J$
- D. $E = H + H$



- A. $E = V + V$
- B. $E = Z - V$
- C. $E = V - Z$
- D. $E = V + Z$



- A. $H = Z - N$
- B. $H = N + Z$
- C. $H = Z + N$
- D. $H = N - Z$

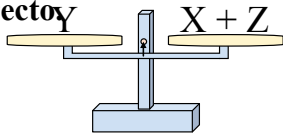
Respuestas

- 1. _____
- 2. _____
- 3. _____
- 4. _____
- 5. _____
- 6. _____
- 7. _____
- 8. _____



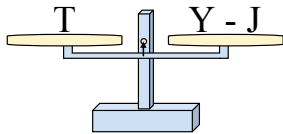
Las escalas mostradas están balanceadas. Determine que enunciado de número es

correcto



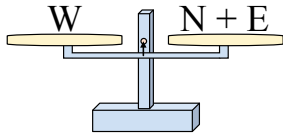
- A. $X = Z - Y$
- B. $X = Y + Z$
- C. $X = Y - Z$
- D. $X = Z + Y$

3)



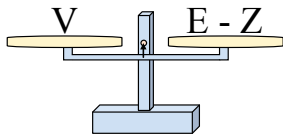
- A. $Y = T + J$
- B. $Y = J - T$
- C. $Y = T - J$
- D. $Y = T + T$

5)



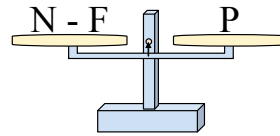
- A. $N = E - W$
- B. $N = W + E$
- C. $N = E + W$
- D. $N = W - E$

7)



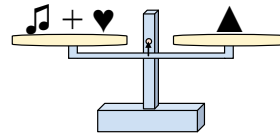
- A. $E = V + V$
- B. $E = Z - V$
- C. $E = V - Z$
- D. $E = V + Z$

2)



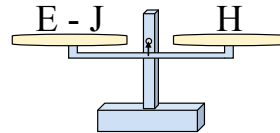
- A. $N = P + F$
- B. $N = F - P$
- C. $N = P - F$
- D. $N = P + P$

4)



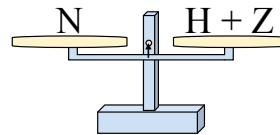
- A. $\text{Musical Note} = \text{Triangle} - \text{Heart}$
- B. $\text{Musical Note} = \text{Heart} - \text{Triangle}$
- C. $\text{Musical Note} = \text{Heart} + \text{Triangle}$
- D. $\text{Musical Note} = \text{Triangle} + \text{Heart}$

6)



- A. $E = H - J$
- B. $E = J - H$
- C. $E = H + J$
- D. $E = H + H$

8)



- A. $H = Z - N$
- B. $H = N + Z$
- C. $H = Z + N$
- D. $H = N - Z$

Respuestas

- 1. **C**
- 2. **A**
- 3. **A**
- 4. **A**
- 5. **D**
- 6. **C**
- 7. **D**
- 8. **D**