



Determina qué gráfica va con cuál tabla.

1)

Color	People
azul	2,000
verde	3,000
naranja	5,000
amarillo	4,000
rojo	1,000

2)

Color	People
azul	4,000
verde	5,000
naranja	1,000
amarillo	2,000
rojo	3,000

3)

Color	People
azul	3,000
verde	2,000
naranja	4,000
amarillo	1,000
rojo	5,000

4)

Color	People
azul	4,000
verde	5,000
naranja	3,000
amarillo	2,000
rojo	1,000

5)

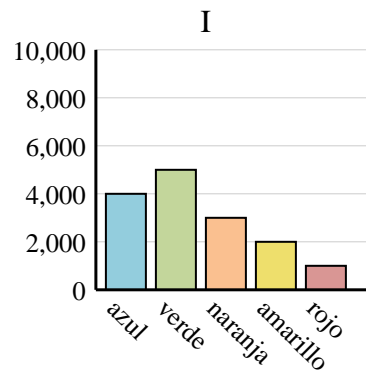
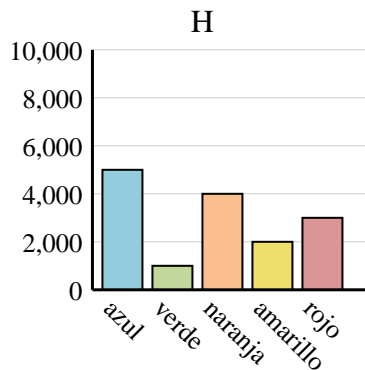
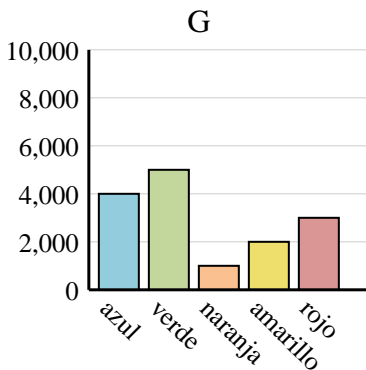
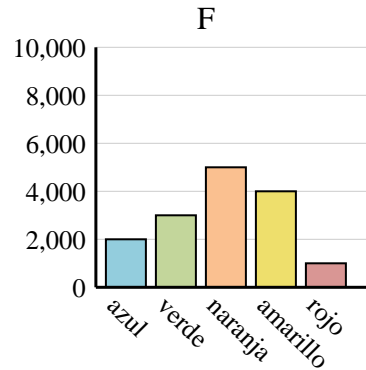
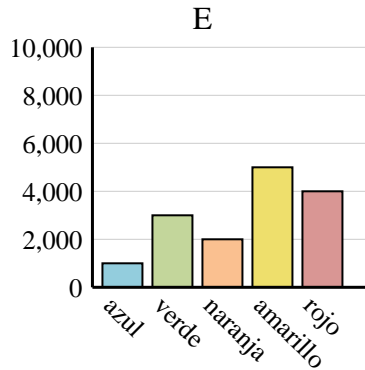
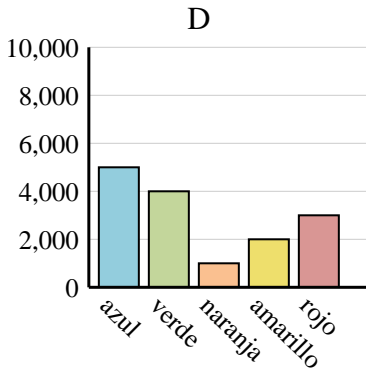
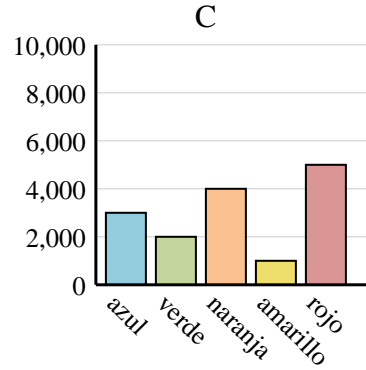
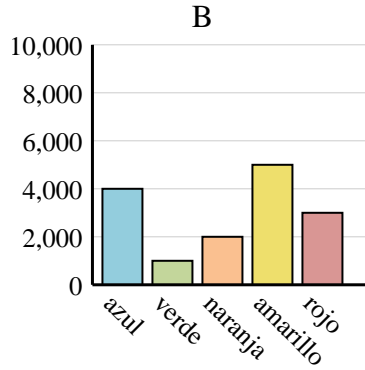
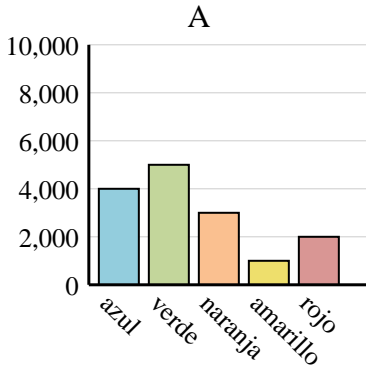
Color	People
azul	4,000
verde	5,000
naranja	3,000
amarillo	1,000
rojo	2,000

6)

Color	People
azul	5,000
verde	4,000
naranja	1,000
amarillo	2,000
rojo	3,000

Respuestas

1. _____
2. _____
3. _____
4. _____
5. _____
6. _____





Determina qué gráfica va con cuál tabla.

1)

Color	People
azul	2,000
verde	3,000
naranja	5,000
amarillo	4,000
rojo	1,000

2)

Color	People
azul	4,000
verde	5,000
naranja	1,000
amarillo	2,000
rojo	3,000

3)

Color	People
azul	3,000
verde	2,000
naranja	4,000
amarillo	1,000
rojo	5,000

4)

Color	People
azul	4,000
verde	5,000
naranja	3,000
amarillo	2,000
rojo	1,000

5)

Color	People
azul	4,000
verde	5,000
naranja	3,000
amarillo	1,000
rojo	2,000

6)

Color	People
azul	5,000
verde	4,000
naranja	1,000
amarillo	2,000
rojo	3,000

Respuestas

1. **F**
2. **G**
3. **C**
4. **I**
5. **A**
6. **D**

