




Usa el modelo visual para resolver cada problema.


1) $0.5 \times 0.5 =$




2) $0.2 \times 0.2 =$




3) $0.9 \times 0.8 =$




4) $0.5 \times 0.5 =$




5) $0.4 \times 0.2 =$




6) $0.1 \times 0.6 =$




7) $0.1 \times 0.5 =$




8) $0.5 \times 0.1 =$



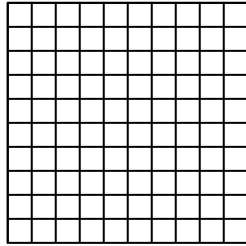
9) $0.4 \times 0.1 =$




10) $0.2 \times 0.1 =$




11) $0.2 \times 0.8 =$



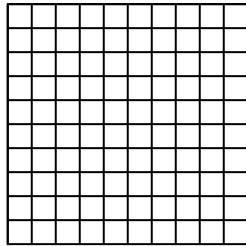
12) $0.7 \times 0.2 =$




13) $0.1 \times 0.9 =$



14) $0.3 \times 0.5 =$



15) $0.8 \times 0.5 =$



Respuestas

1. _____

2. _____

3. _____

4. _____

5. _____

6. _____

7. _____

8. _____

9. _____

10. _____

11. _____

12. _____

13. _____

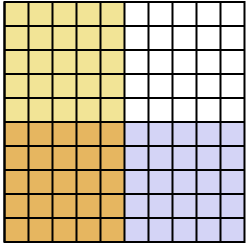
14. _____

15. _____

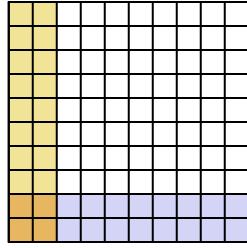


Usa el modelo visual para resolver cada problema.

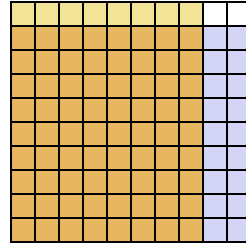
1) $0.5 \times 0.5 =$



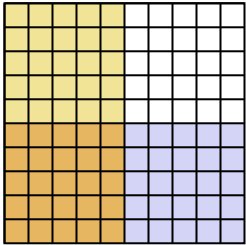
2) $0.2 \times 0.2 =$



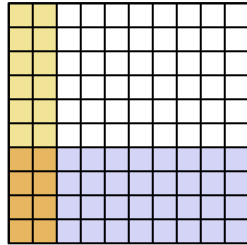
3) $0.9 \times 0.8 =$



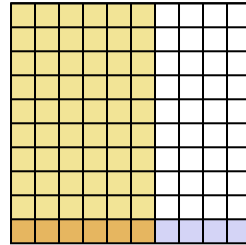
4) $0.5 \times 0.5 =$



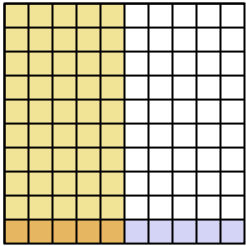
5) $0.4 \times 0.2 =$



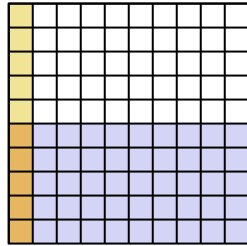
6) $0.1 \times 0.6 =$



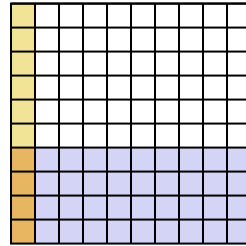
7) $0.1 \times 0.5 =$



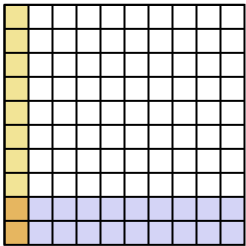
8) $0.5 \times 0.1 =$



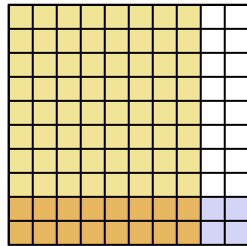
9) $0.4 \times 0.1 =$



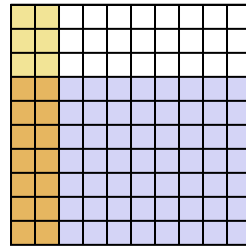
10) $0.2 \times 0.1 =$



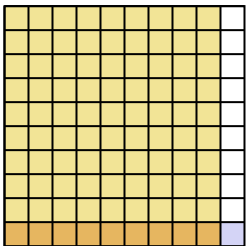
11) $0.2 \times 0.8 =$



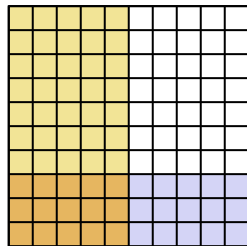
12) $0.7 \times 0.2 =$



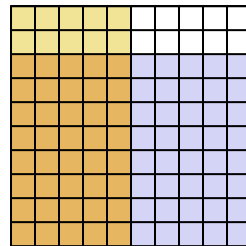
13) $0.1 \times 0.9 =$



14) $0.3 \times 0.5 =$



15) $0.8 \times 0.5 =$



Respuestas

1. $\frac{25}{100} = 0.25$

2. $\frac{4}{100} = 0.04$

3. $\frac{72}{100} = 0.72$

4. $\frac{25}{100} = 0.25$

5. $\frac{8}{100} = 0.08$

6. $\frac{6}{100} = 0.06$

7. $\frac{5}{100} = 0.05$

8. $\frac{5}{100} = 0.05$

9. $\frac{4}{100} = 0.04$

10. $\frac{2}{100} = 0.02$

11. $\frac{16}{100} = 0.16$

12. $\frac{14}{100} = 0.14$

13. $\frac{9}{100} = 0.09$

14. $\frac{15}{100} = 0.15$

15. $\frac{40}{100} = 0.4$