





Usa el modelo visual para resolver cada problema.


1) $0.8 \times 0.5 =$




2) $0.8 \times 0.4 =$




3) $0.2 \times 0.9 =$




4) $0.1 \times 0.1 =$




5) $0.4 \times 0.2 =$




6) $0.2 \times 0.4 =$




7) $0.5 \times 0.2 =$




8) $0.9 \times 0.9 =$




9) $0.9 \times 0.1 =$




10) $0.6 \times 0.6 =$




11) $0.6 \times 0.9 =$



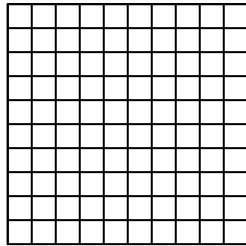
12) $0.8 \times 0.3 =$




13) $0.2 \times 0.9 =$



14) $0.9 \times 0.8 =$



15) $0.4 \times 0.1 =$



Respuestas

1. _____

2. _____

3. _____

4. _____

5. _____

6. _____

7. _____

8. _____

9. _____

10. _____

11. _____

12. _____

13. _____

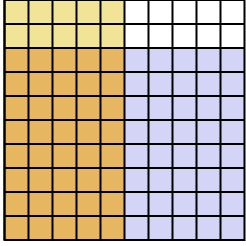
14. _____

15. _____

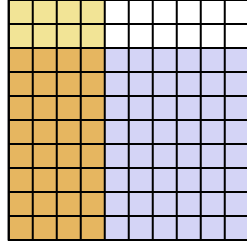


Usa el modelo visual para resolver cada problema.

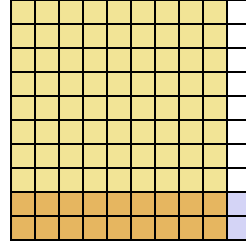
1) $0.8 \times 0.5 =$



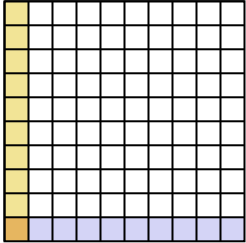
2) $0.8 \times 0.4 =$



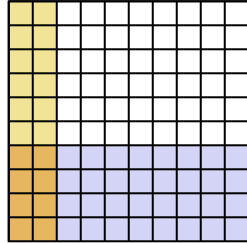
3) $0.2 \times 0.9 =$



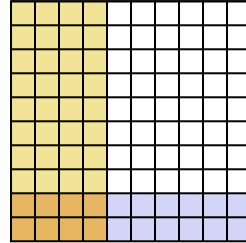
4) $0.1 \times 0.1 =$



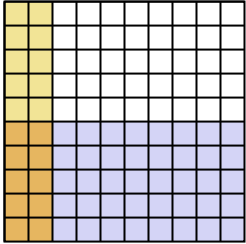
5) $0.4 \times 0.2 =$



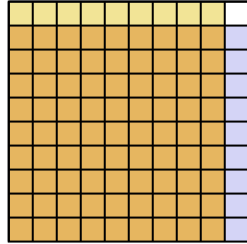
6) $0.2 \times 0.4 =$



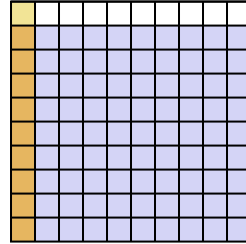
7) $0.5 \times 0.2 =$



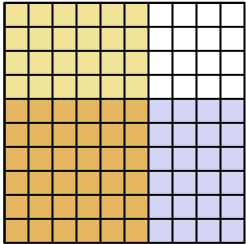
8) $0.9 \times 0.9 =$



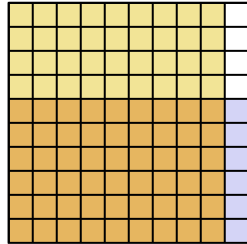
9) $0.9 \times 0.1 =$



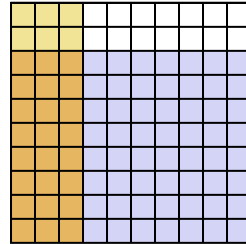
10) $0.6 \times 0.6 =$



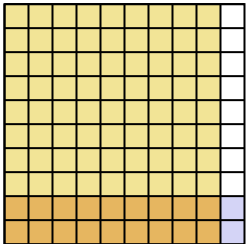
11) $0.6 \times 0.9 =$



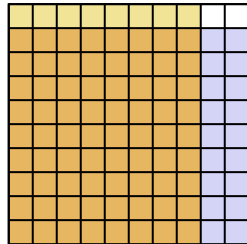
12) $0.8 \times 0.3 =$



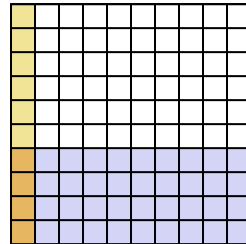
13) $0.2 \times 0.9 =$



14) $0.9 \times 0.8 =$



15) $0.4 \times 0.1 =$



Respuestas

1. $\frac{40}{100} = 0.4$

2. $\frac{32}{100} = 0.32$

3. $\frac{18}{100} = 0.18$

4. $\frac{1}{100} = 0.01$

5. $\frac{8}{100} = 0.08$

6. $\frac{8}{100} = 0.08$

7. $\frac{10}{100} = 0.1$

8. $\frac{81}{100} = 0.81$

9. $\frac{9}{100} = 0.09$

10. $\frac{36}{100} = 0.36$

11. $\frac{54}{100} = 0.54$

12. $\frac{24}{100} = 0.24$

13. $\frac{18}{100} = 0.18$


14. $\frac{72}{100} = 0.72$

15. $\frac{4}{100} = 0.04$




Usa el modelo visual para resolver cada problema.


1) $0.5 \times 0.5 =$




2) $0.2 \times 0.2 =$




3) $0.9 \times 0.8 =$




4) $0.5 \times 0.5 =$




5) $0.4 \times 0.2 =$




6) $0.1 \times 0.6 =$




7) $0.1 \times 0.5 =$




8) $0.5 \times 0.1 =$



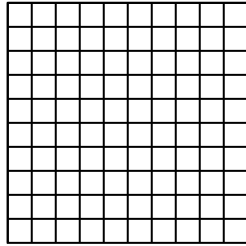
9) $0.4 \times 0.1 =$




10) $0.2 \times 0.1 =$




11) $0.2 \times 0.8 =$



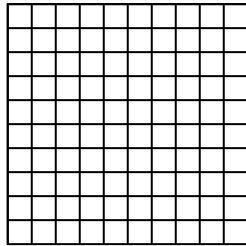
12) $0.7 \times 0.2 =$




13) $0.1 \times 0.9 =$



14) $0.3 \times 0.5 =$



15) $0.8 \times 0.5 =$



Respuestas

1. _____

2. _____

3. _____

4. _____

5. _____

6. _____

7. _____

8. _____

9. _____

10. _____

11. _____

12. _____

13. _____

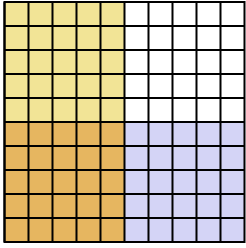
14. _____

15. _____

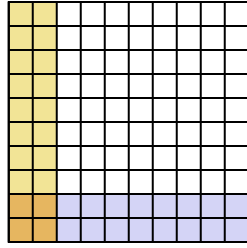


Usa el modelo visual para resolver cada problema.

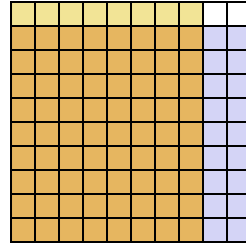
1) $0.5 \times 0.5 =$



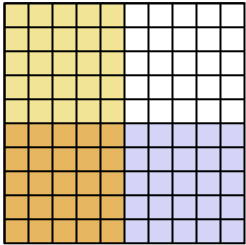
2) $0.2 \times 0.2 =$



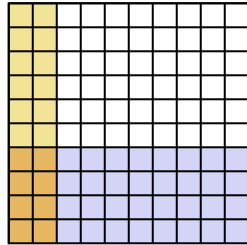
3) $0.9 \times 0.8 =$



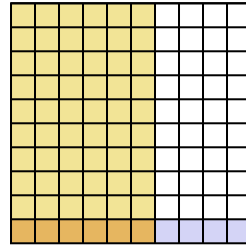
4) $0.5 \times 0.5 =$



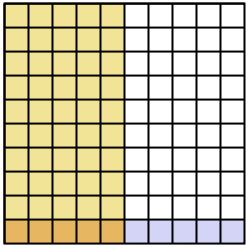
5) $0.4 \times 0.2 =$



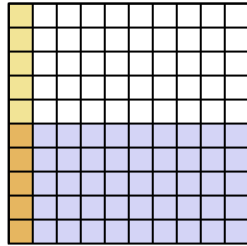
6) $0.1 \times 0.6 =$



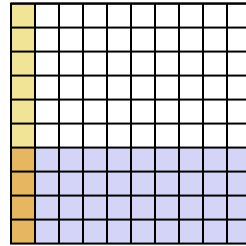
7) $0.1 \times 0.5 =$



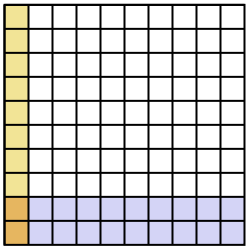
8) $0.5 \times 0.1 =$



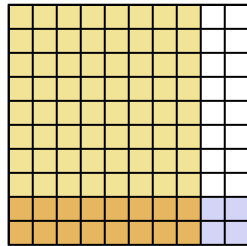
9) $0.4 \times 0.1 =$



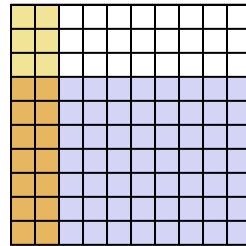
10) $0.2 \times 0.1 =$



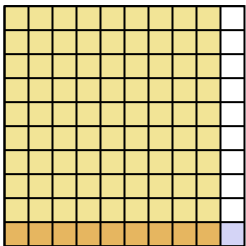
11) $0.2 \times 0.8 =$



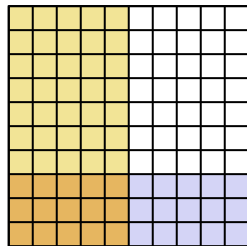
12) $0.7 \times 0.2 =$



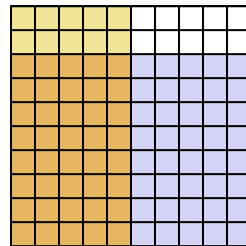
13) $0.1 \times 0.9 =$



14) $0.3 \times 0.5 =$



15) $0.8 \times 0.5 =$



Respuestas

1. $\frac{25}{100} = 0.25$

2. $\frac{4}{100} = 0.04$

3. $\frac{72}{100} = 0.72$

4. $\frac{25}{100} = 0.25$

5. $\frac{8}{100} = 0.08$

6. $\frac{6}{100} = 0.06$

7. $\frac{5}{100} = 0.05$

8. $\frac{5}{100} = 0.05$

9. $\frac{4}{100} = 0.04$

10. $\frac{2}{100} = 0.02$

11. $\frac{16}{100} = 0.16$

12. $\frac{14}{100} = 0.14$

13. $\frac{9}{100} = 0.09$


14. $\frac{15}{100} = 0.15$

15. $\frac{40}{100} = 0.4$




Usa el modelo visual para resolver cada problema.


1) $0.1 \times 0.8 =$




2) $0.3 \times 0.4 =$




3) $0.5 \times 0.1 =$



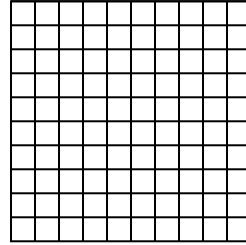
4) $0.8 \times 0.3 =$




5) $0.4 \times 0.5 =$




6) $0.8 \times 0.1 =$



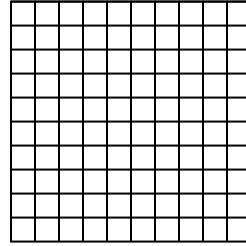
7) $0.6 \times 0.3 =$




8) $0.1 \times 0.6 =$



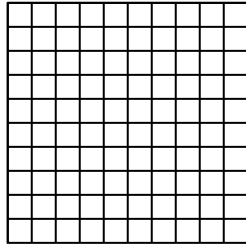
9) $0.7 \times 0.5 =$



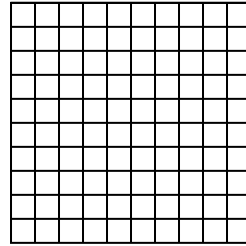
10) $0.6 \times 0.8 =$




11) $0.6 \times 0.1 =$



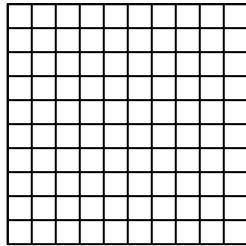
12) $0.4 \times 0.5 =$



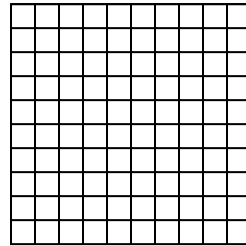
13) $0.7 \times 0.4 =$



14) $0.4 \times 0.6 =$



15) $0.2 \times 0.3 =$



Respuestas

1. _____

2. _____

3. _____

4. _____

5. _____

6. _____

7. _____

8. _____

9. _____

10. _____

11. _____

12. _____

13. _____

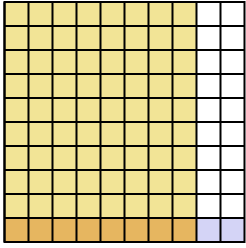
14. _____

15. _____

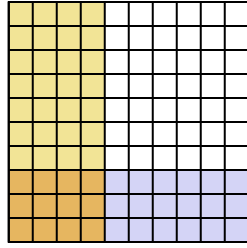


Usa el modelo visual para resolver cada problema.

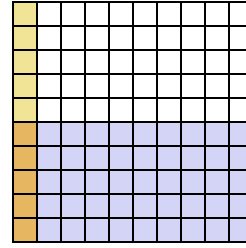
1) $0.1 \times 0.8 =$



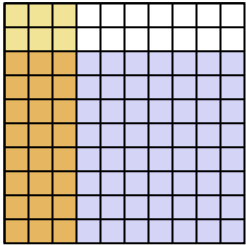
2) $0.3 \times 0.4 =$



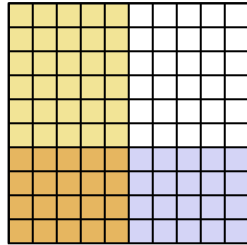
3) $0.5 \times 0.1 =$



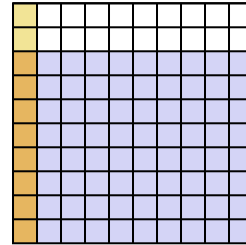
4) $0.8 \times 0.3 =$



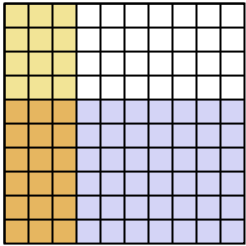
5) $0.4 \times 0.5 =$



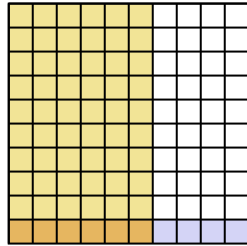
6) $0.8 \times 0.1 =$



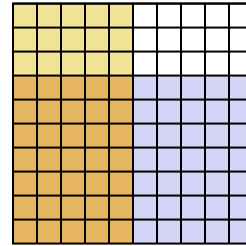
7) $0.6 \times 0.3 =$



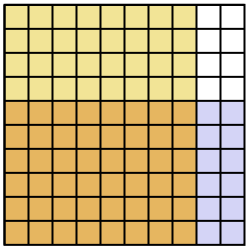
8) $0.1 \times 0.6 =$



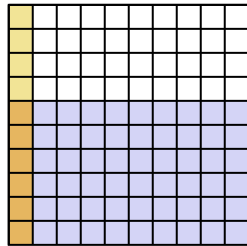
9) $0.7 \times 0.5 =$



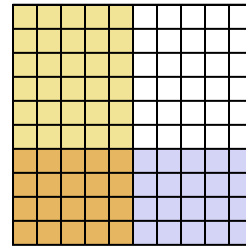
10) $0.6 \times 0.8 =$



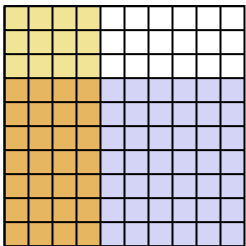
11) $0.6 \times 0.1 =$



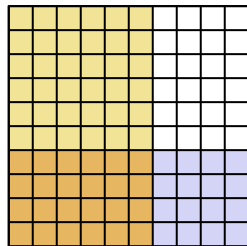
12) $0.4 \times 0.5 =$



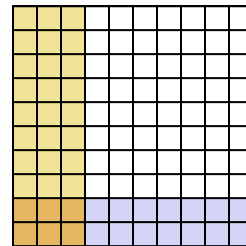
13) $0.7 \times 0.4 =$



14) $0.4 \times 0.6 =$



15) $0.2 \times 0.3 =$



Respuestas

1. $\frac{8}{100} = 0.08$

2. $\frac{12}{100} = 0.12$

3. $\frac{5}{100} = 0.05$

4. $\frac{24}{100} = 0.24$

5. $\frac{20}{100} = 0.2$

6. $\frac{8}{100} = 0.08$

7. $\frac{18}{100} = 0.18$

8. $\frac{6}{100} = 0.06$

9. $\frac{35}{100} = 0.35$

10. $\frac{48}{100} = 0.48$

11. $\frac{6}{100} = 0.06$

12. $\frac{20}{100} = 0.2$

13. $\frac{28}{100} = 0.28$


14. $\frac{24}{100} = 0.24$

15. $\frac{6}{100} = 0.06$




Usa el modelo visual para resolver cada problema.


1) $0.4 \times 0.5 =$




2) $0.3 \times 0.1 =$




3) $0.9 \times 0.6 =$




4) $0.1 \times 0.4 =$




5) $0.2 \times 0.3 =$




6) $0.5 \times 0.9 =$




7) $0.9 \times 0.4 =$




8) $0.5 \times 0.5 =$



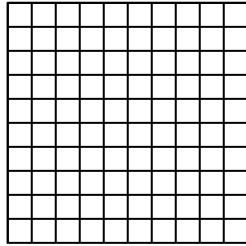
9) $0.9 \times 0.3 =$




10) $0.9 \times 0.1 =$




11) $0.8 \times 0.7 =$



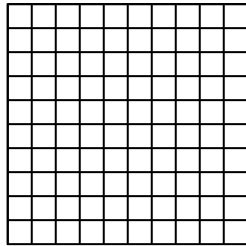
12) $0.8 \times 0.2 =$




13) $0.4 \times 0.2 =$



14) $0.4 \times 0.1 =$



15) $0.4 \times 0.4 =$



Respuestas

1. _____

2. _____

3. _____

4. _____

5. _____

6. _____

7. _____

8. _____

9. _____

10. _____

11. _____

12. _____

13. _____

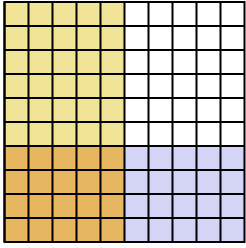
14. _____

15. _____

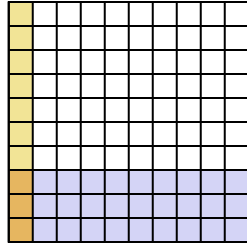


Usa el modelo visual para resolver cada problema.

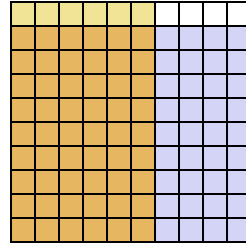
1) $0.4 \times 0.5 =$



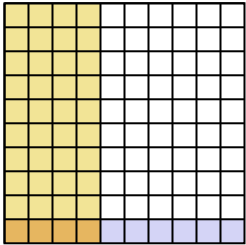
2) $0.3 \times 0.1 =$



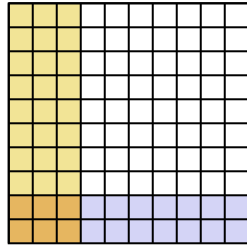
3) $0.9 \times 0.6 =$



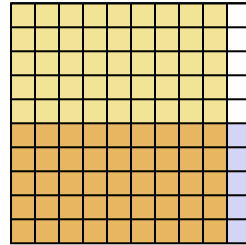
4) $0.1 \times 0.4 =$



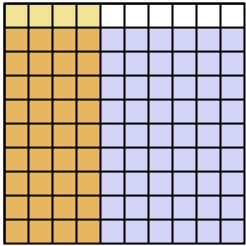
5) $0.2 \times 0.3 =$



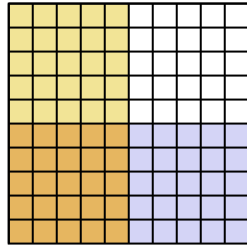
6) $0.5 \times 0.9 =$



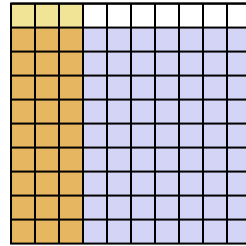
7) $0.9 \times 0.4 =$



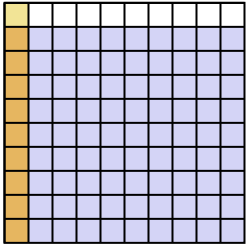
8) $0.5 \times 0.5 =$



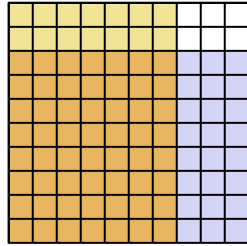
9) $0.9 \times 0.3 =$



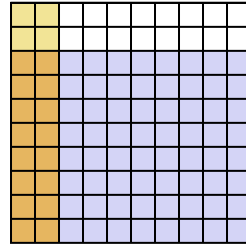
10) $0.9 \times 0.1 =$



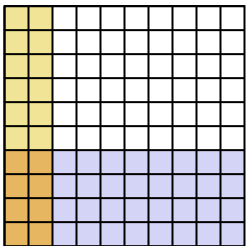
11) $0.8 \times 0.7 =$



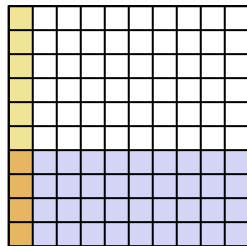
12) $0.8 \times 0.2 =$



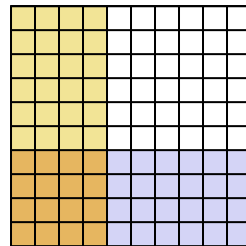
13) $0.4 \times 0.2 =$



14) $0.4 \times 0.1 =$



15) $0.4 \times 0.4 =$



Respuestas

1. $\frac{20}{100} = 0.2$

2. $\frac{3}{100} = 0.03$

3. $\frac{54}{100} = 0.54$

4. $\frac{4}{100} = 0.04$

5. $\frac{6}{100} = 0.06$

6. $\frac{45}{100} = 0.45$

7. $\frac{36}{100} = 0.36$

8. $\frac{25}{100} = 0.25$

9. $\frac{27}{100} = 0.27$

10. $\frac{9}{100} = 0.09$

11. $\frac{56}{100} = 0.56$

12. $\frac{16}{100} = 0.16$

13. $\frac{8}{100} = 0.08$


14. $\frac{4}{100} = 0.04$

15. $\frac{16}{100} = 0.16$




Usa el modelo visual para resolver cada problema.


1) $0.7 \times 0.6 =$




2) $0.2 \times 0.1 =$




3) $0.3 \times 0.6 =$




4) $0.2 \times 0.8 =$




5) $0.8 \times 0.4 =$




6) $0.2 \times 0.3 =$




7) $0.3 \times 0.8 =$




8) $0.7 \times 0.8 =$




9) $0.9 \times 0.4 =$




10) $0.2 \times 0.6 =$




11) $0.1 \times 0.7 =$



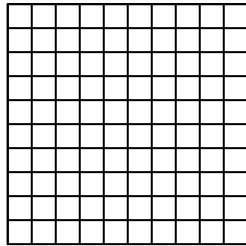
12) $0.3 \times 0.3 =$




13) $0.8 \times 0.4 =$



14) $0.3 \times 0.8 =$



15) $0.4 \times 0.9 =$



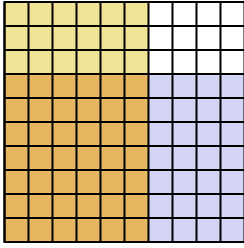
Respuestas

1. _____
2. _____
3. _____
4. _____
5. _____
6. _____
7. _____
8. _____
9. _____
10. _____
11. _____
12. _____
13. _____
14. _____
15. _____

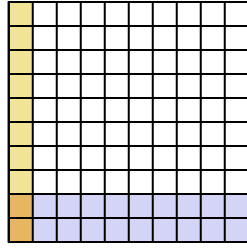


Usa el modelo visual para resolver cada problema.

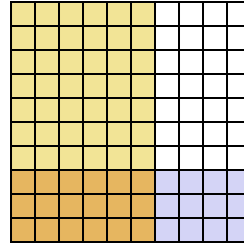
1) $0.7 \times 0.6 =$



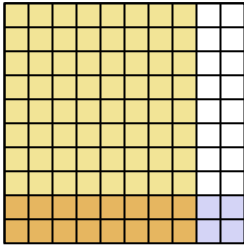
2) $0.2 \times 0.1 =$



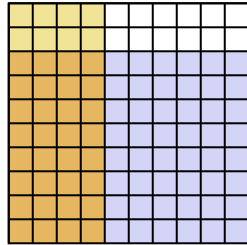
3) $0.3 \times 0.6 =$



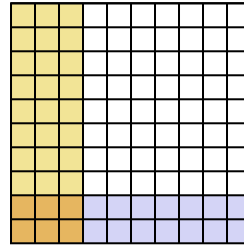
4) $0.2 \times 0.8 =$



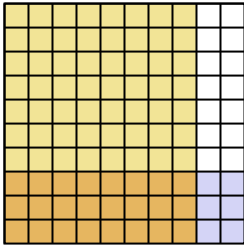
5) $0.8 \times 0.4 =$



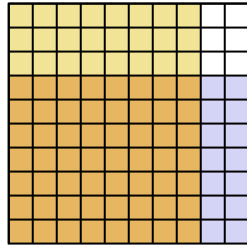
6) $0.2 \times 0.3 =$



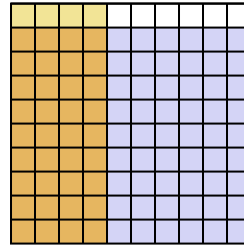
7) $0.3 \times 0.8 =$



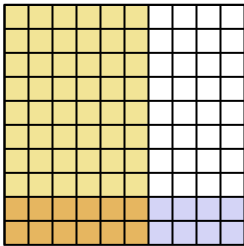
8) $0.7 \times 0.8 =$



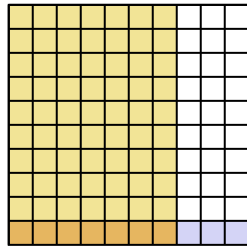
9) $0.9 \times 0.4 =$



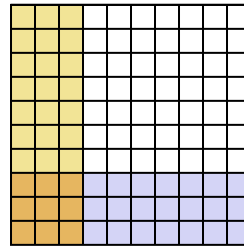
10) $0.2 \times 0.6 =$



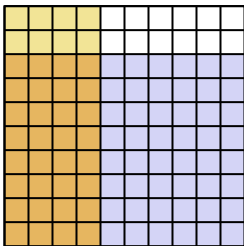
11) $0.1 \times 0.7 =$



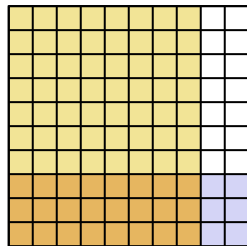
12) $0.3 \times 0.3 =$



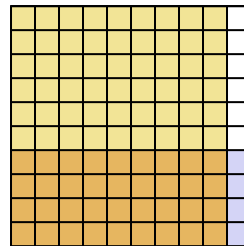
13) $0.8 \times 0.4 =$



14) $0.3 \times 0.8 =$



15) $0.4 \times 0.9 =$



Respuestas

1. $\frac{42}{100} = 0.42$

2. $\frac{2}{100} = 0.02$

3. $\frac{18}{100} = 0.18$

4. $\frac{16}{100} = 0.16$

5. $\frac{32}{100} = 0.32$

6. $\frac{6}{100} = 0.06$

7. $\frac{24}{100} = 0.24$

8. $\frac{56}{100} = 0.56$

9. $\frac{36}{100} = 0.36$

10. $\frac{12}{100} = 0.12$

11. $\frac{7}{100} = 0.07$

12. $\frac{9}{100} = 0.09$

13. $\frac{32}{100} = 0.32$


14. $\frac{24}{100} = 0.24$

15. $\frac{36}{100} = 0.36$




Usa el modelo visual para resolver cada problema.


1) $0.8 \times 0.1 =$




2) $0.9 \times 0.4 =$




3) $0.5 \times 0.9 =$




4) $0.2 \times 0.7 =$




5) $0.4 \times 0.8 =$




6) $0.5 \times 0.8 =$




7) $0.4 \times 0.7 =$




8) $0.8 \times 0.5 =$




9) $0.9 \times 0.9 =$




10) $0.3 \times 0.5 =$




11) $0.1 \times 0.2 =$



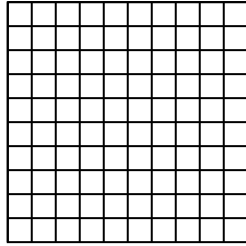
12) $0.6 \times 0.7 =$



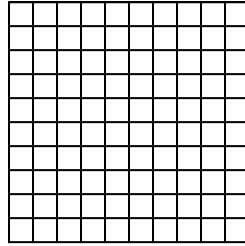
13) $0.2 \times 0.9 =$



14) $0.9 \times 0.1 =$



15) $0.4 \times 0.9 =$



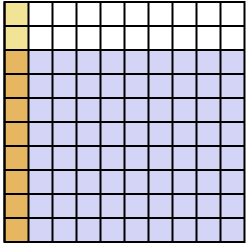
Respuestas

1. _____
2. _____
3. _____
4. _____
5. _____
6. _____
7. _____
8. _____
9. _____
10. _____
11. _____
12. _____
13. _____
14. _____
15. _____

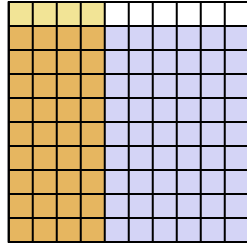


Usa el modelo visual para resolver cada problema.

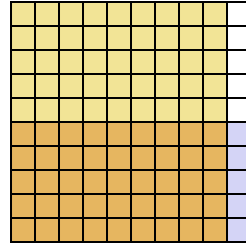
1) $0.8 \times 0.1 =$



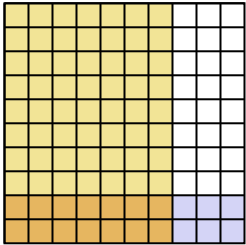
2) $0.9 \times 0.4 =$



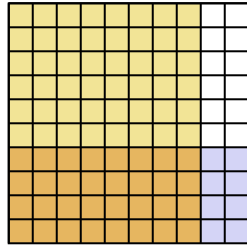
3) $0.5 \times 0.9 =$



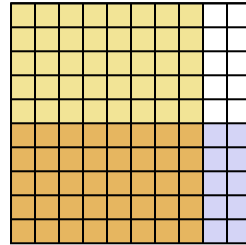
4) $0.2 \times 0.7 =$



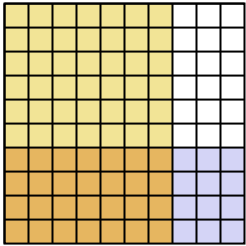
5) $0.4 \times 0.8 =$



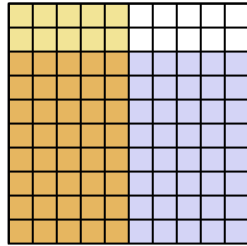
6) $0.5 \times 0.8 =$



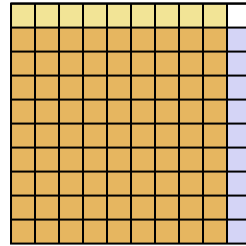
7) $0.4 \times 0.7 =$



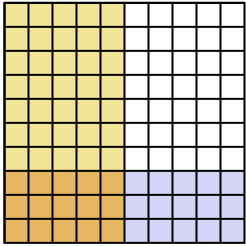
8) $0.8 \times 0.5 =$



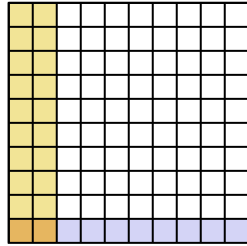
9) $0.9 \times 0.9 =$



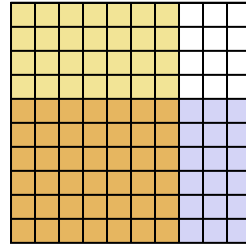
10) $0.3 \times 0.5 =$



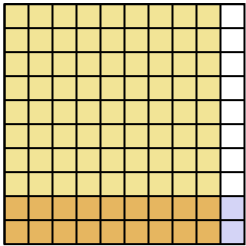
11) $0.1 \times 0.2 =$



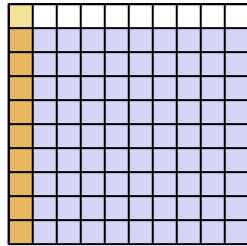
12) $0.6 \times 0.7 =$



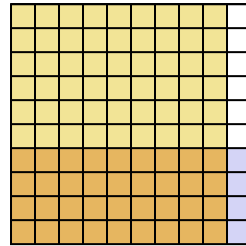
13) $0.2 \times 0.9 =$



14) $0.9 \times 0.1 =$



15) $0.4 \times 0.9 =$



Respuestas

1. $\frac{8}{100} = 0.08$

2. $\frac{36}{100} = 0.36$

3. $\frac{45}{100} = 0.45$

4. $\frac{14}{100} = 0.14$

5. $\frac{32}{100} = 0.32$

6. $\frac{40}{100} = 0.4$

7. $\frac{28}{100} = 0.28$

8. $\frac{40}{100} = 0.4$

9. $\frac{81}{100} = 0.81$

10. $\frac{15}{100} = 0.15$

11. $\frac{2}{100} = 0.02$

12. $\frac{42}{100} = 0.42$

13. $\frac{18}{100} = 0.18$


14. $\frac{9}{100} = 0.09$

15. $\frac{36}{100} = 0.36$




Usa el modelo visual para resolver cada problema.


1) $0.8 \times 0.8 =$




2) $0.6 \times 0.2 =$




3) $0.6 \times 0.6 =$




4) $0.1 \times 0.9 =$




5) $0.8 \times 0.7 =$




6) $0.8 \times 0.9 =$




7) $0.4 \times 0.9 =$




8) $0.8 \times 0.5 =$




9) $0.7 \times 0.8 =$




10) $0.3 \times 0.8 =$




11) $0.9 \times 0.9 =$



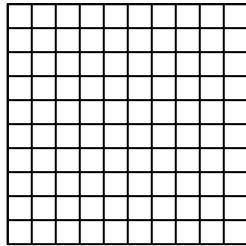
12) $0.7 \times 0.5 =$




13) $0.5 \times 0.8 =$



14) $0.6 \times 0.6 =$



15) $0.2 \times 0.3 =$



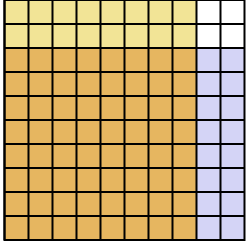
Respuestas

1. _____
2. _____
3. _____
4. _____
5. _____
6. _____
7. _____
8. _____
9. _____
10. _____
11. _____
12. _____
13. _____
14. _____
15. _____

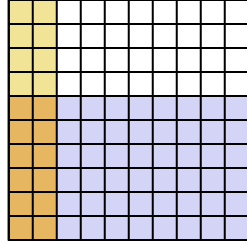


Usa el modelo visual para resolver cada problema.

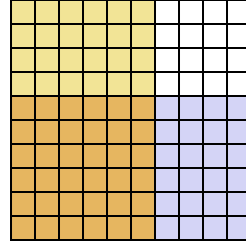
1) $0.8 \times 0.8 =$



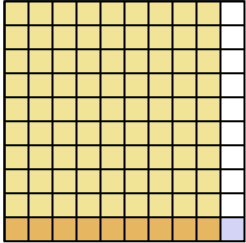
2) $0.6 \times 0.2 =$



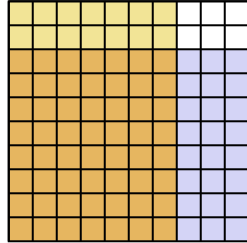
3) $0.6 \times 0.6 =$



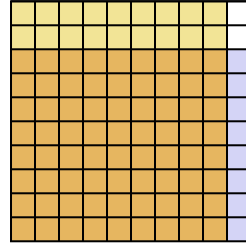
4) $0.1 \times 0.9 =$



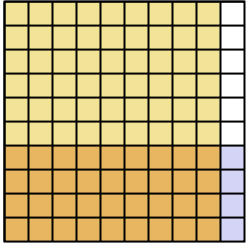
5) $0.8 \times 0.7 =$



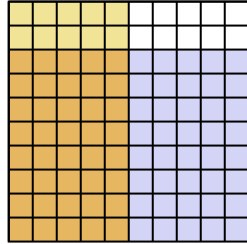
6) $0.8 \times 0.9 =$



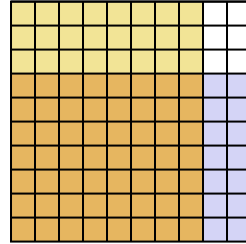
7) $0.4 \times 0.9 =$



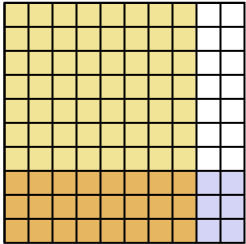
8) $0.8 \times 0.5 =$



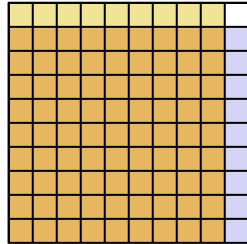
9) $0.7 \times 0.8 =$



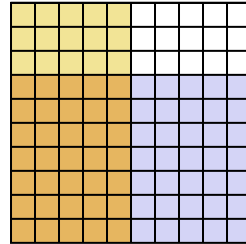
10) $0.3 \times 0.8 =$



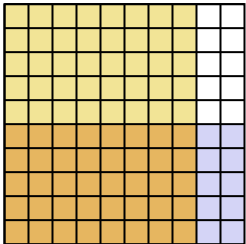
11) $0.9 \times 0.9 =$



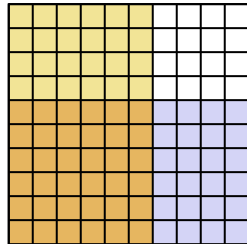
12) $0.7 \times 0.5 =$



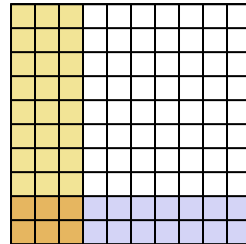
13) $0.5 \times 0.8 =$



14) $0.6 \times 0.6 =$



15) $0.2 \times 0.3 =$



Respuestas

1. $\frac{64}{100} = 0.64$

2. $\frac{12}{100} = 0.12$

3. $\frac{36}{100} = 0.36$

4. $\frac{9}{100} = 0.09$

5. $\frac{56}{100} = 0.56$

6. $\frac{72}{100} = 0.72$

7. $\frac{36}{100} = 0.36$

8. $\frac{40}{100} = 0.4$

9. $\frac{56}{100} = 0.56$

10. $\frac{24}{100} = 0.24$

11. $\frac{81}{100} = 0.81$

12. $\frac{35}{100} = 0.35$

13. $\frac{40}{100} = 0.4$


14. $\frac{36}{100} = 0.36$

15. $\frac{6}{100} = 0.06$




Usa el modelo visual para resolver cada problema.


1) $0.7 \times 0.1 =$




2) $0.2 \times 0.3 =$




3) $0.6 \times 0.7 =$




4) $0.7 \times 0.6 =$




5) $0.2 \times 0.9 =$




6) $0.1 \times 0.3 =$




7) $0.3 \times 0.6 =$




8) $0.7 \times 0.9 =$




9) $0.5 \times 0.1 =$




10) $0.1 \times 0.5 =$




11) $0.7 \times 0.1 =$



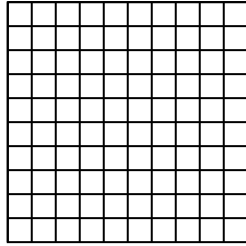
12) $0.8 \times 0.7 =$



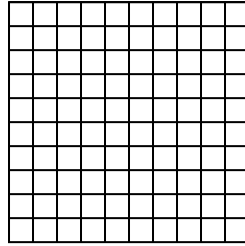
13) $0.6 \times 0.1 =$



14) $0.1 \times 0.6 =$



15) $0.8 \times 0.9 =$



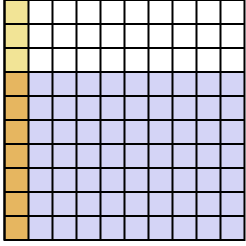
Respuestas

1. _____
2. _____
3. _____
4. _____
5. _____
6. _____
7. _____
8. _____
9. _____
10. _____
11. _____
12. _____
13. _____
14. _____
15. _____

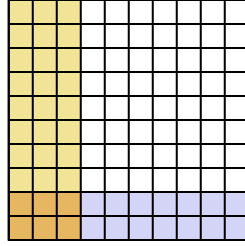


Usa el modelo visual para resolver cada problema.

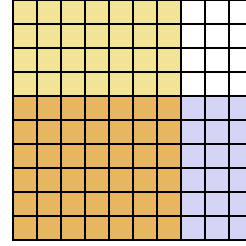
1) $0.7 \times 0.1 =$



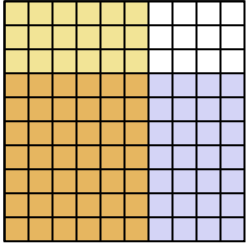
2) $0.2 \times 0.3 =$



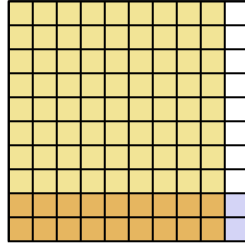
3) $0.6 \times 0.7 =$



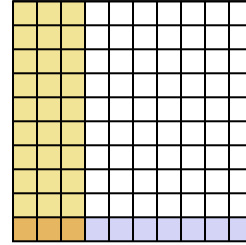
4) $0.7 \times 0.6 =$



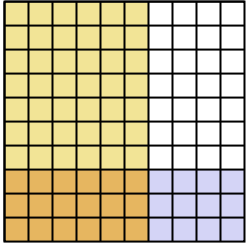
5) $0.2 \times 0.9 =$



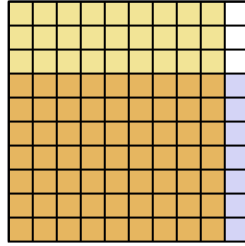
6) $0.1 \times 0.3 =$



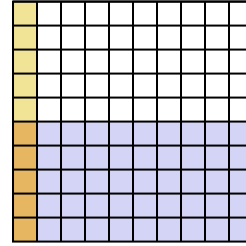
7) $0.3 \times 0.6 =$



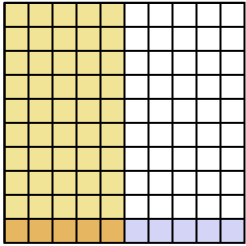
8) $0.7 \times 0.9 =$



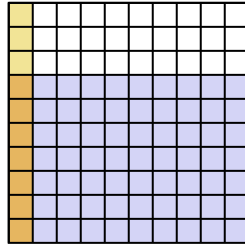
9) $0.5 \times 0.1 =$



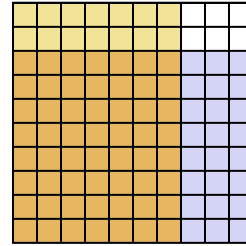
10) $0.1 \times 0.5 =$



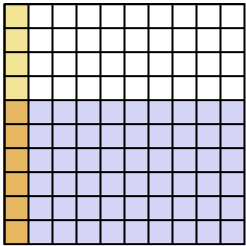
11) $0.7 \times 0.1 =$



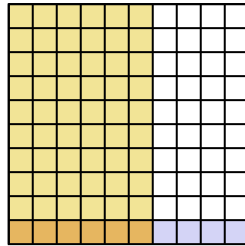
12) $0.8 \times 0.7 =$



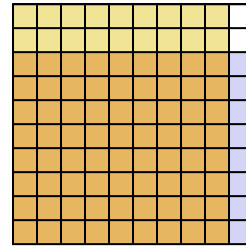
13) $0.6 \times 0.1 =$



14) $0.1 \times 0.6 =$



15) $0.8 \times 0.9 =$



Respuestas

1. $\frac{7}{100} = 0.07$

2. $\frac{6}{100} = 0.06$

3. $\frac{42}{100} = 0.42$

4. $\frac{42}{100} = 0.42$

5. $\frac{18}{100} = 0.18$

6. $\frac{3}{100} = 0.03$

7. $\frac{18}{100} = 0.18$

8. $\frac{63}{100} = 0.63$

9. $\frac{5}{100} = 0.05$

10. $\frac{5}{100} = 0.05$

11. $\frac{7}{100} = 0.07$

12. $\frac{56}{100} = 0.56$

13. $\frac{6}{100} = 0.06$


14. $\frac{6}{100} = 0.06$

15. $\frac{72}{100} = 0.72$




Usa el modelo visual para resolver cada problema.


1) $0.5 \times 0.6 =$




2) $0.6 \times 0.7 =$




3) $0.5 \times 0.2 =$




4) $0.4 \times 0.6 =$




5) $0.3 \times 0.5 =$




6) $0.1 \times 0.1 =$




7) $0.1 \times 0.6 =$




8) $0.5 \times 0.7 =$



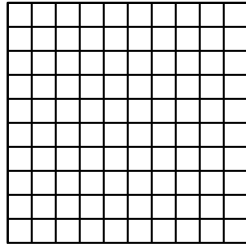
9) $0.1 \times 0.7 =$




10) $0.8 \times 0.5 =$




11) $0.4 \times 0.6 =$



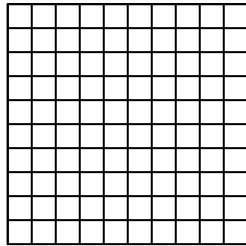
12) $0.7 \times 0.3 =$




13) $0.6 \times 0.7 =$



14) $0.5 \times 0.9 =$



15) $0.5 \times 0.9 =$



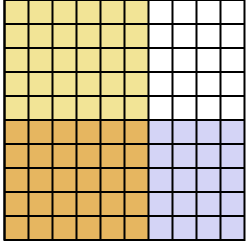
Respuestas

1. _____
2. _____
3. _____
4. _____
5. _____
6. _____
7. _____
8. _____
9. _____
10. _____
11. _____
12. _____
13. _____
14. _____
15. _____

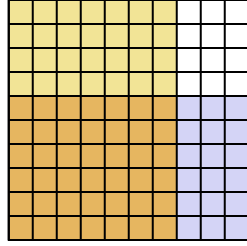


Usa el modelo visual para resolver cada problema.

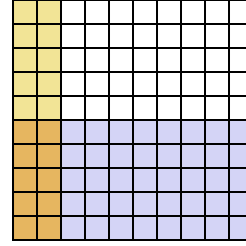
1) $0.5 \times 0.6 =$



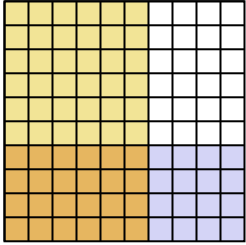
2) $0.6 \times 0.7 =$



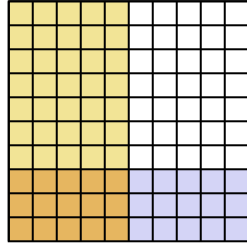
3) $0.5 \times 0.2 =$



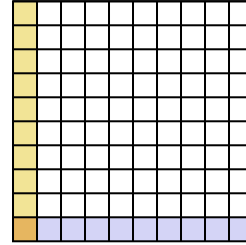
4) $0.4 \times 0.6 =$



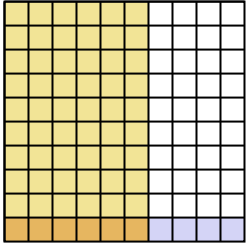
5) $0.3 \times 0.5 =$



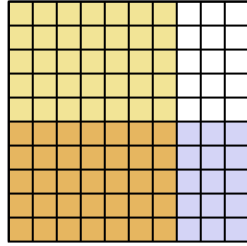
6) $0.1 \times 0.1 =$



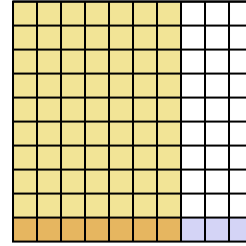
7) $0.1 \times 0.6 =$



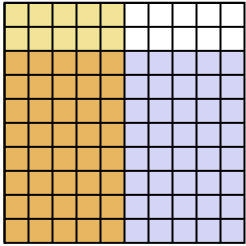
8) $0.5 \times 0.7 =$



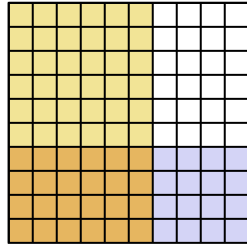
9) $0.1 \times 0.7 =$



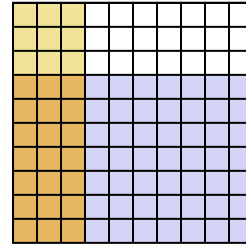
10) $0.8 \times 0.5 =$



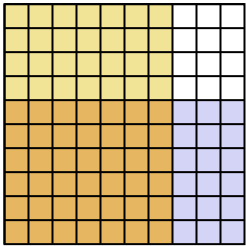
11) $0.4 \times 0.6 =$



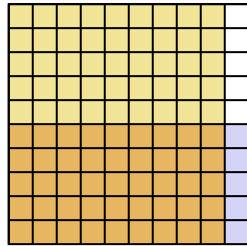
12) $0.7 \times 0.3 =$



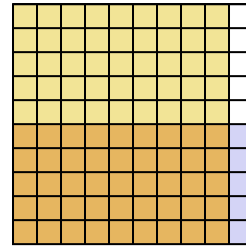
13) $0.6 \times 0.7 =$



14) $0.5 \times 0.9 =$



15) $0.5 \times 0.9 =$



Respuestas

1. $\frac{30}{100} = 0.3$

2. $\frac{42}{100} = 0.42$

3. $\frac{10}{100} = 0.1$

4. $\frac{24}{100} = 0.24$

5. $\frac{15}{100} = 0.15$

6. $\frac{1}{100} = 0.01$

7. $\frac{6}{100} = 0.06$

8. $\frac{35}{100} = 0.35$

9. $\frac{7}{100} = 0.07$

10. $\frac{40}{100} = 0.4$

11. $\frac{24}{100} = 0.24$

12. $\frac{21}{100} = 0.21$

13. $\frac{42}{100} = 0.42$


14. $\frac{45}{100} = 0.45$

15. $\frac{45}{100} = 0.45$




Usa el modelo visual para resolver cada problema.


1) $0.2 \times 0.6 =$




2) $0.8 \times 0.6 =$




3) $0.2 \times 0.1 =$




4) $0.8 \times 0.9 =$




5) $0.4 \times 0.5 =$




6) $0.1 \times 0.2 =$




7) $0.6 \times 0.9 =$




8) $0.2 \times 0.8 =$




9) $0.5 \times 0.7 =$




10) $0.4 \times 0.9 =$




11) $0.9 \times 0.5 =$



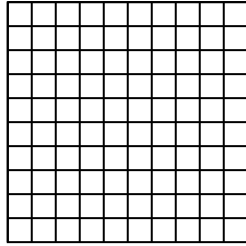
12) $0.5 \times 0.2 =$



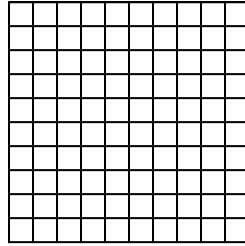
13) $0.4 \times 0.8 =$



14) $0.7 \times 0.6 =$



15) $0.8 \times 0.4 =$



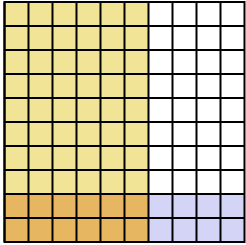
Respuestas

1. _____
2. _____
3. _____
4. _____
5. _____
6. _____
7. _____
8. _____
9. _____
10. _____
11. _____
12. _____
13. _____
14. _____
15. _____

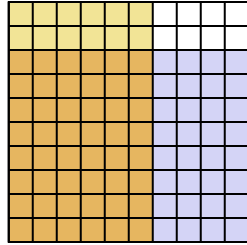


Usa el modelo visual para resolver cada problema.

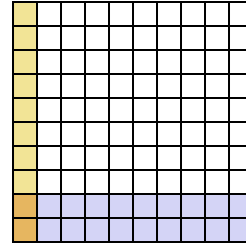
1) $0.2 \times 0.6 =$



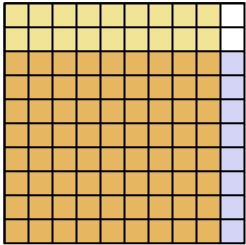
2) $0.8 \times 0.6 =$



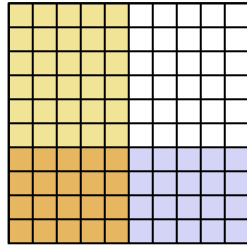
3) $0.2 \times 0.1 =$



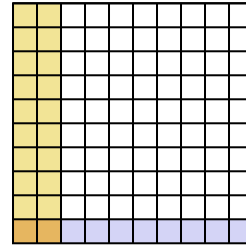
4) $0.8 \times 0.9 =$



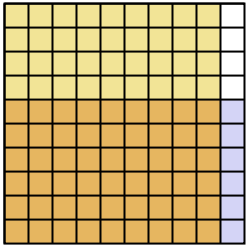
5) $0.4 \times 0.5 =$



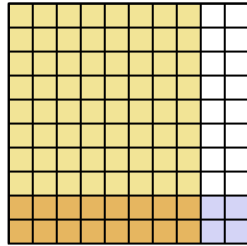
6) $0.1 \times 0.2 =$



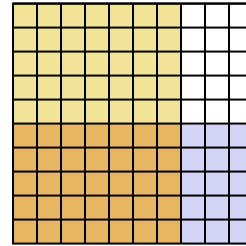
7) $0.6 \times 0.9 =$



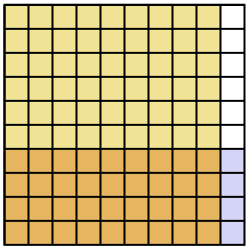
8) $0.2 \times 0.8 =$



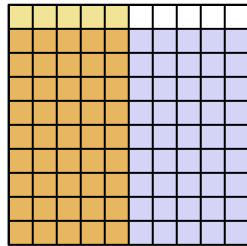
9) $0.5 \times 0.7 =$



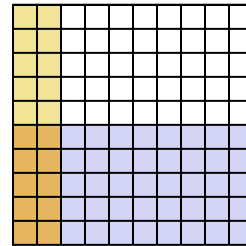
10) $0.4 \times 0.9 =$



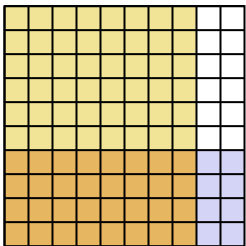
11) $0.9 \times 0.5 =$



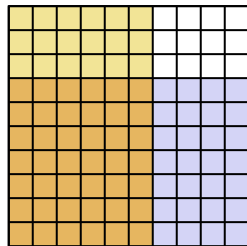
12) $0.5 \times 0.2 =$



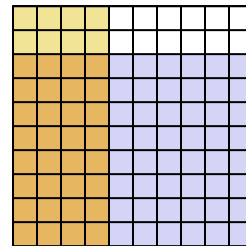
13) $0.4 \times 0.8 =$



14) $0.7 \times 0.6 =$



15) $0.8 \times 0.4 =$



Respuestas

1. $\frac{12}{100} = 0.12$

2. $\frac{48}{100} = 0.48$

3. $\frac{2}{100} = 0.02$

4. $\frac{72}{100} = 0.72$

5. $\frac{20}{100} = 0.2$

6. $\frac{2}{100} = 0.02$

7. $\frac{54}{100} = 0.54$

8. $\frac{16}{100} = 0.16$

9. $\frac{35}{100} = 0.35$

10. $\frac{36}{100} = 0.36$

11. $\frac{45}{100} = 0.45$

12. $\frac{10}{100} = 0.1$

13. $\frac{32}{100} = 0.32$

14. $\frac{42}{100} = 0.42$

15. $\frac{32}{100} = 0.32$