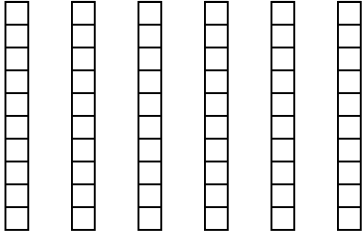


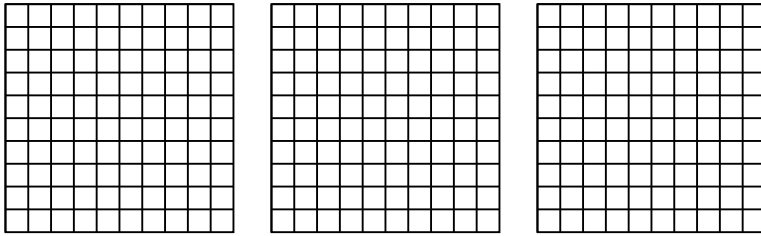


Usa el modelo visual para resolver cada problema.


1) $6 \times 0.7 =$



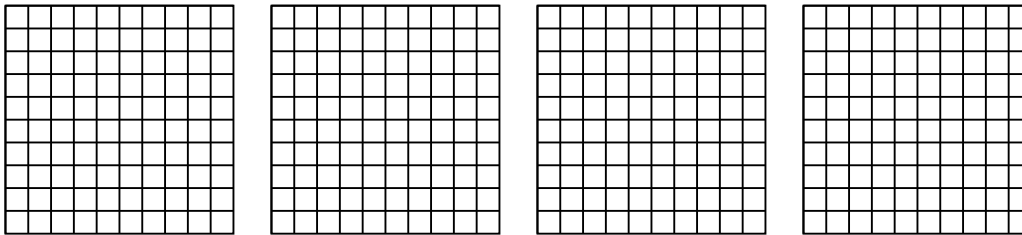
2) $3 \times 0.59 =$



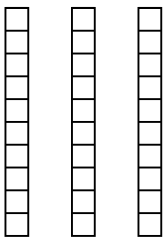
3) $3 \times 0.52 =$



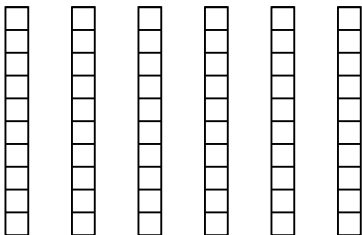
4) $4 \times 0.35 =$



5) $3 \times 0.5 =$



6) $6 \times 0.3 =$



Respuestas

1. _____

2. _____

3. _____

4. _____

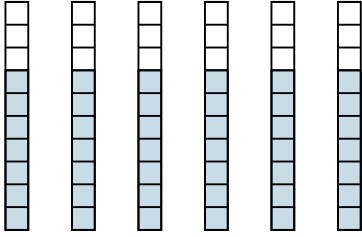
5. _____

6. _____

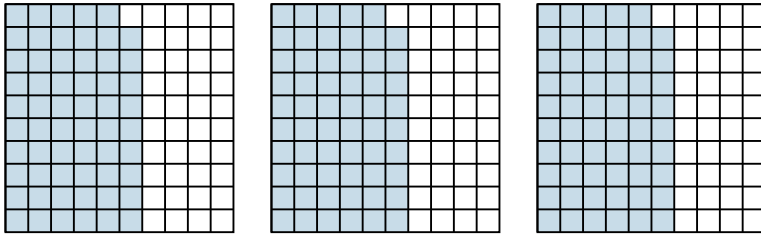


Usa el modelo visual para resolver cada problema.


1) $6 \times 0.7 =$



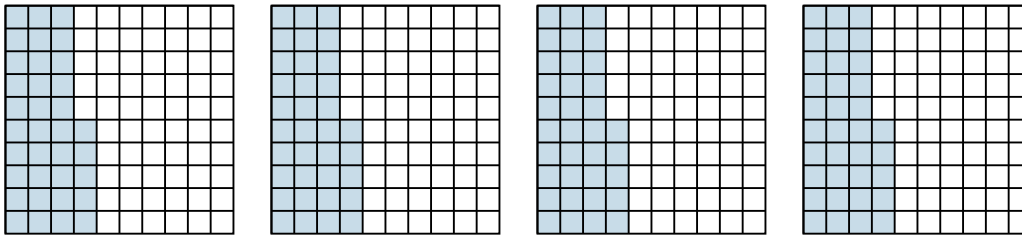
2) $3 \times 0.59 =$



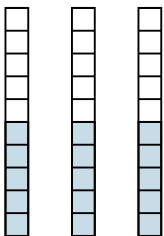
3) $3 \times 0.52 =$



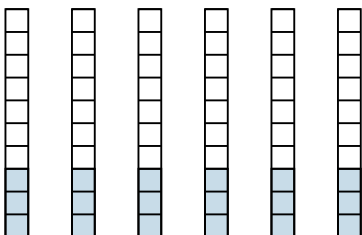
4) $4 \times 0.35 =$



5) $3 \times 0.5 =$



6) $6 \times 0.3 =$



Respuestas

1. $\frac{42}{10} = 4.2$

2. $\frac{177}{100} = 1.77$

3. $\frac{156}{100} = 1.56$

4. $\frac{140}{100} = 1.4$

5. $\frac{15}{10} = 1.5$

6. $\frac{18}{10} = 1.8$