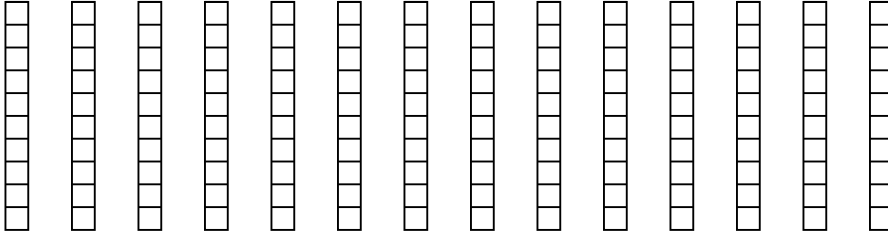


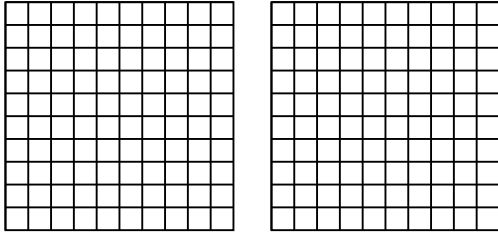


Usa el modelo visual para resolver cada problema.

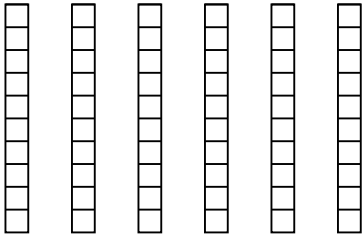
1) $14 \times 0.5 =$



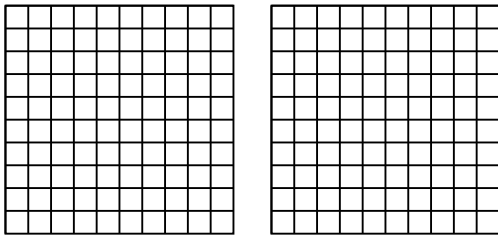
2) $2 \times 0.80 =$




3) $6 \times 0.4 =$



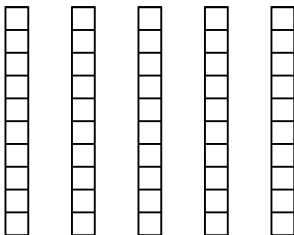
4) $2 \times 0.45 =$



5) $3 \times 0.58 =$



6) $5 \times 0.6 =$



Respuestas

1. _____

2. _____

3. _____

4. _____

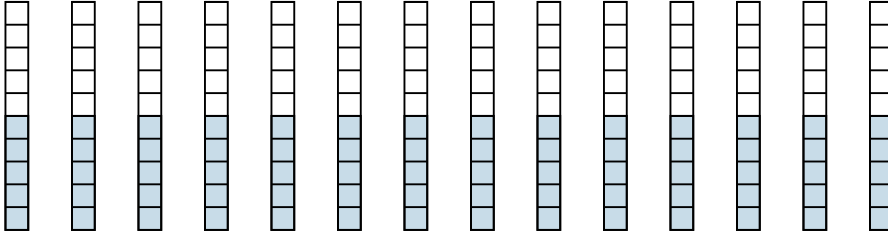
5. _____

6. _____

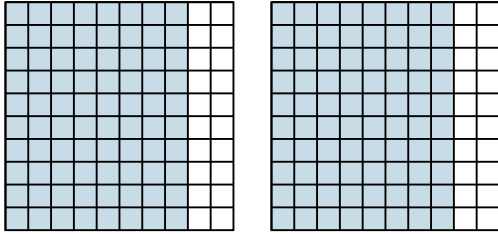


Usa el modelo visual para resolver cada problema.

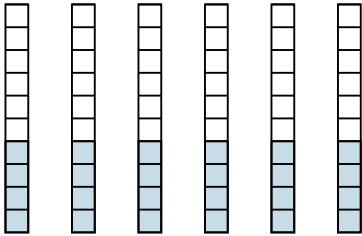
1) $14 \times 0.5 =$



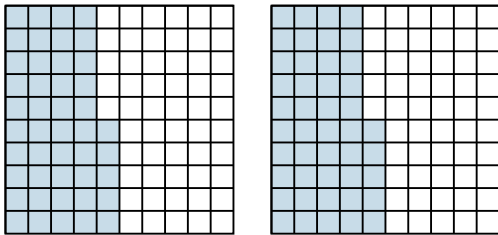
2) $2 \times 0.80 =$



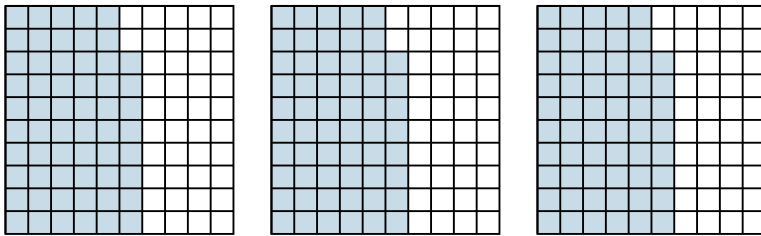
3) $6 \times 0.4 =$



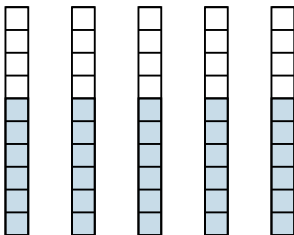
4) $2 \times 0.45 =$



5) $3 \times 0.58 =$



6) $5 \times 0.6 =$



Respuestas

1. $\frac{70}{10} = 7$

2. $\frac{160}{100} = 1.6$

3. $\frac{24}{10} = 2.4$

4. $\frac{90}{100} = 0.9$

5. $\frac{174}{100} = 1.74$

6. $\frac{30}{10} = 3$