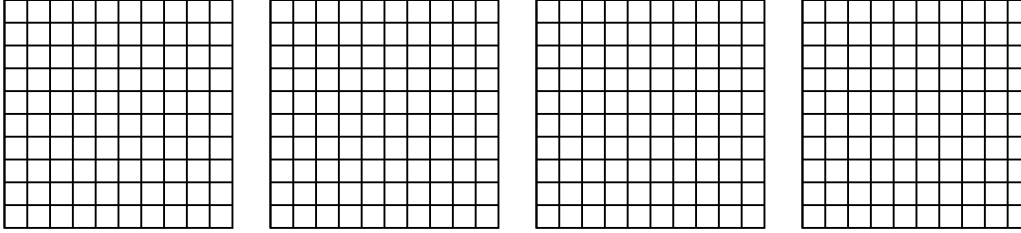


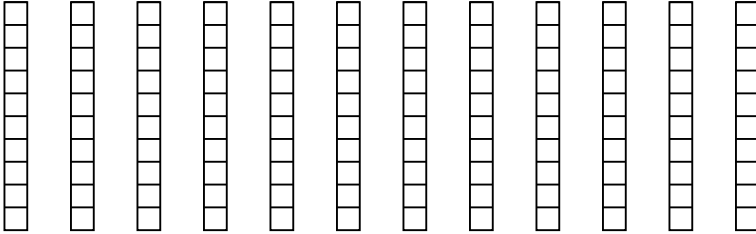


Usa el modelo visual para resolver cada problema.


1) $4 \times 0.80 =$



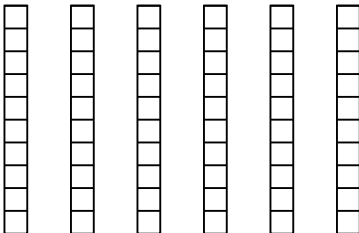
2) $12 \times 0.8 =$



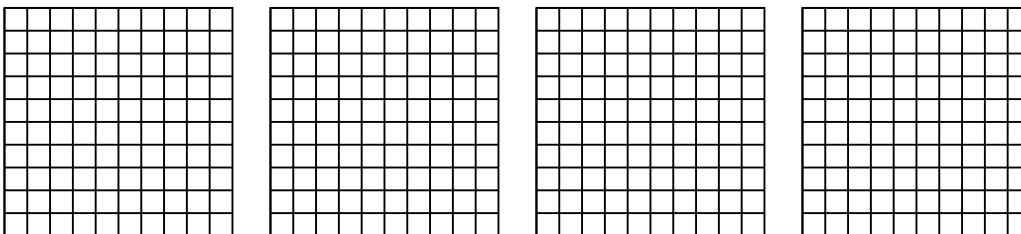
3) $3 \times 0.82 =$



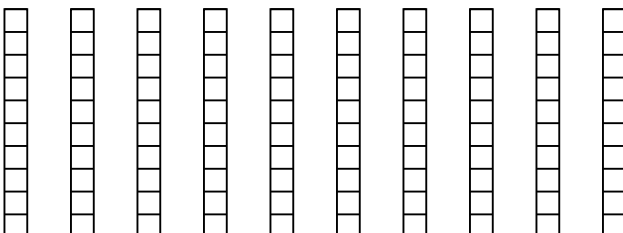
4) $6 \times 0.1 =$



5) $4 \times 0.10 =$



6) $10 \times 0.2 =$



Respuestas

1. _____

2. _____

3. _____

4. _____

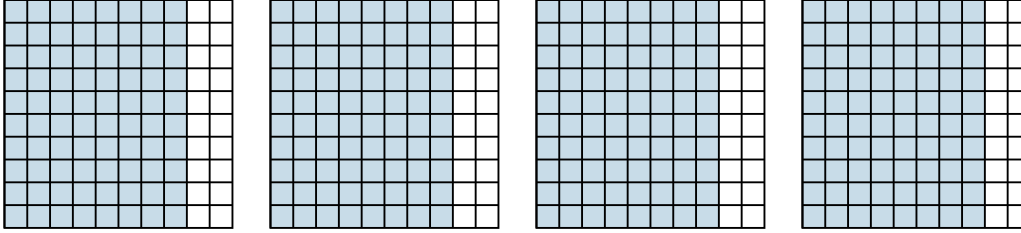
5. _____

6. _____

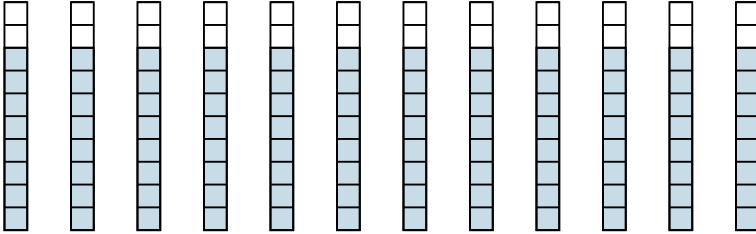


Usa el modelo visual para resolver cada problema.

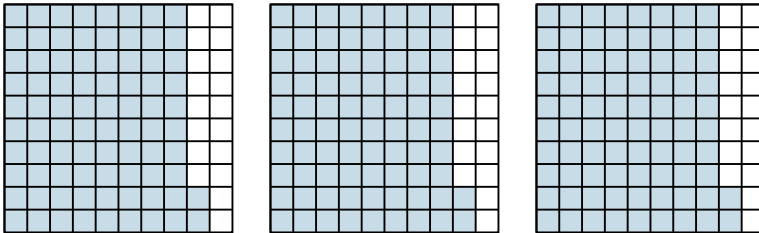
1) $4 \times 0.80 =$



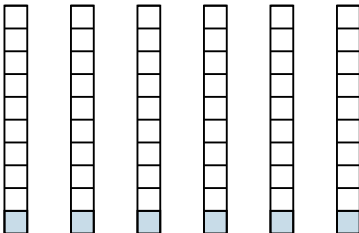
2) $12 \times 0.8 =$



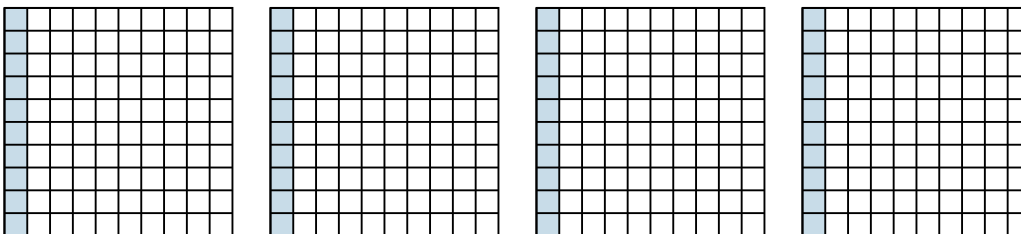
3) $3 \times 0.82 =$



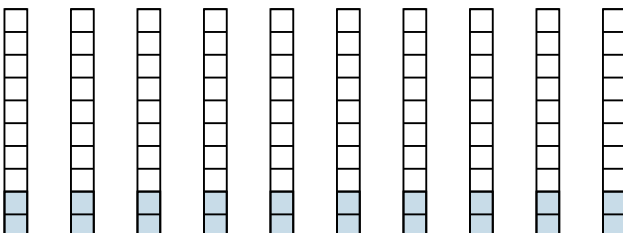
4) $6 \times 0.1 =$



5) $4 \times 0.10 =$



6) $10 \times 0.2 =$



Respuestas

1. $\frac{320}{100} = 3.2$

2. $\frac{96}{10} = 9.6$

3. $\frac{246}{100} = 2.46$

4. $\frac{6}{10} = 0.6$

5. $\frac{40}{100} = 0.4$

6. $\frac{20}{10} = 2$