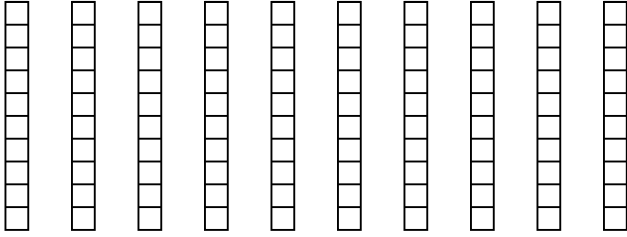


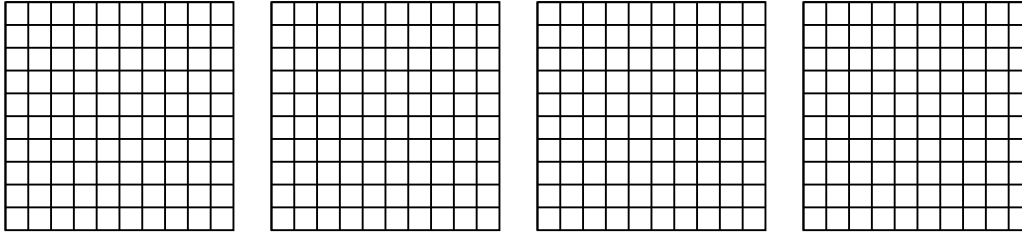


Usa el modelo visual para resolver cada problema.

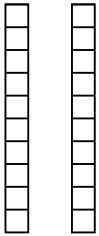
1) $10 \times 0.3 =$




2) $4 \times 0.81 =$




3) $2 \times 0.1 =$



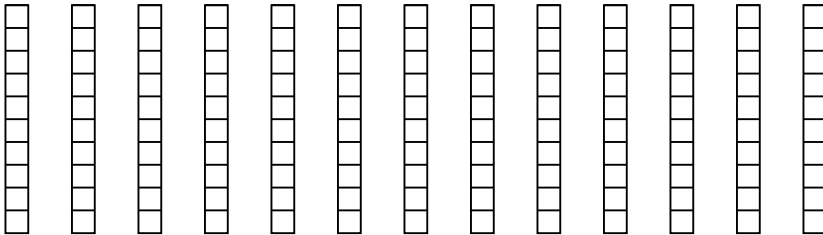
4) $3 \times 0.78 =$



5) $3 \times 0.39 =$



6) $13 \times 0.6 =$



Respuestas

1. _____

2. _____

3. _____

4. _____

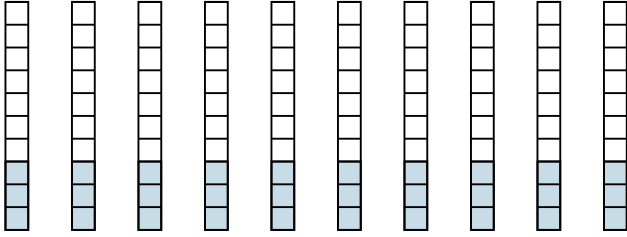
5. _____

6. _____

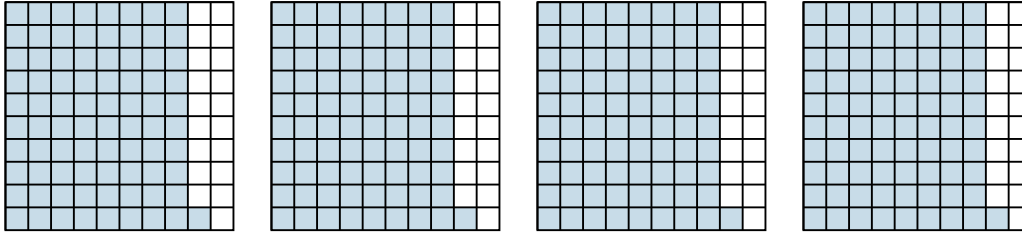


Usa el modelo visual para resolver cada problema.

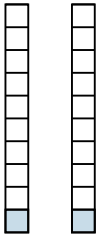
1) $10 \times 0.3 =$



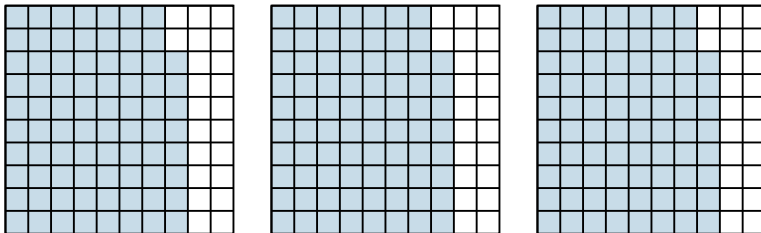
2) $4 \times 0.81 =$



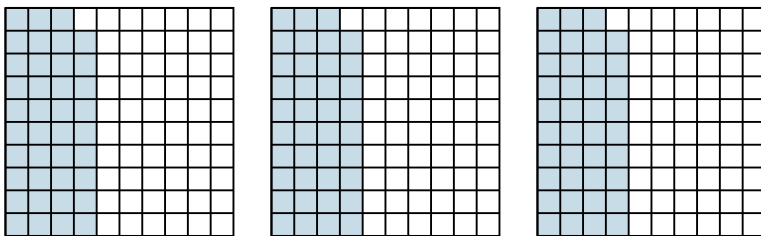
3) $2 \times 0.1 =$



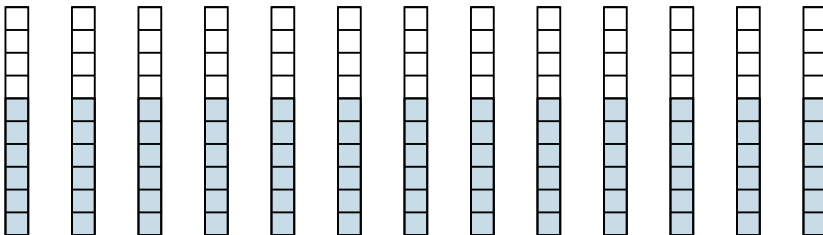
4) $3 \times 0.78 =$



5) $3 \times 0.39 =$



6) $13 \times 0.6 =$



Respuestas

1. $\frac{30}{10} = 3$

2. $\frac{324}{100} = 3.24$

3. $\frac{2}{10} = 0.2$

4. $\frac{234}{100} = 2.34$

5. $\frac{117}{100} = 1.17$

6. $\frac{78}{10} = 7.8$