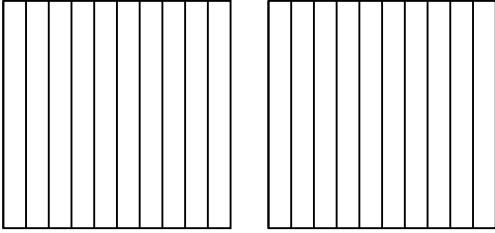


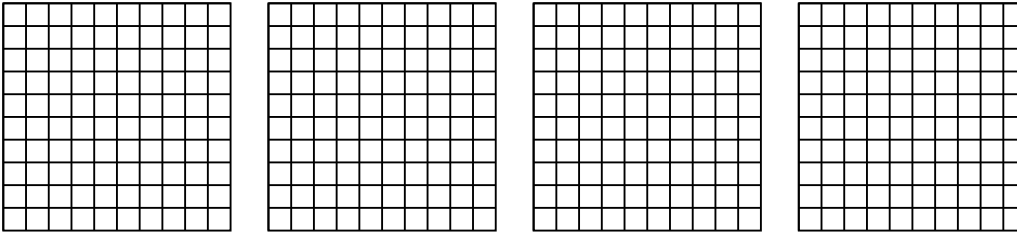


Usa el modelo visual para resolver cada problema.

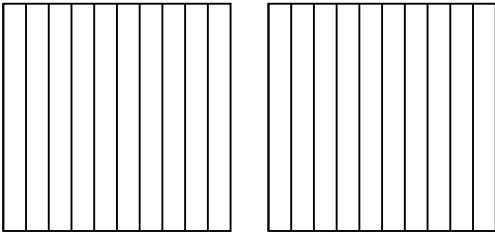
1) $2 \times 0.6 =$



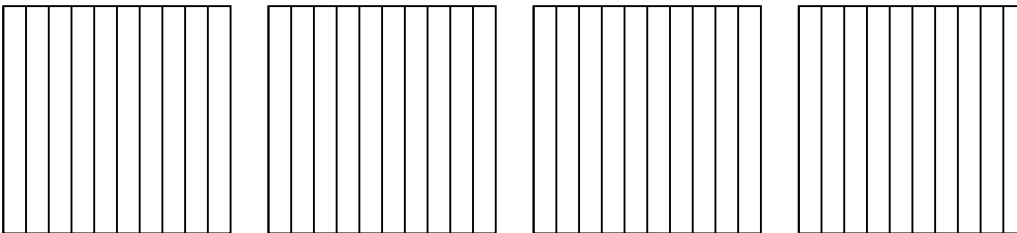
2) $4 \times 0.34 =$



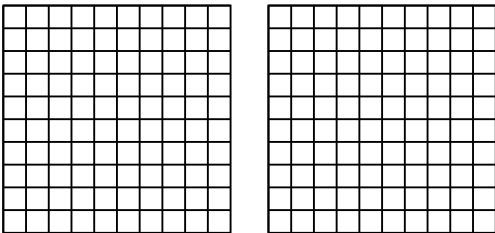
3) $2 \times 0.2 =$



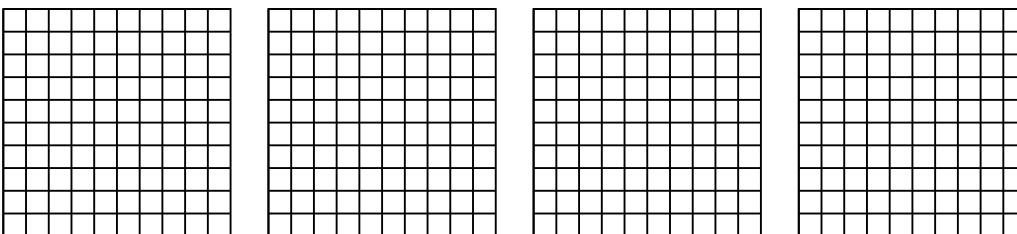
4) $4 \times 0.3 =$



5) $2 \times 0.93 =$



6) $4 \times 0.87 =$



Respuestas

1. _____

2. _____

3. _____

4. _____

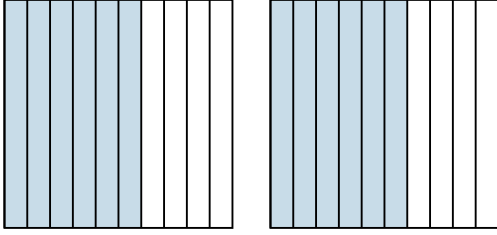
5. _____

6. _____

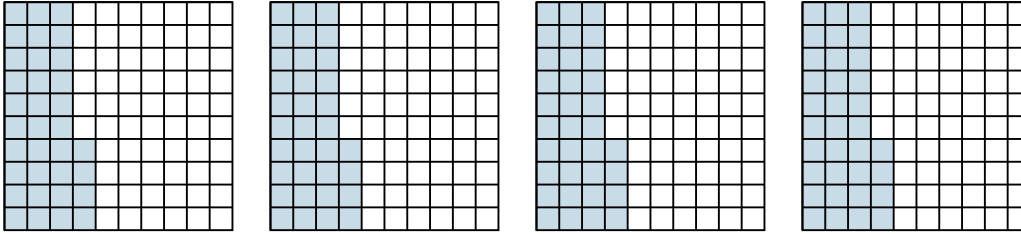


Usa el modelo visual para resolver cada problema.

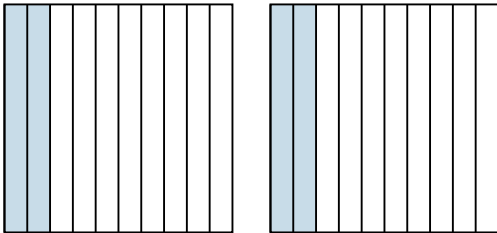
1) $2 \times 0.6 =$



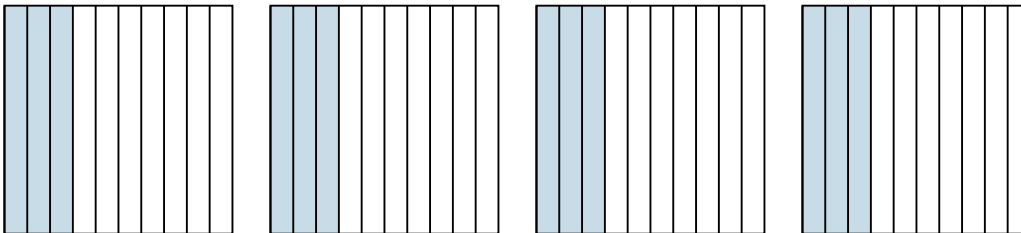
2) $4 \times 0.34 =$



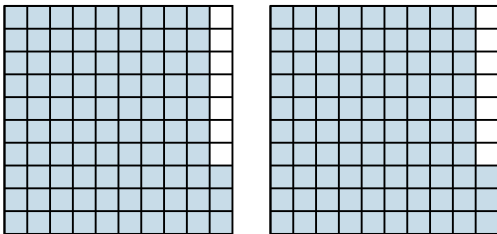
3) $2 \times 0.2 =$



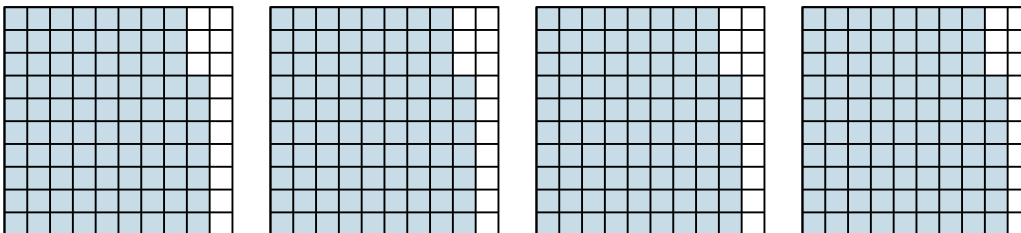
4) $4 \times 0.3 =$



5) $2 \times 0.93 =$



6) $4 \times 0.87 =$



Respuestas

1. $\frac{12}{10} = 1.2$

2. $\frac{136}{100} = 1.36$

3. $\frac{4}{10} = 0.4$

4. $\frac{12}{10} = 1.2$

5. $\frac{186}{100} = 1.86$

6. $\frac{348}{100} = 3.48$