
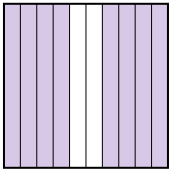
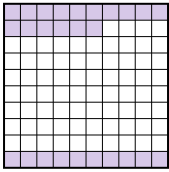
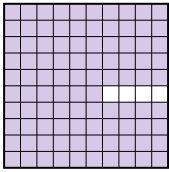




Pon las cajas en orden de la menor a la mayor basado en la cantidad sombreada.

Respuestas

Ej) A  B  C  D 

menor 0.1 - A
0.26 - C
0.8 - B
mayor 0.96 - D

Ej. A,C,B,D

1. _____

2. _____

3. _____


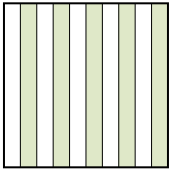
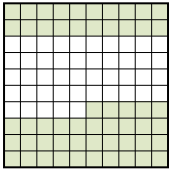
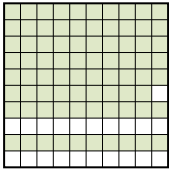
4. _____

5. _____

6. _____

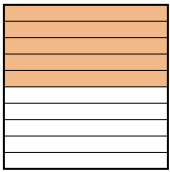
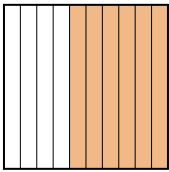
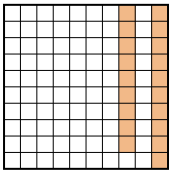
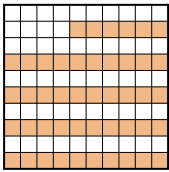
7. _____

8. _____

1) A  B  C  D 



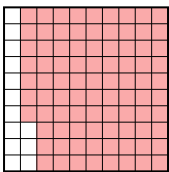
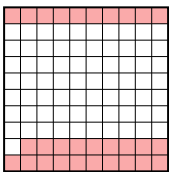
menor _____

mayor _____

2) A  B  C  D 


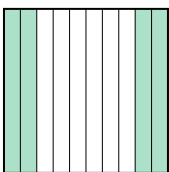
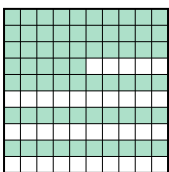
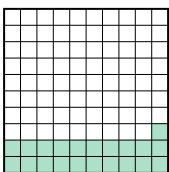
menor _____

mayor _____

3) A  B  C  D 


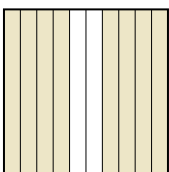
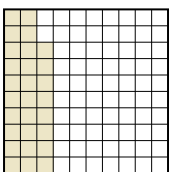
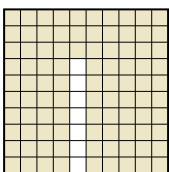
menor _____

mayor _____

4) A  B  C  D 


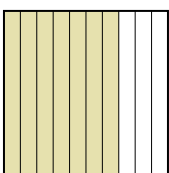
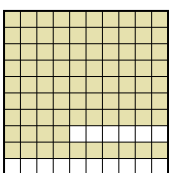
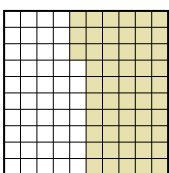
menor _____

mayor _____

5) A  B  C  D 

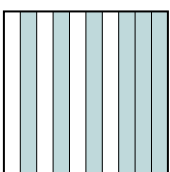

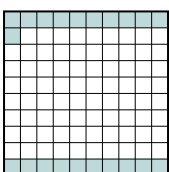
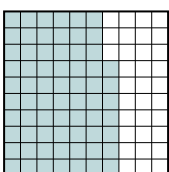
menor _____

mayor _____

6) A  B  C  D 

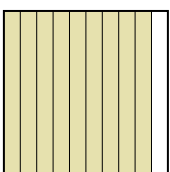

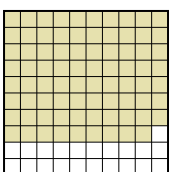
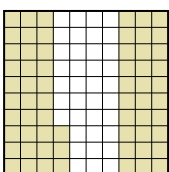
menor _____

mayor _____

7) A  B  C  D 

menor _____

mayor _____

8) A  B  C  D 

menor _____

mayor _____



Pon las cajas en orden de la menor a la mayor basado en la cantidad sombreada.

Ej)	A	B	C	D	menor <u>0.1 - A</u> <u>0.26 - C</u> <u>0.8 - B</u> mayor <u>0.96 - D</u>
1)	A	B	C	D	menor <u>0.3 - A</u> <u>0.5 - B</u> <u>0.55 - C</u> mayor <u>0.79 - D</u>
2)	A	B	C	D	menor <u>0.19 - C</u> <u>0.46 - D</u> <u>0.5 - A</u> mayor <u>0.6 - B</u>
3)	A	B	C	D	menor <u>0.1 - B</u> <u>0.29 - D</u> <u>0.8 - A</u> mayor <u>0.87 - C</u>
4)	A	B	C	D	menor <u>0.21 - D</u> <u>0.4 - B</u> <u>0.65 - C</u> mayor <u>0.7 - A</u>
5)	A	B	C	D	menor <u>0.28 - C</u> <u>0.4 - A</u> <u>0.8 - B</u> mayor <u>0.93 - D</u>
6)	A	B	C	D	menor <u>0.2 - A</u> <u>0.53 - D</u> <u>0.7 - B</u> mayor <u>0.84 - C</u>
7)	A	B	C	D	menor <u>0.21 - C</u> <u>0.6 - A</u> <u>0.67 - D</u> mayor <u>0.7 - B</u>
8)	A	B	C	D	menor <u>0.63 - D</u> <u>0.7 - B</u> <u>0.79 - C</u> mayor <u>0.9 - A</u>

Respuestas

- Ej. A,C,B,D
1. A,B,C,D
2. C,D,A,B
3. B,D,A,C
4. D,B,C,A
5. C,A,B,D
6. A,D,B,C
7. C,A,D,B
8. D,B,C,A