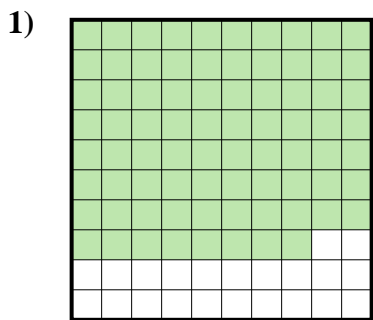
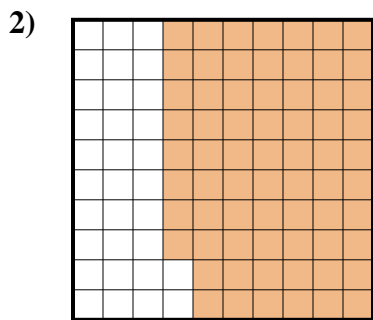





Determina cuál letra mejor representa la cantidad sombreada del total.



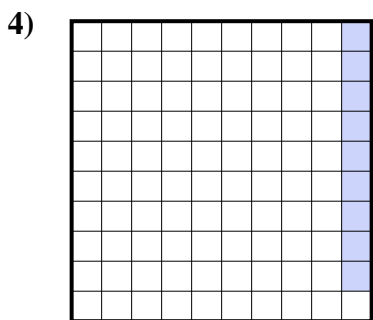
- A. 7.8
- B. 78
- C. 780
- D. 0.78



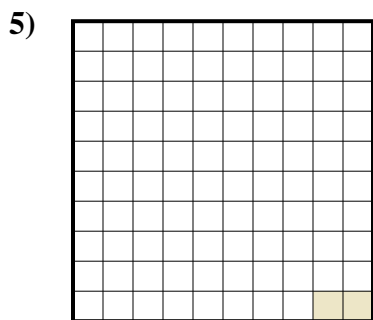
- A. 680
- B. 6.8
- C. 0.68
- D. 68



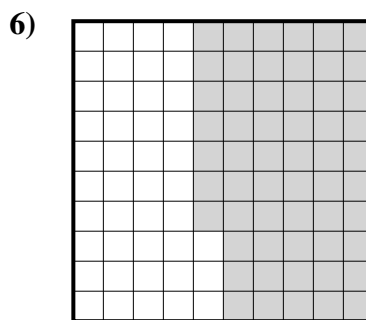
- A. 5
- B. 0.05
- C. 0.5
- D. 50



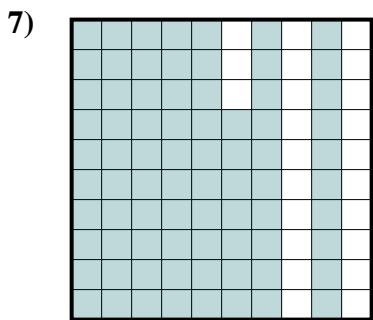
- A. 0.09
- B. 0.009
- C. 0.9
- D. 90



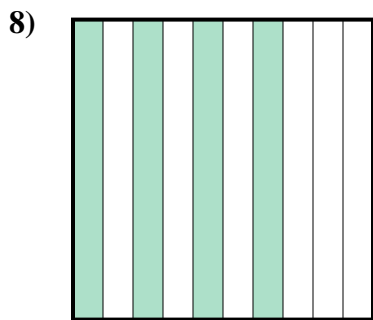
- A. 0.02
- B. 0.002
- C. 2
- D. 0.2




- A. 570
- B. 0.57
- C. 5.7
- D. 0.057



- A. 0.77
- B. 770
- C. 0.077
- D. 77



- A. 0.04
- B. 400
- C. 0.4
- D. 40



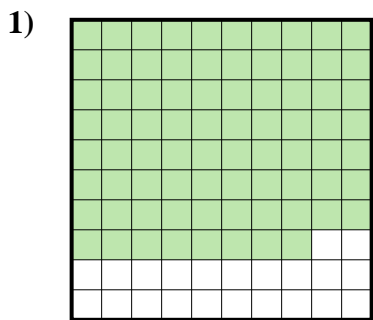
- A. 0.03
- B. 3
- C. 30
- D. 0.3

Respuestas

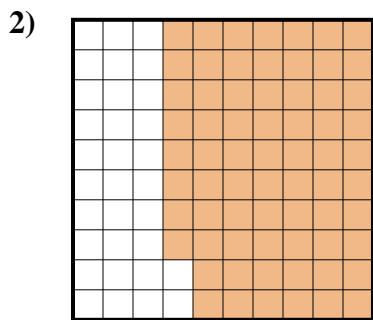
- 1. _____
- 2. _____
- 3. _____
- 4. _____
- 5. _____
- 6. _____
- 7. _____
- 8. _____
- 9. _____




Determina cuál letra mejor representa la cantidad sombreada del total.



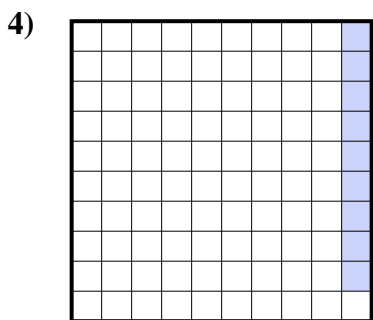
- A. 7.8
- B. 78
- C. 780
- D. 0.78



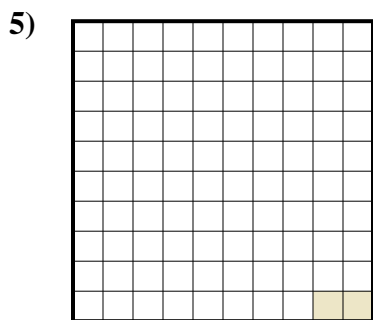
- A. 680
- B. 6.8
- C. 0.68
- D. 68



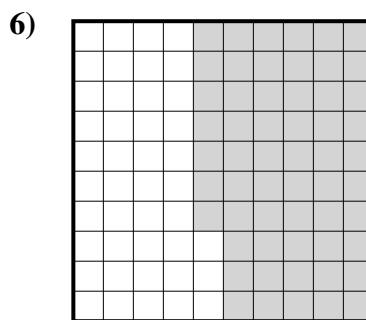
- A. 5
- B. 0.05
- C. 0.5
- D. 50



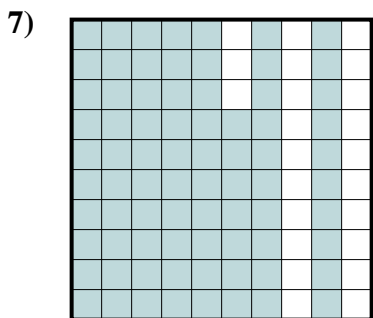
- A. 0.09
- B. 0.009
- C. 0.9
- D. 90



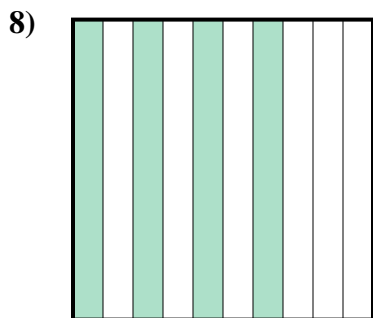
- A. 0.02
- B. 0.002
- C. 2
- D. 0.2




- A. 570
- B. 0.57
- C. 5.7
- D. 0.057



- A. 0.77
- B. 770
- C. 0.077
- D. 77



- A. 0.04
- B. 400
- C. 0.4
- D. 40



- A. 0.03
- B. 3
- C. 30
- D. 0.3

Respuestas

- 1. **D**
- 2. **C**
- 3. **C**
- 4. **A**
- 5. **A**
- 6. **B**
- 7. **A**
- 8. **C**
- 9. **D**