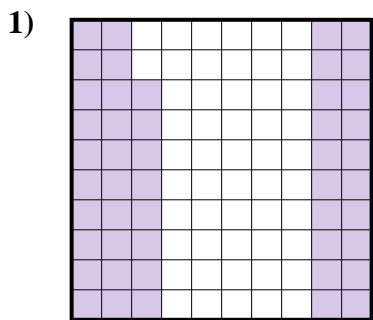





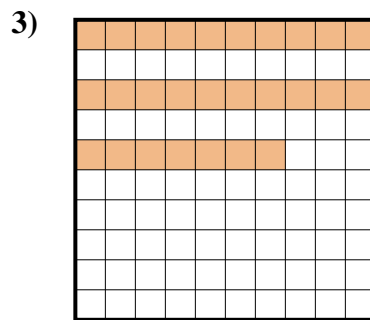
Determina cuál letra mejor representa la cantidad sombreada del total.



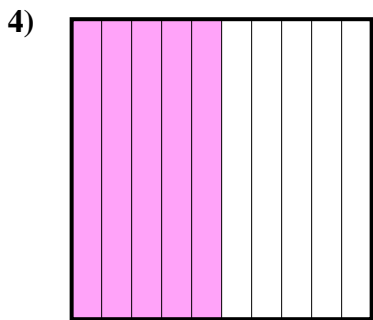
- A. 4.8
- B. 48
- C. 0.48
- D. 480



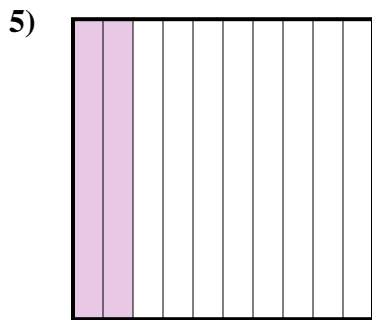
- A. 1
- B. 0.1
- C. 100
- D. 0.01




- A. 0.27
- B. 2.7
- C. 27
- D. 0.027



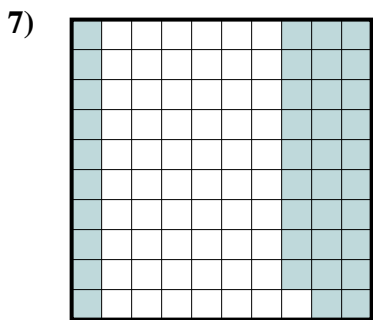
- A. 0.5
- B. 50
- C. 5
- D. 0.05



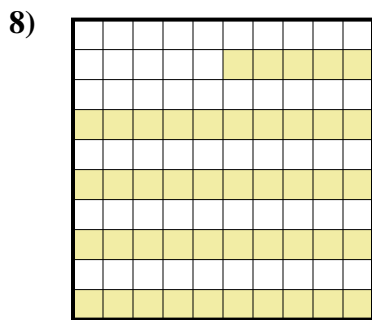
- A. 2
- B. 20
- C. 0.02
- D. 0.2



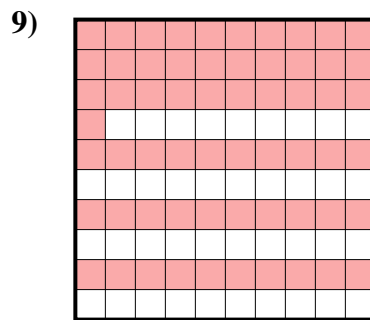
- A. 30
- B. 0.3
- C. 3
- D. 300



- A. 3.9
- B. 0.39
- C. 39
- D. 0.039



- A. 4.5
- B. 45
- C. 0.45
- D. 0.045



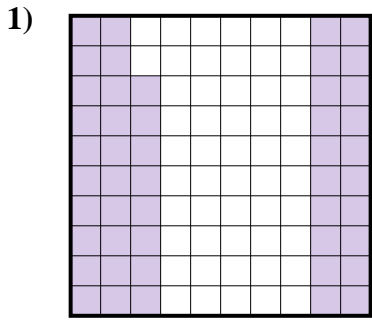
- A. 610
- B. 0.61
- C. 61
- D. 6.1

Respuestas

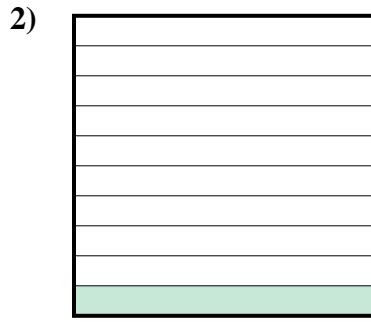
- 1. _____
- 2. _____
- 3. _____
- 4. _____
- 5. _____
- 6. _____
- 7. _____
- 8. _____
- 9. _____



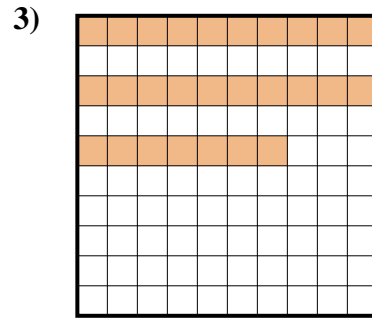
Determina cuál letra mejor representa la cantidad sombreada del total.



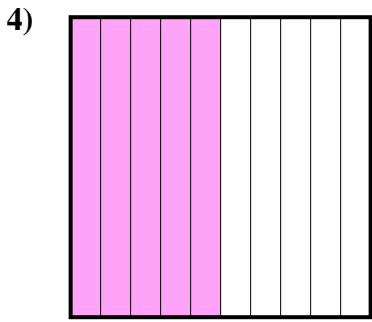
- A. 4.8
- B. 48
- C. 0.48
- D. 480



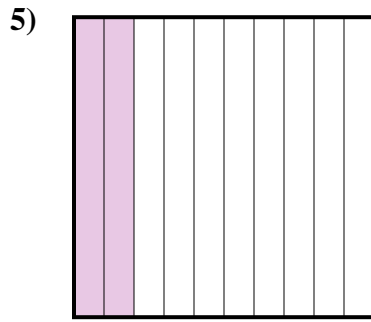
- A. 1
- B. 0.1
- C. 100
- D. 0.01




- A. 0.27
- B. 2.7
- C. 27
- D. 0.027



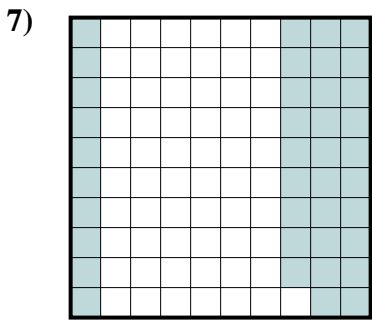
- A. 0.5
- B. 50
- C. 5
- D. 0.05



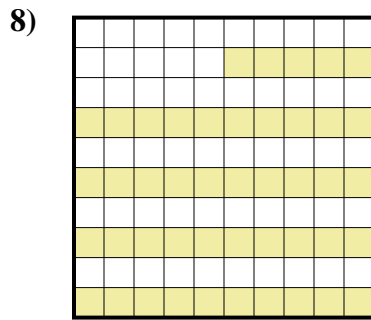
- A. 2
- B. 20
- C. 0.02
- D. 0.2



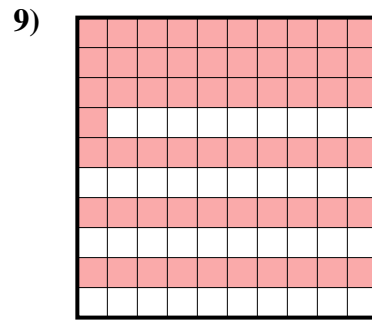
- A. 30
- B. 0.3
- C. 3
- D. 300



- A. 3.9
- B. 0.39
- C. 39
- D. 0.039



- A. 4.5
- B. 45
- C. 0.45
- D. 0.045



- A. 610
- B. 0.61
- C. 61
- D. 6.1

Respuestas

- 1. **C**
- 2. **B**
- 3. **A**
- 4. **A**
- 5. **D**
- 6. **B**
- 7. **B**
- 8. **C**
- 9. **B**