





Determina cuál letra mejor representa la cantidad sombreada del total.

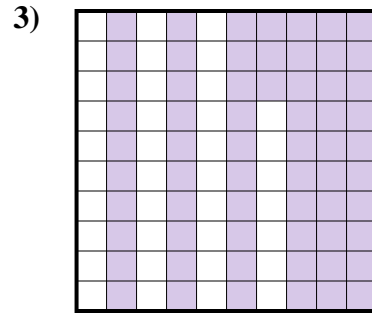
Respuestas



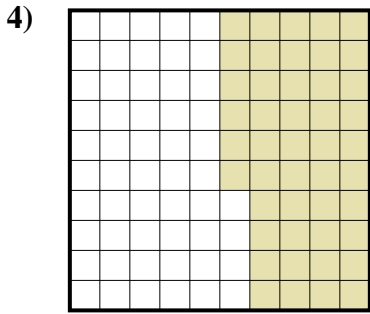
- A. 0.03
- B. 0.3
- C. 3
- D. 30



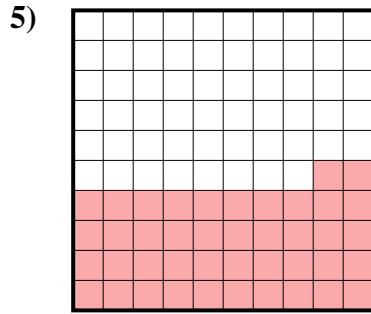
- A. 0.7
- B. 70
- C. 700
- D. 0.07



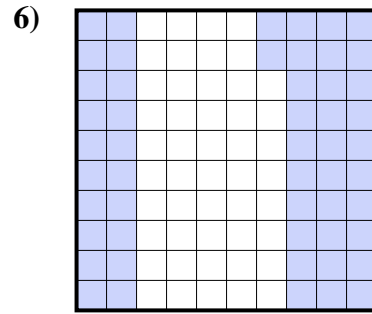
- A. 63
- B. 6.3
- C. 0.63
- D. 0.063



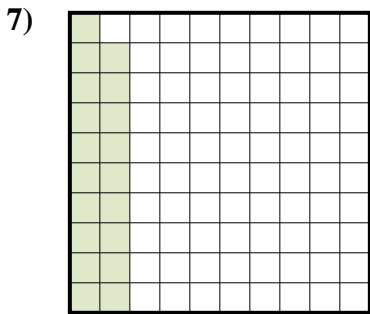
- A. 4.6
- B. 0.046
- C. 46
- D. 0.46



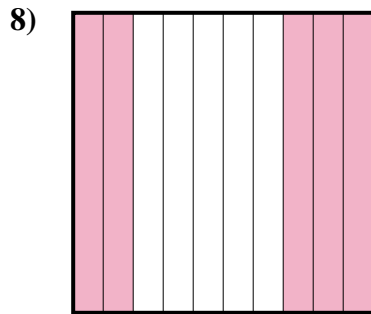
- A. 0.42
- B. 420
- C. 4.2
- D. 0.042




- A. 0.52
- B. 52
- C. 520
- D. 0.052



- A. 190
- B. 0.19
- C. 1.9
- D. 0.019



- A. 0.05
- B. 0.5
- C. 500
- D. 50




- A. 80
- B. 800
- C. 0.08
- D. 0.8

- 1. _____
- 2. _____
- 3. _____
- 4. _____
- 5. _____
- 6. _____
- 7. _____
- 8. _____
- 9. _____

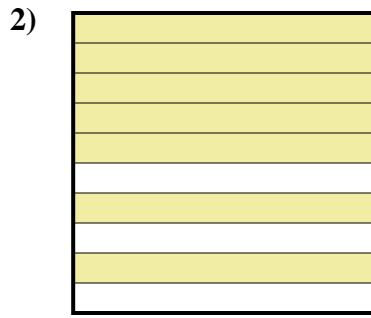


Determina cuál letra mejor representa la cantidad sombreada del total.

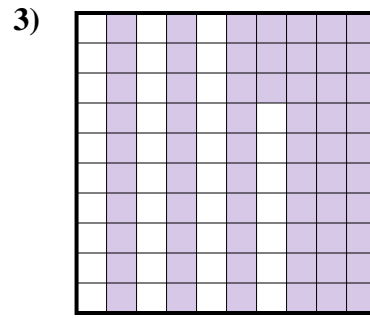
Respuestas



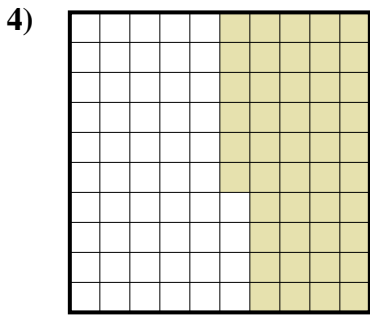
- A. 0.03
- B. 0.3
- C. 3
- D. 30



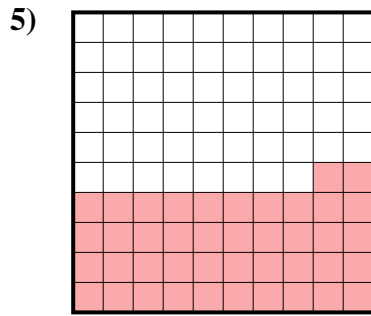
- A. 0.7
- B. 70
- C. 700
- D. 0.07



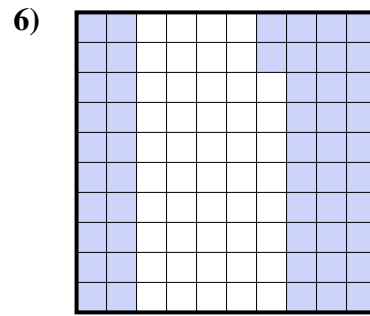
- A. 63
- B. 6.3
- C. 0.63
- D. 0.063



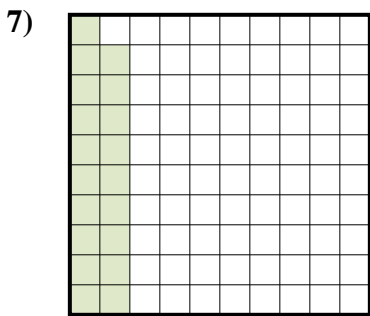
- A. 4.6
- B. 0.046
- C. 46
- D. 0.46



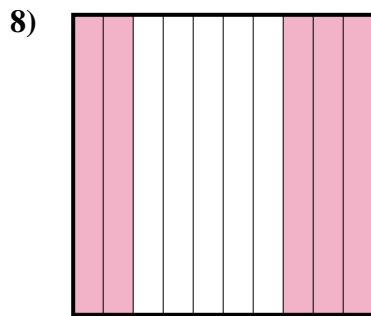
- A. 0.42
- B. 420
- C. 4.2
- D. 0.042




- A. 0.52
- B. 52
- C. 520
- D. 0.052



- A. 190
- B. 0.19
- C. 1.9
- D. 0.019



- A. 0.05
- B. 0.5
- C. 500
- D. 50



- A. 80
- B. 800
- C. 0.08
- D. 0.8

- 1. **B**
- 2. **A**
- 3. **C**
- 4. **D**
- 5. **A**
- 6. **A**
- 7. **B**
- 8. **B**
- 9. **D**