



Iguala cada ecuación para responder y escribe la respuesta.


Ej) $\frac{1}{10} + \frac{1}{10} + \frac{1}{10} + \frac{1}{10} + \frac{1}{10} + \frac{1}{10} + \frac{1}{10}$



1) $\frac{1}{5} + \frac{1}{5}$



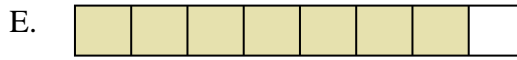
2) $\frac{1}{12} + \frac{1}{12} + \frac{1}{12} + \frac{1}{12} + \frac{1}{12}$



3) $\frac{1}{6} + \frac{1}{6} + \frac{1}{6}$



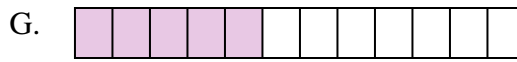
4) $\frac{1}{10} + \frac{1}{10} + \frac{1}{10}$



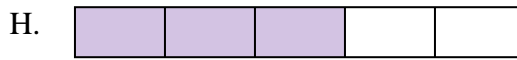
5) $\frac{1}{3} + \frac{1}{3}$



6) $\frac{1}{4} + \frac{1}{4} + \frac{1}{4}$



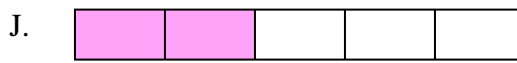
7) $\frac{1}{6} + \frac{1}{6}$




8) $\frac{1}{10} + \frac{1}{10} + \frac{1}{10} + \frac{1}{10} + \frac{1}{10}$



9) $\frac{1}{12} + \frac{1}{12} + \frac{1}{12} + \frac{1}{12} + \frac{1}{12} + \frac{1}{12} + \frac{1}{12}$



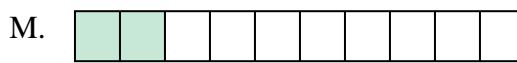
10) $\frac{1}{5} + \frac{1}{5} + \frac{1}{5}$




11) $\frac{1}{12} + \frac{1}{12} + \frac{1}{12} + \frac{1}{12} + \frac{1}{12} + \frac{1}{12}$




12) $\frac{1}{6} + \frac{1}{6} + \frac{1}{6} + \frac{1}{6} + \frac{1}{6}$




13) $\frac{1}{10} + \frac{1}{10}$



14) $\frac{1}{6} + \frac{1}{6} + \frac{1}{6} + \frac{1}{6}$



15) $\frac{1}{8} + \frac{1}{8} + \frac{1}{8} + \frac{1}{8} + \frac{1}{8} + \frac{1}{8} + \frac{1}{8}$

**Respuestas**Ej. $0 \frac{7}{10}$

1. _____

2. _____

3. _____

4. _____

5. _____

6. _____

7. _____

8. _____

9. _____

10. _____

11. _____

12. _____

13. _____

14. _____

15. _____



Iguala cada ecuación para responder y escribe la respuesta.


Ej) $\frac{1}{10} + \frac{1}{10} + \frac{1}{10} + \frac{1}{10} + \frac{1}{10} + \frac{1}{10} + \frac{1}{10}$



1) $\frac{1}{5} + \frac{1}{5}$




2) $\frac{1}{12} + \frac{1}{12} + \frac{1}{12} + \frac{1}{12} + \frac{1}{12}$



3) $\frac{1}{6} + \frac{1}{6} + \frac{1}{6}$



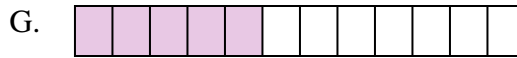
4) $\frac{1}{10} + \frac{1}{10} + \frac{1}{10}$




5) $\frac{1}{3} + \frac{1}{3}$



6) $\frac{1}{4} + \frac{1}{4} + \frac{1}{4}$



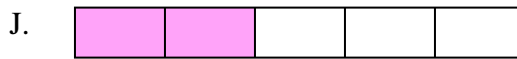
7) $\frac{1}{6} + \frac{1}{6}$




8) $\frac{1}{10} + \frac{1}{10} + \frac{1}{10} + \frac{1}{10} + \frac{1}{10}$



9) $\frac{1}{12} + \frac{1}{12} + \frac{1}{12} + \frac{1}{12} + \frac{1}{12} + \frac{1}{12} + \frac{1}{12}$




10) $\frac{1}{5} + \frac{1}{5} + \frac{1}{5}$




11) $\frac{1}{12} + \frac{1}{12} + \frac{1}{12} + \frac{1}{12} + \frac{1}{12} + \frac{1}{12}$




12) $\frac{1}{6} + \frac{1}{6} + \frac{1}{6} + \frac{1}{6} + \frac{1}{6}$



13) $\frac{1}{10} + \frac{1}{10}$



14) $\frac{1}{6} + \frac{1}{6} + \frac{1}{6} + \frac{1}{6}$



15) $\frac{1}{8} + \frac{1}{8} + \frac{1}{8} + \frac{1}{8} + \frac{1}{8} + \frac{1}{8} + \frac{1}{8}$

**Respuestas**

Ej. $\frac{7}{10}$

1. $\frac{2}{5}$

2. $\frac{5}{12}$

3. $\frac{3}{6}$

4. $\frac{3}{10}$

5. $\frac{2}{3}$

6. $\frac{3}{4}$

7. $\frac{2}{6}$

8. $\frac{5}{10}$

9. $\frac{7}{12}$

10. $\frac{3}{5}$

11. $\frac{6}{12}$

12. $\frac{5}{6}$

13. $\frac{2}{10}$

14. $\frac{4}{6}$

15. $\frac{7}{8}$