


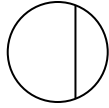


Determina cuál opción(es) muestran la forma dividida para que cada pieza tenga un área igual. Si ninguna, escriba 'ninguna'.

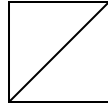
1) a.



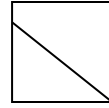
b.



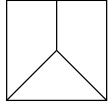
c.



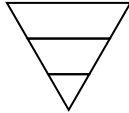
d.



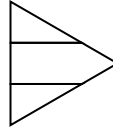
2) a.



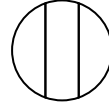
b.



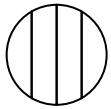
c.




d.



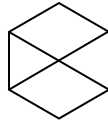
3) a.



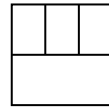
b.



c.



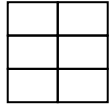
d.



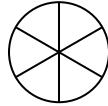
4) a.



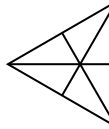
b.




c.



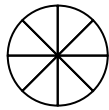
d.



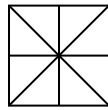
5) a.



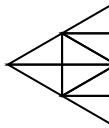
b.



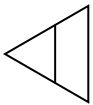
c.



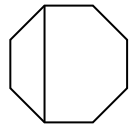
d.



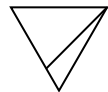
6) a.



b.



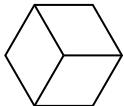
c.



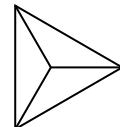
d.



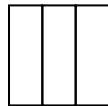
7) a.



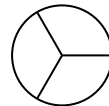
b.



c.



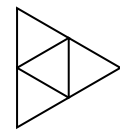
d.



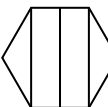
8) a.



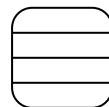
b.



c.



d.



Respuestas

1. _____

2. _____

3. _____

4. _____

5. _____

6. _____


7. _____

8. _____

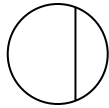


Determina cuál opción(es) muestran la forma dividida para que cada pieza tenga un área igual. Si ninguna, escriba 'ninguna'.

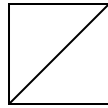
1) a.



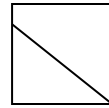
b.



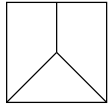
c.



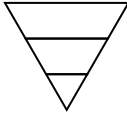
d.



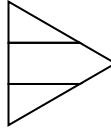
2) a.



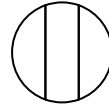
b.



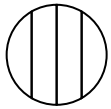
c.




d.



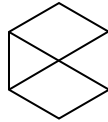
3) a.



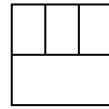
b.



c.



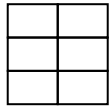
d.



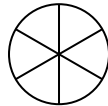
4) a.



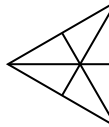
b.



c.



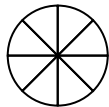
d.



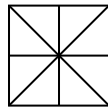
5) a.



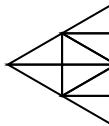
b.



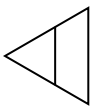
c.



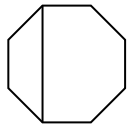
d.



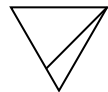
6) a.




b.



c.



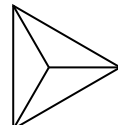
d.



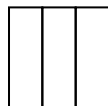
7) a.



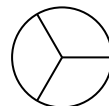
b.



c.



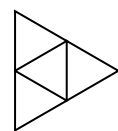
d.



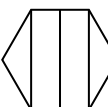
8) a.



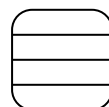
b.



c.



d.



Respuestas

1. **C**

2. **ninguna**

3. **ninguna**

4. **A,B,C,D**

5. **A,B,C,D**

6. **ninguna**

7. **A,B,C,D**

8. **B**