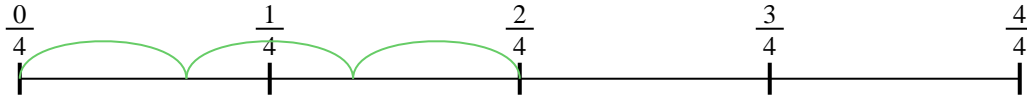




Usa la recta numérica para resolver cada problema. El primero ya está marcado como ejemplo.

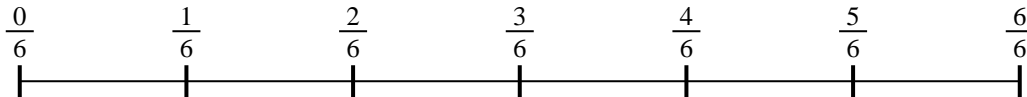
Respuestas

1) $\frac{2}{4} \div 3$



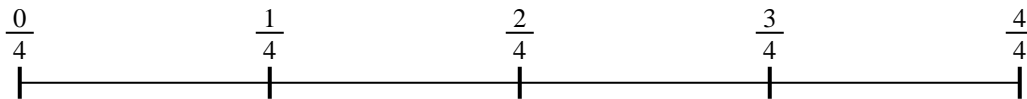
1. _____

2) $\frac{3}{6} \div 2$



2. _____

3) $\frac{3}{4} \div 4$



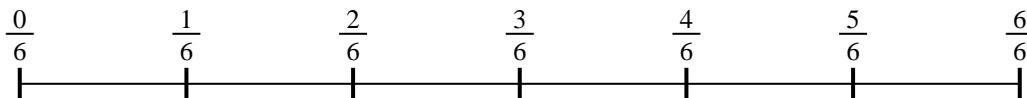
3. _____

4) $\frac{5}{7} \div 2$



4. _____

5) $\frac{2}{6} \div 2$




5. _____

6) $\frac{4}{5} \div 6$




6. _____

7) $\frac{2}{3} \div 6$



7. _____

8) $\frac{6}{7} \div 6$



8. _____

9) $\frac{3}{5} \div 3$

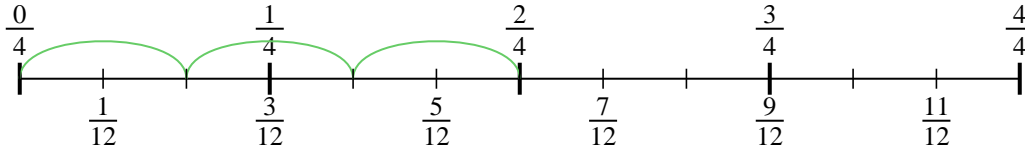


9. _____

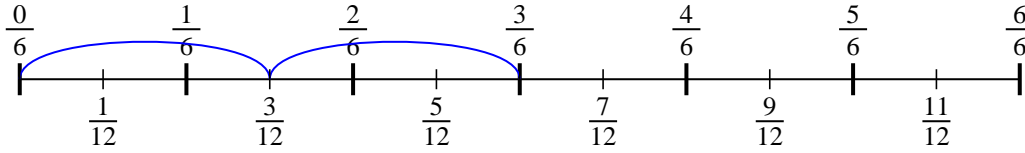


Usa la recta numérica para resolver cada problema. El primero ya está marcado como ejemplo.

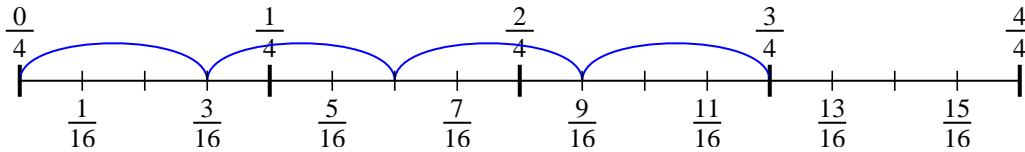
1) $\frac{2}{4} \div 3$



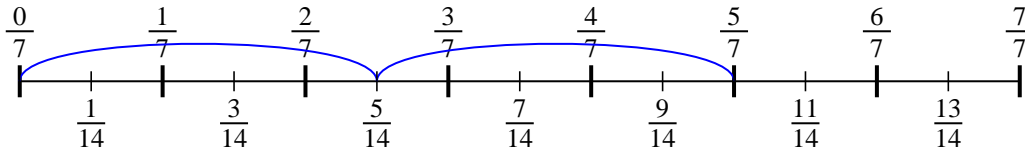
2) $\frac{3}{6} \div 2$



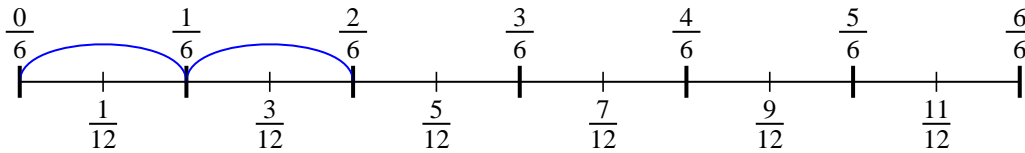
3) $\frac{3}{4} \div 4$



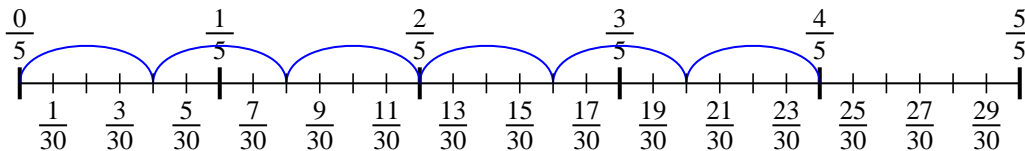
4) $\frac{5}{7} \div 2$



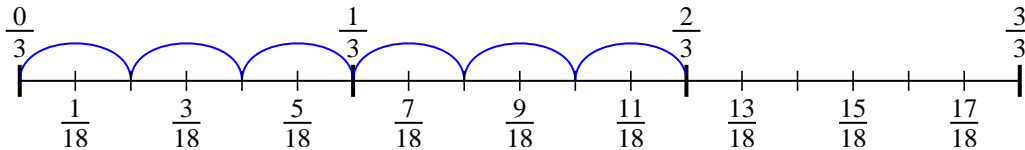
5) $\frac{2}{6} \div 2$



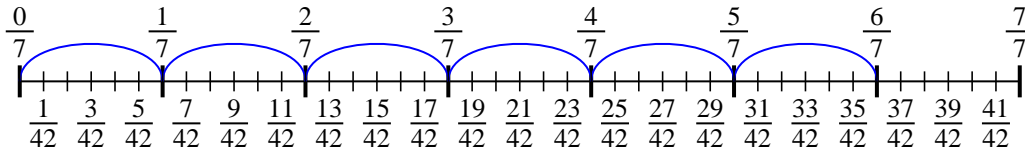
6) $\frac{4}{5} \div 6$



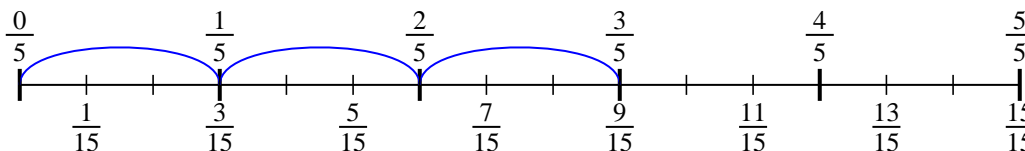
7) $\frac{2}{3} \div 6$



8) $\frac{6}{7} \div 6$



9) $\frac{3}{5} \div 3$

**Respuestas**

1. $\frac{2}{12}$

2. $\frac{3}{12}$

3. $\frac{3}{16}$

4. $\frac{5}{14}$

5. $\frac{2}{12}$

6. $\frac{4}{30}$

7. $\frac{2}{18}$

8. $\frac{6}{42}$

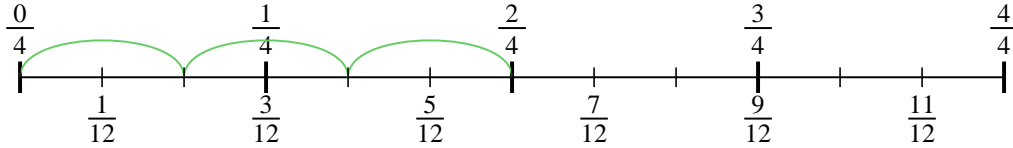
9. $\frac{3}{15}$



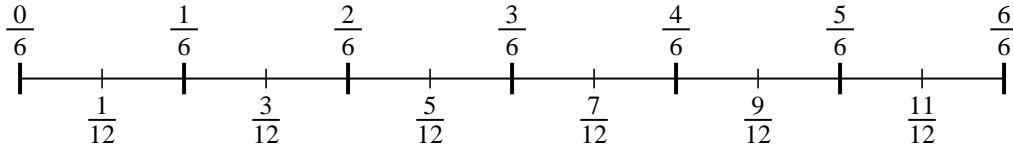
Usa la recta numérica para resolver cada problema. El primero ya está marcado como ejemplo.

Respuestas

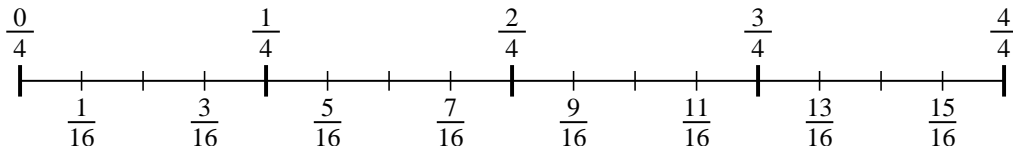
1) $\frac{2}{4} \div 3$



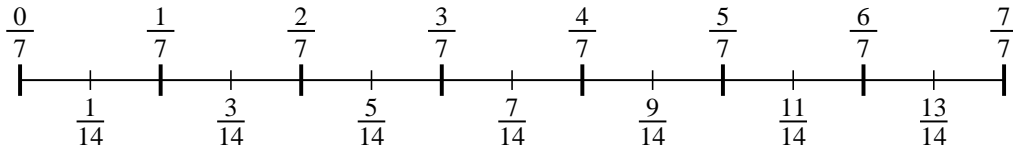
2) $\frac{3}{6} \div 2$



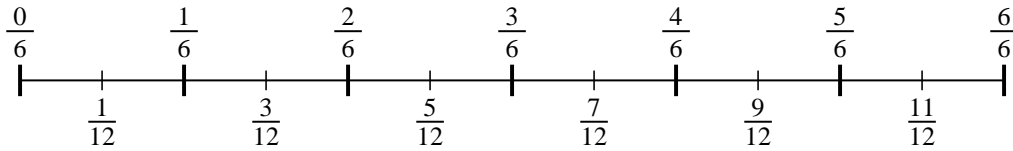
3) $\frac{3}{4} \div 4$



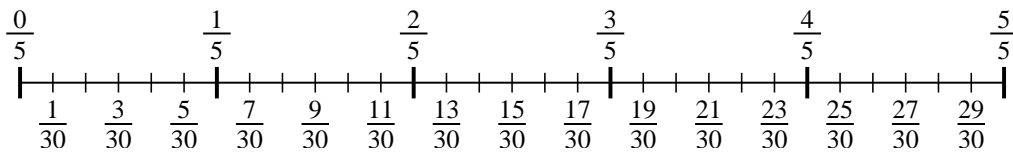
4) $\frac{5}{7} \div 2$



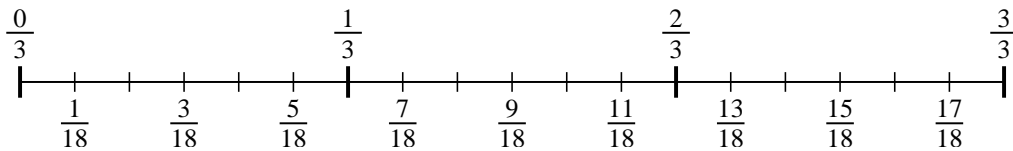
5) $\frac{2}{6} \div 2$



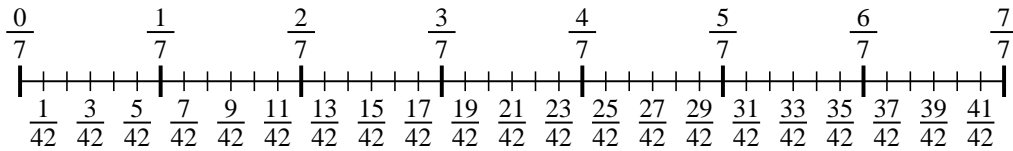
6) $\frac{4}{5} \div 6$



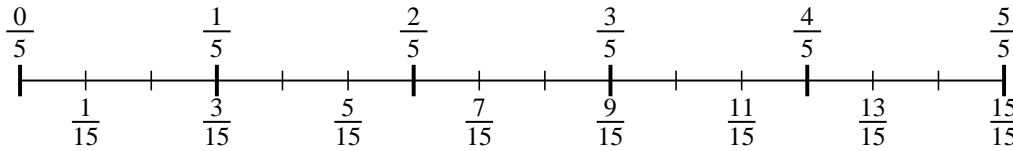
7) $\frac{2}{3} \div 6$



8) $\frac{6}{7} \div 6$



9) $\frac{3}{5} \div 3$



1. _____
2. _____
3. _____
4. _____
5. _____
6. _____
7. _____
8. _____
9. _____