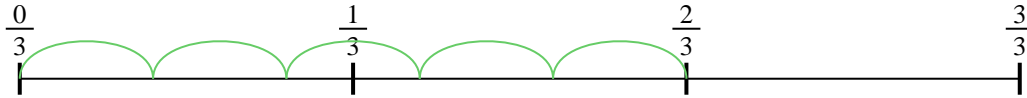




Usa la recta numérica para resolver cada problema. El primero ya está marcado como ejemplo.

Respuestas

1) $\frac{2}{3} \div 5$




1. _____

2) $\frac{5}{7} \div 2$



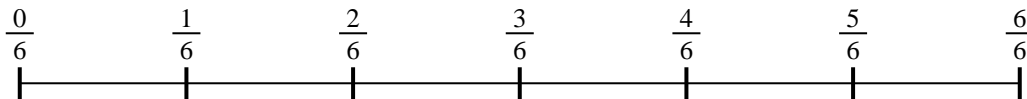
2. _____

3) $\frac{6}{7} \div 2$




3. _____

4) $\frac{2}{6} \div 2$



4. _____

5) $\frac{3}{7} \div 4$



5. _____

6) $\frac{3}{7} \div 6$




6. _____

7) $\frac{3}{7} \div 5$



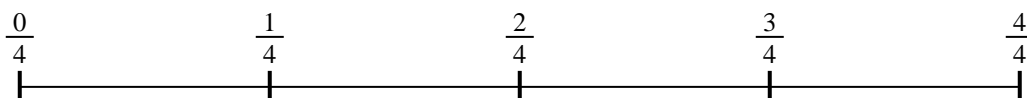
7. _____

8) $\frac{4}{5} \div 5$



8. _____

9) $\frac{2}{4} \div 3$

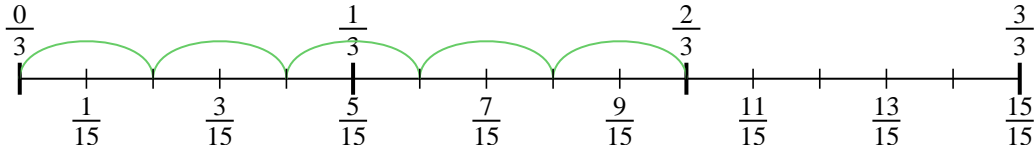


9. _____

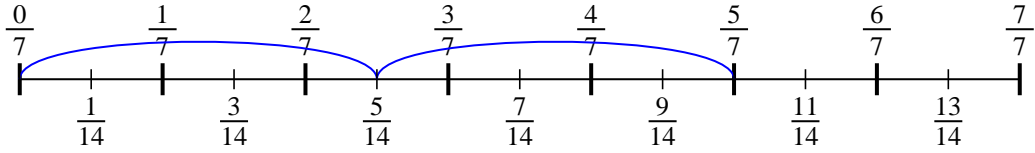


Usa la recta numérica para resolver cada problema. El primero ya está marcado como ejemplo.

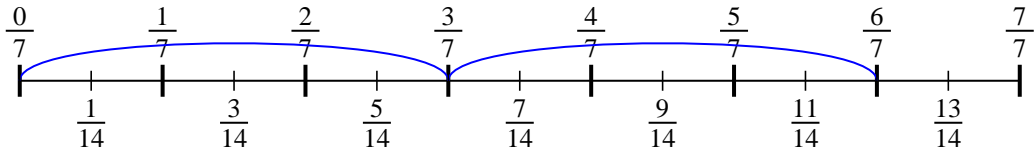
1) $\frac{2}{3} \div 5$



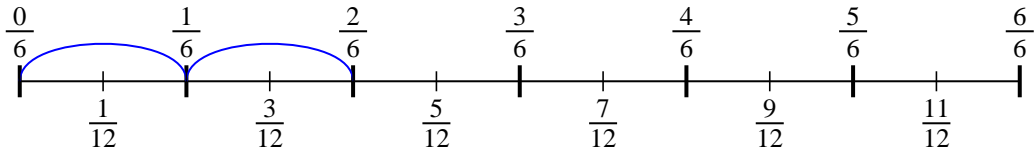
2) $\frac{5}{7} \div 2$



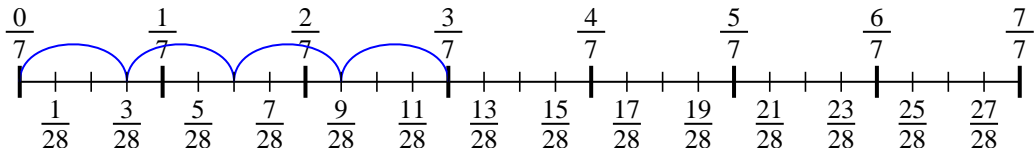
3) $\frac{6}{7} \div 2$



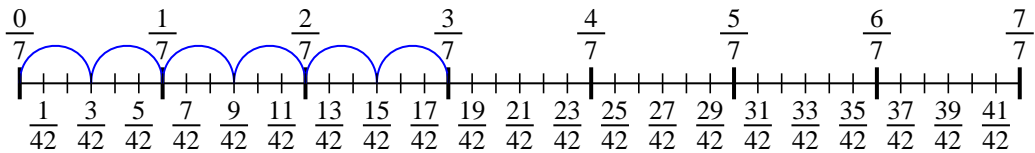
4) $\frac{2}{6} \div 2$



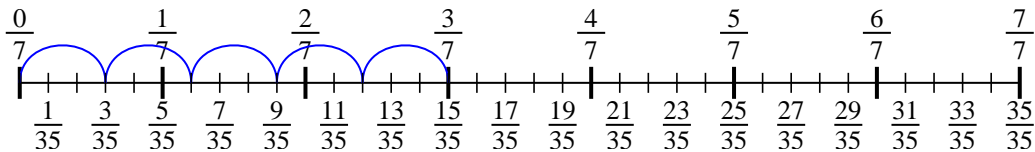
5) $\frac{3}{7} \div 4$



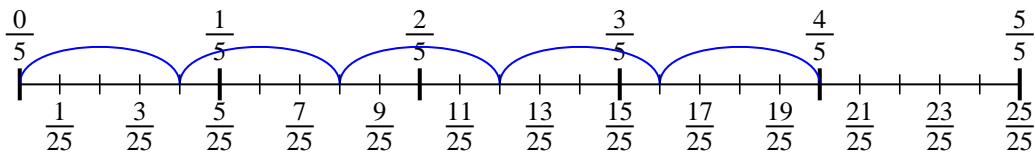
6) $\frac{3}{7} \div 6$



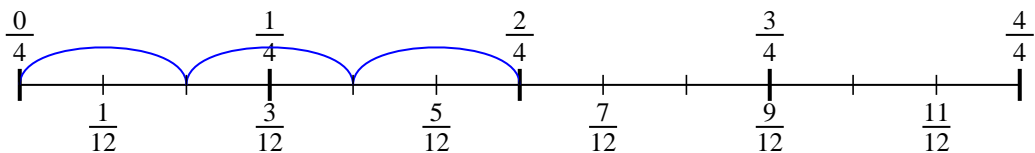
7) $\frac{3}{7} \div 5$



8) $\frac{4}{5} \div 5$



9) $\frac{2}{4} \div 3$



Respuestas

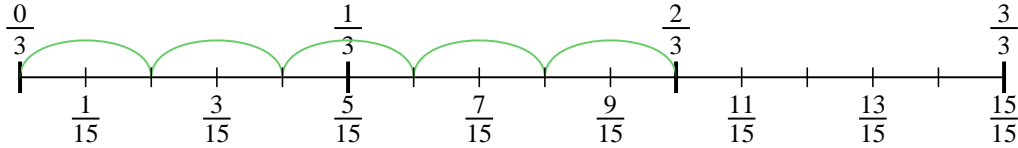
1. $\frac{2}{15}$
2. $\frac{5}{14}$
3. $\frac{6}{14}$
4. $\frac{2}{12}$
5. $\frac{3}{28}$
6. $\frac{3}{42}$
7. $\frac{3}{35}$
8. $\frac{4}{25}$
9. $\frac{2}{12}$



Usa la recta numérica para resolver cada problema. El primero ya está marcado como ejemplo.

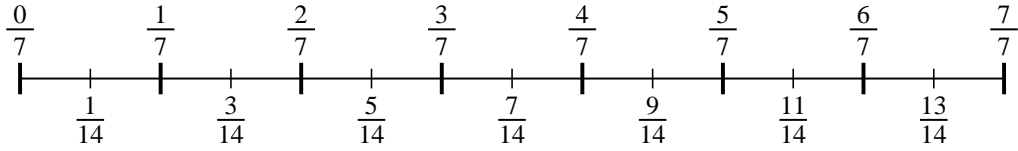
Respuestas

1) $\frac{2}{3} \div 5$



1. _____

2) $\frac{5}{7} \div 2$

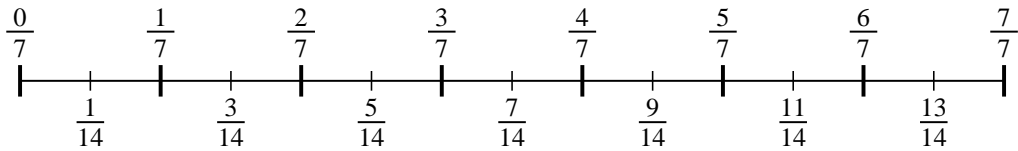


2. _____

3. _____

4. _____

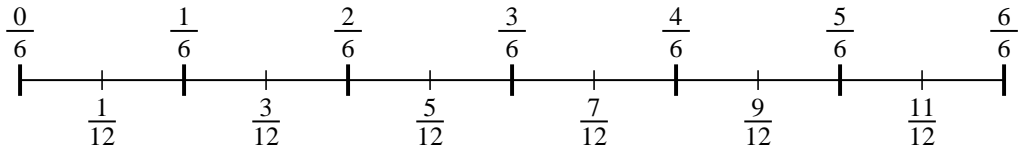
3) $\frac{6}{7} \div 2$



5. _____

6. _____

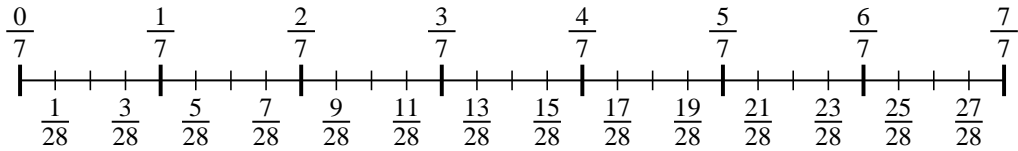
4) $\frac{2}{6} \div 2$



7. _____

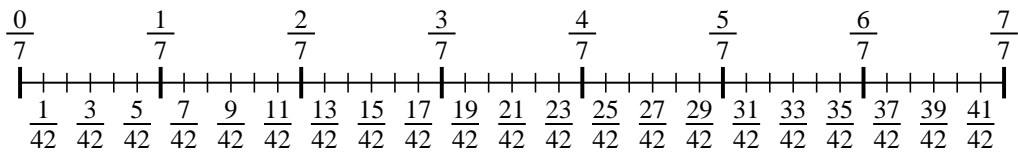
8. _____

5) $\frac{3}{7} \div 4$

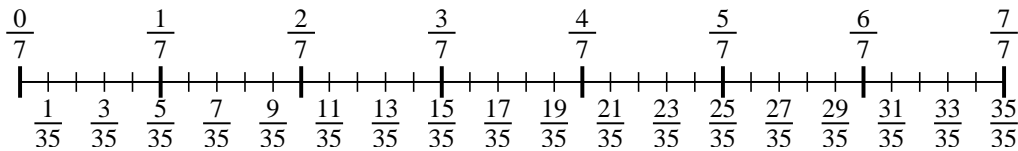


9. _____

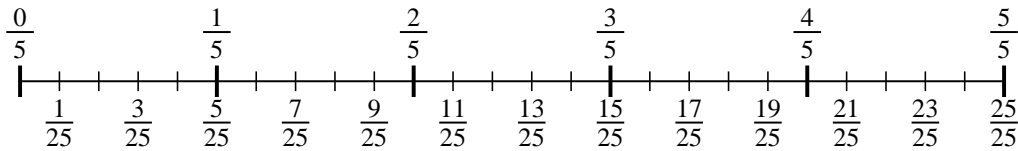
6) $\frac{3}{7} \div 6$



7) $\frac{3}{7} \div 5$



8) $\frac{4}{5} \div 5$



9) $\frac{2}{4} \div 3$

