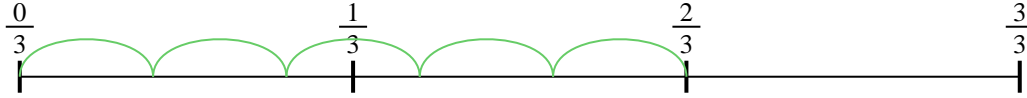




Usa la recta numérica para resolver cada problema. El primero ya está marcado como ejemplo.


**Respuestas**

1)  $\frac{2}{3} \div 5$



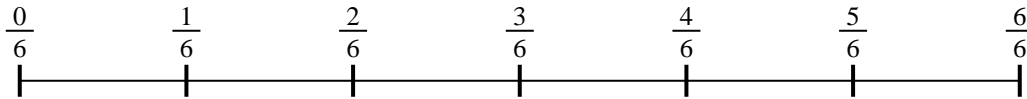
1. \_\_\_\_\_

2)  $\frac{2}{7} \div 6$



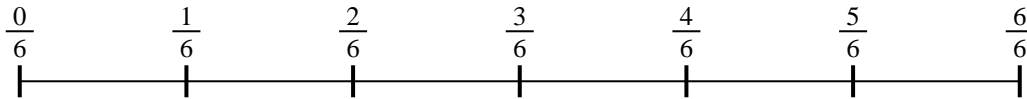
2. \_\_\_\_\_

3)  $\frac{5}{6} \div 6$



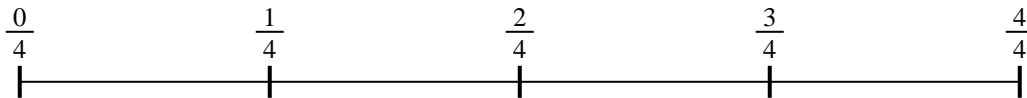
3. \_\_\_\_\_

4)  $\frac{3}{6} \div 4$



4. \_\_\_\_\_

5)  $\frac{3}{4} \div 6$



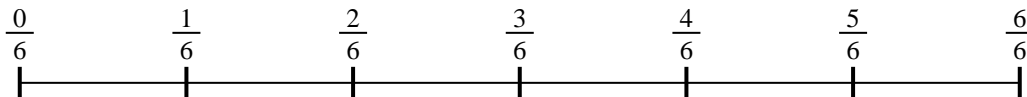
5. \_\_\_\_\_

6)  $\frac{2}{3} \div 3$



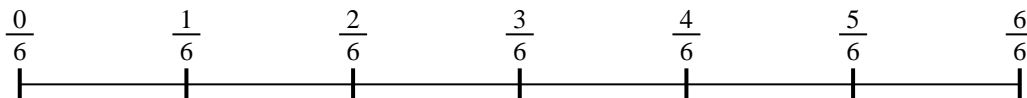
6. \_\_\_\_\_

7)  $\frac{5}{6} \div 4$



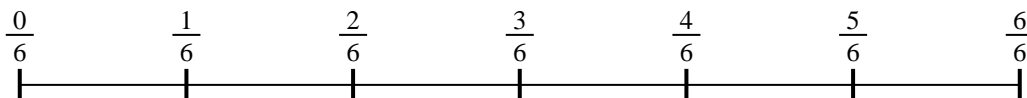
7. \_\_\_\_\_

8)  $\frac{2}{6} \div 4$



8. \_\_\_\_\_

9)  $\frac{4}{6} \div 5$

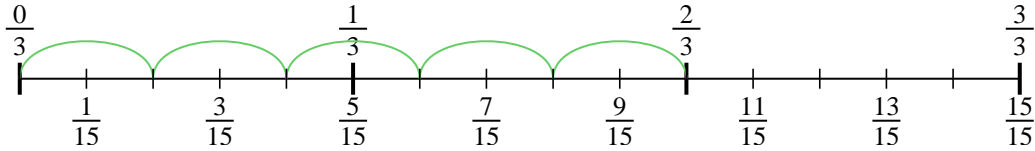


9. \_\_\_\_\_

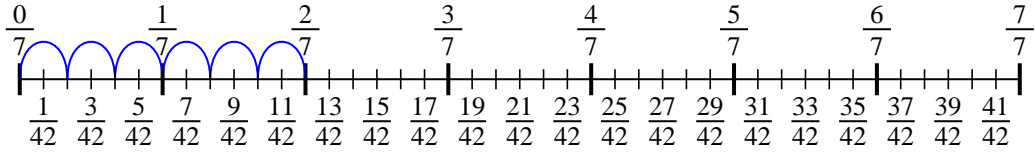


Usa la recta numérica para resolver cada problema. El primero ya está marcado como ejemplo.

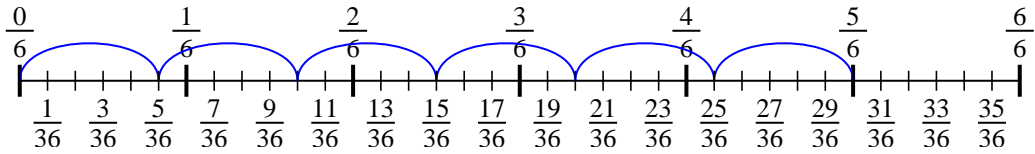
1)  $\frac{2}{3} \div 5$



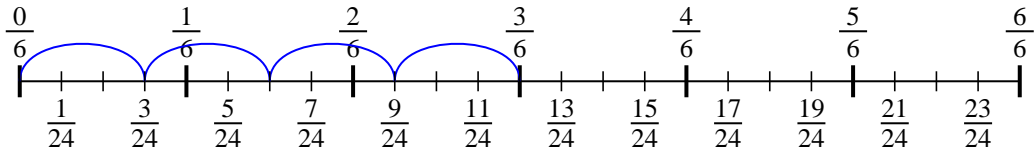
2)  $\frac{2}{7} \div 6$



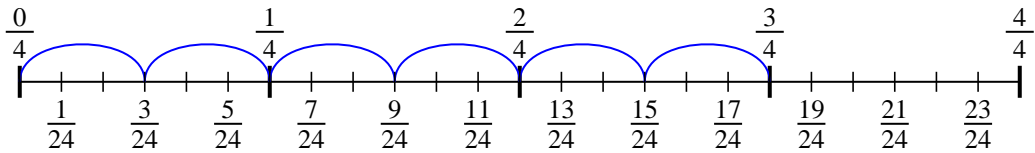
3)  $\frac{5}{6} \div 6$



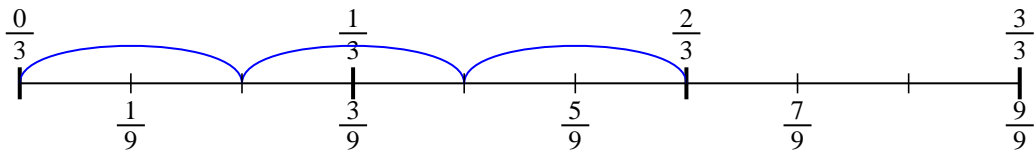
4)  $\frac{3}{6} \div 4$



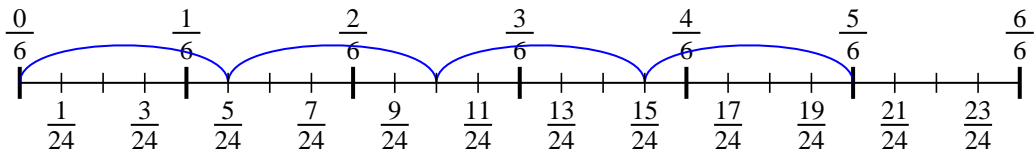
5)  $\frac{3}{4} \div 6$



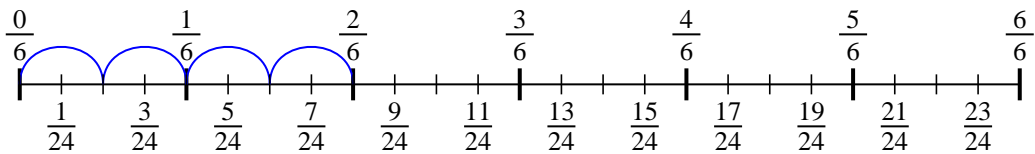
6)  $\frac{2}{3} \div 3$



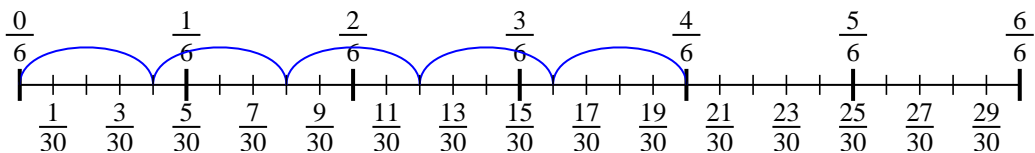
7)  $\frac{5}{6} \div 4$



8)  $\frac{2}{6} \div 4$



9)  $\frac{4}{6} \div 5$



**Respuestas**

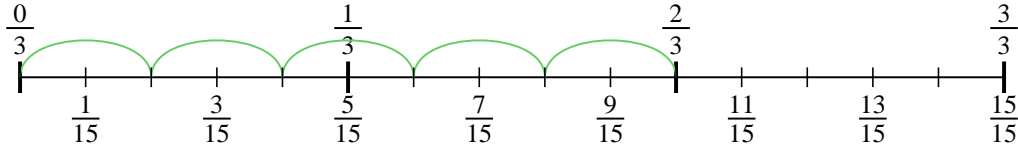
1.  $\frac{2}{15}$
2.  $\frac{2}{42}$
3.  $\frac{5}{36}$
4.  $\frac{3}{24}$
5.  $\frac{3}{24}$
6.  $\frac{2}{9}$
7.  $\frac{5}{24}$
8.  $\frac{2}{24}$
9.  $\frac{4}{30}$



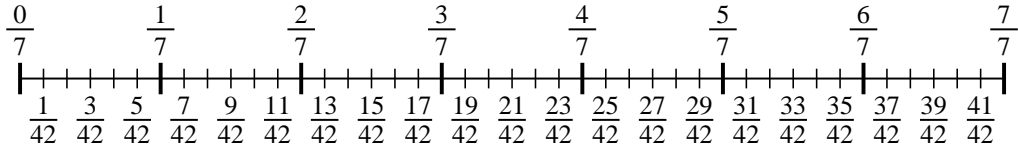
Usa la recta numérica para resolver cada problema. El primero ya está marcado como ejemplo.

**Respuestas**

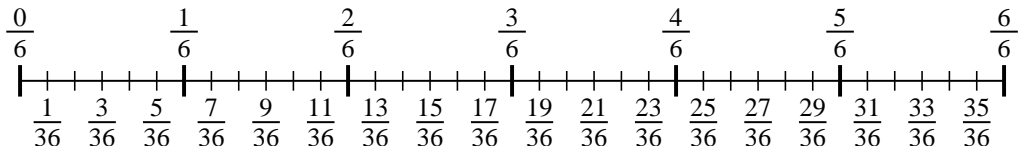
1)  $\frac{2}{3} \div 5$



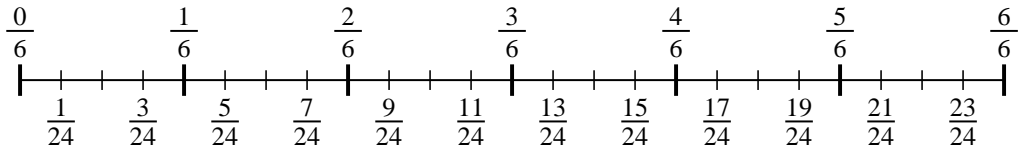
2)  $\frac{2}{7} \div 6$



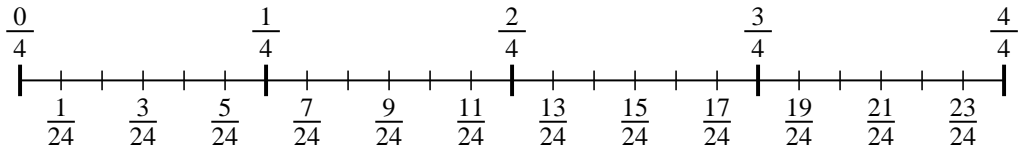
3)  $\frac{5}{6} \div 6$



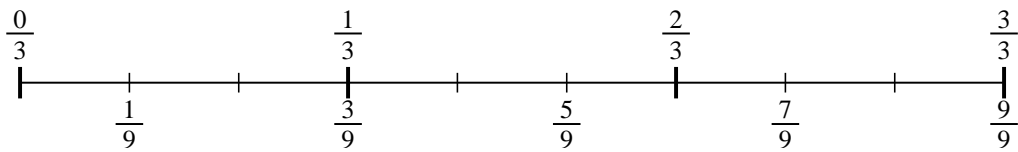
4)  $\frac{3}{6} \div 4$



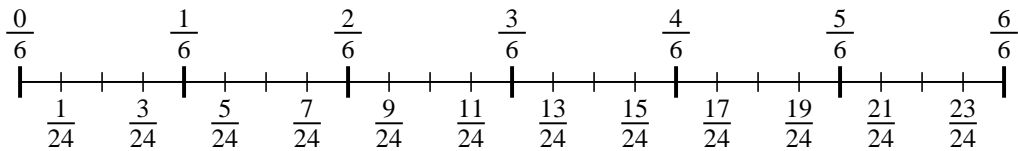
5)  $\frac{3}{4} \div 6$



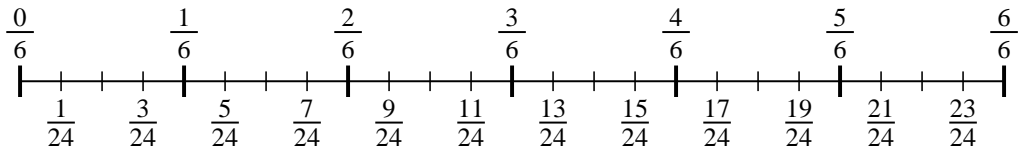
6)  $\frac{2}{3} \div 3$



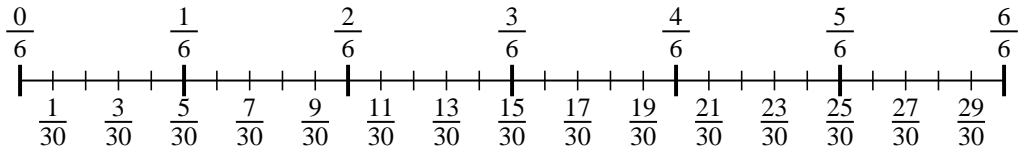
7)  $\frac{5}{6} \div 4$



8)  $\frac{2}{6} \div 4$



9)  $\frac{4}{6} \div 5$



1. \_\_\_\_\_
2. \_\_\_\_\_
3. \_\_\_\_\_
4. \_\_\_\_\_
5. \_\_\_\_\_
6. \_\_\_\_\_
7. \_\_\_\_\_
8. \_\_\_\_\_
9. \_\_\_\_\_