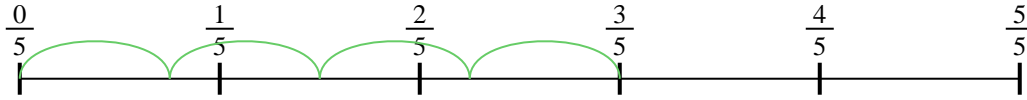





Usa la recta numérica para resolver cada problema. El primero ya está marcado como ejemplo.

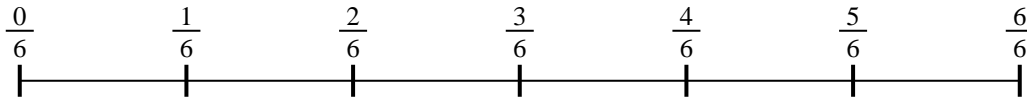
1) $\frac{3}{5} \div 4$




2) $\frac{2}{3} \div 5$



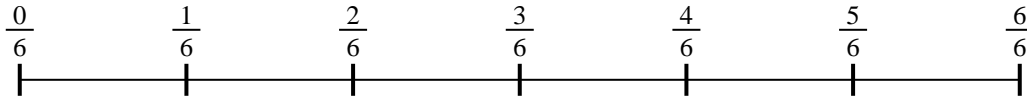
3) $\frac{4}{6} \div 5$



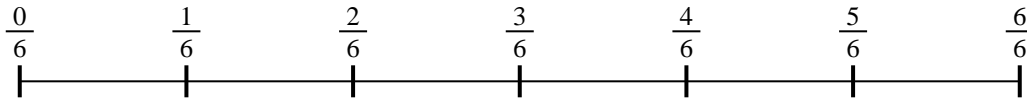
4) $\frac{2}{3} \div 4$



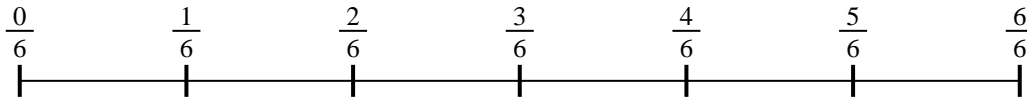
5) $\frac{3}{6} \div 5$



6) $\frac{4}{6} \div 3$




7) $\frac{4}{6} \div 6$



8) $\frac{2}{3} \div 3$



9) $\frac{2}{7} \div 6$

**Respuestas**

1. _____

2. _____

3. _____

4. _____

5. _____

6. _____

7. _____

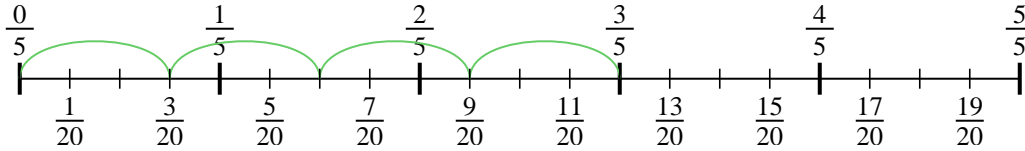
8. _____

9. _____

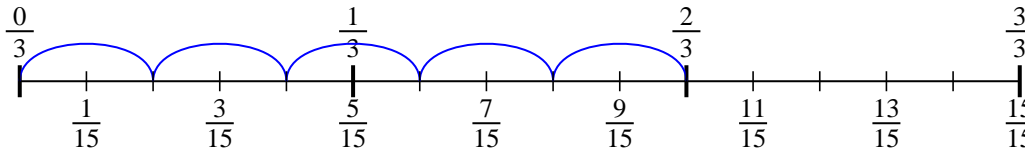


Usa la recta numérica para resolver cada problema. El primero ya está marcado como ejemplo.

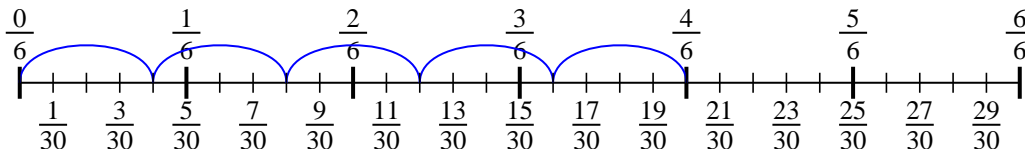
1) $\frac{3}{5} \div 4$



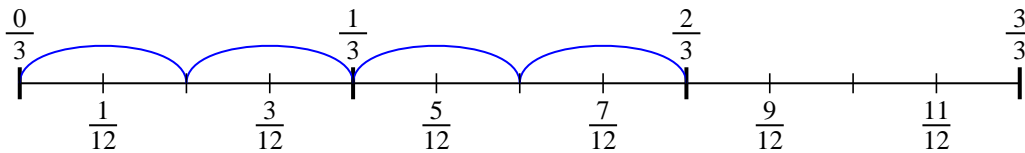
2) $\frac{2}{3} \div 5$



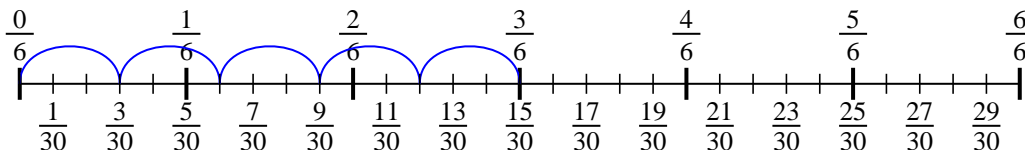
3) $\frac{4}{6} \div 5$



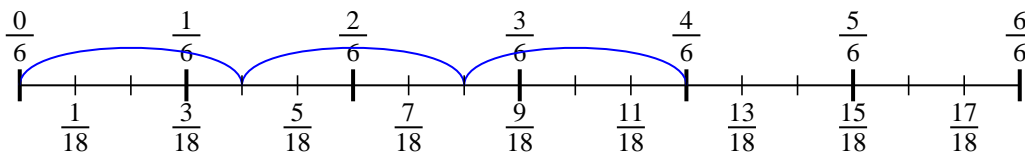
4) $\frac{2}{3} \div 4$



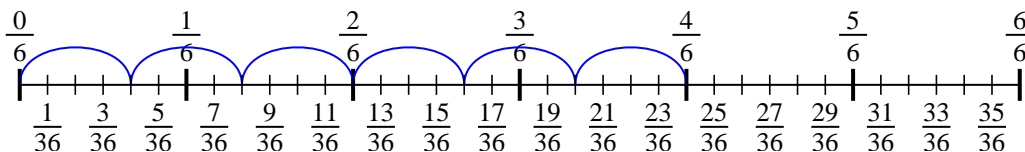
5) $\frac{3}{6} \div 5$



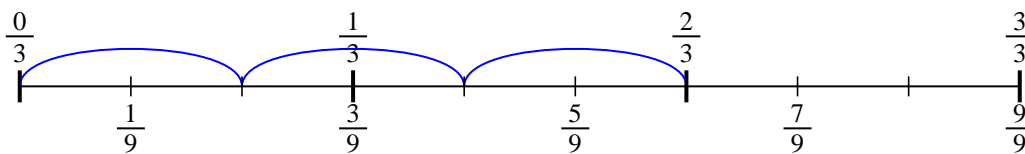
6) $\frac{4}{6} \div 3$



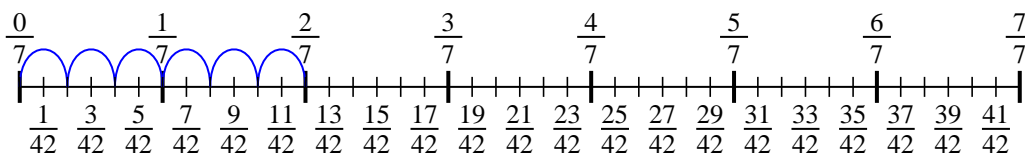
7) $\frac{4}{6} \div 6$



8) $\frac{2}{3} \div 3$



9) $\frac{2}{7} \div 6$

**Respuestas**

1. $\frac{3}{20}$

2. $\frac{2}{15}$

3. $\frac{4}{30}$

4. $\frac{2}{12}$

5. $\frac{3}{30}$

6. $\frac{4}{18}$

7. $\frac{4}{36}$

8. $\frac{2}{9}$

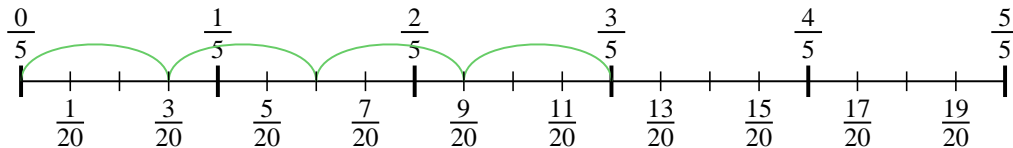
9. $\frac{2}{42}$



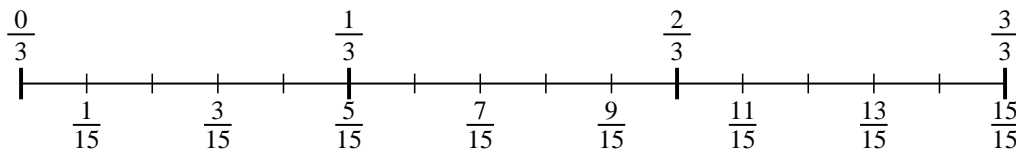
Usa la recta numérica para resolver cada problema. El primero ya está marcado como ejemplo.

Respuestas

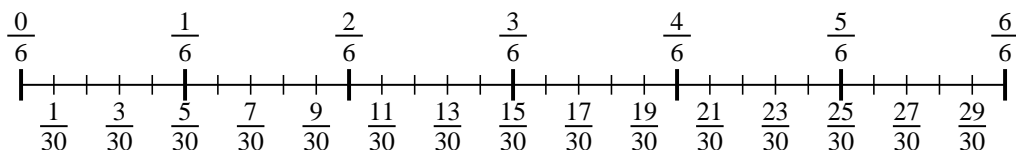
1) $\frac{3}{5} \div 4$



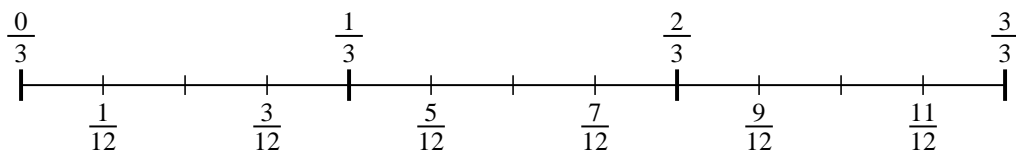
2) $\frac{2}{3} \div 5$



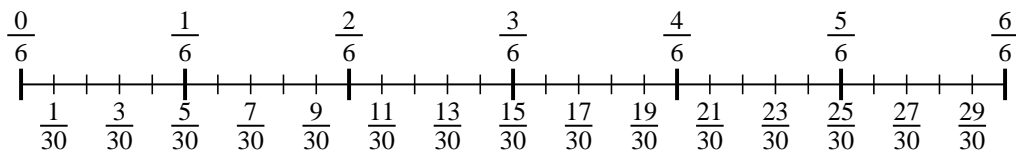
3) $\frac{4}{6} \div 5$



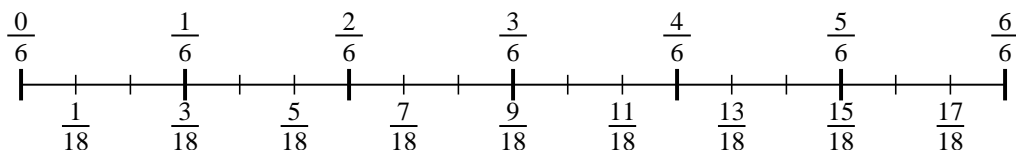
4) $\frac{2}{3} \div 4$



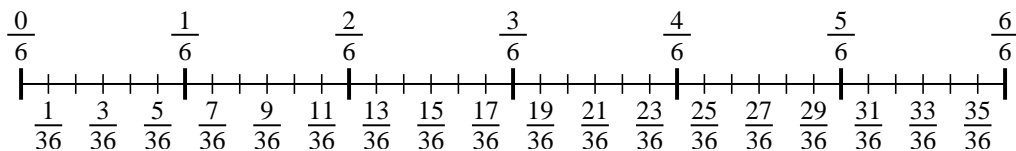
5) $\frac{3}{6} \div 5$



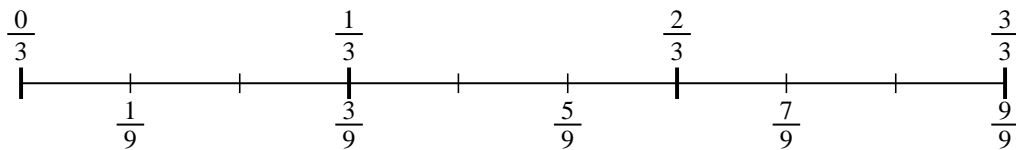
6) $\frac{4}{6} \div 3$



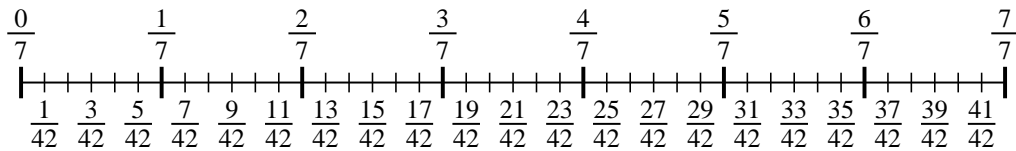
7) $\frac{4}{6} \div 6$



8) $\frac{2}{3} \div 3$



9) $\frac{2}{7} \div 6$



1. _____

2. _____

3. _____

4. _____

5. _____

6. _____

7. _____

8. _____

9. _____