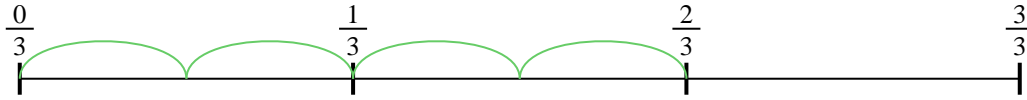





Usa la recta numérica para resolver cada problema. El primero ya está marcado como ejemplo.


1)  $\frac{2}{3} \div 4$



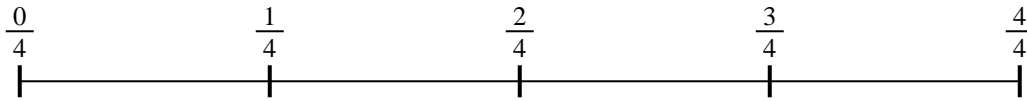
2)  $\frac{2}{3} \div 2$




3)  $\frac{2}{3} \div 3$



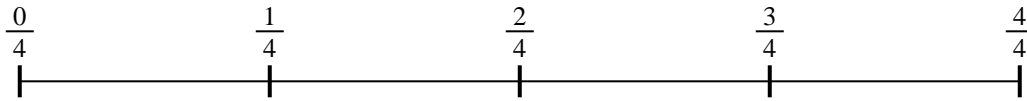
4)  $\frac{3}{4} \div 5$



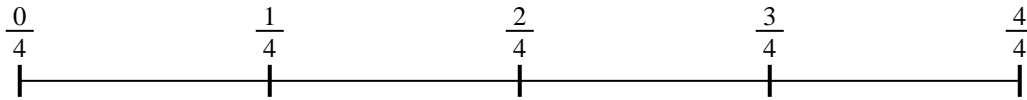
5)  $\frac{2}{5} \div 6$



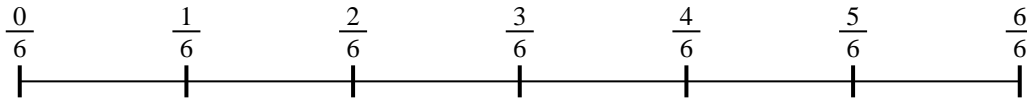
6)  $\frac{3}{4} \div 3$




7)  $\frac{2}{4} \div 5$



8)  $\frac{5}{6} \div 3$



9)  $\frac{4}{5} \div 2$

**Respuestas**

1. \_\_\_\_\_

2. \_\_\_\_\_

3. \_\_\_\_\_

4. \_\_\_\_\_

5. \_\_\_\_\_

6. \_\_\_\_\_

7. \_\_\_\_\_

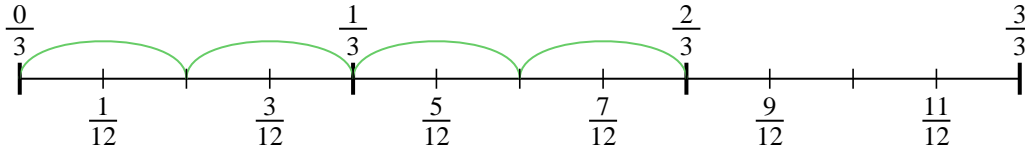
8. \_\_\_\_\_

9. \_\_\_\_\_

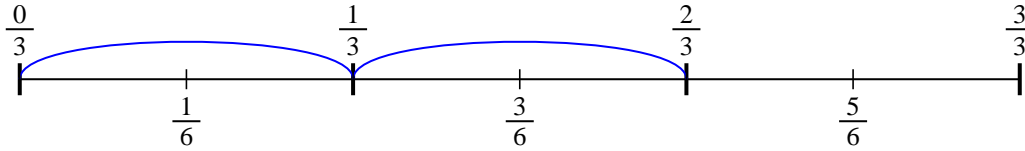


Usa la recta numérica para resolver cada problema. El primero ya está marcado como ejemplo.

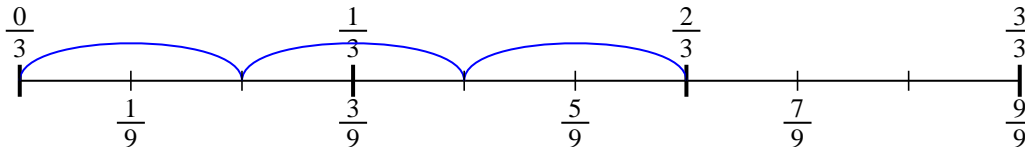
1)  $\frac{2}{3} \div 4$



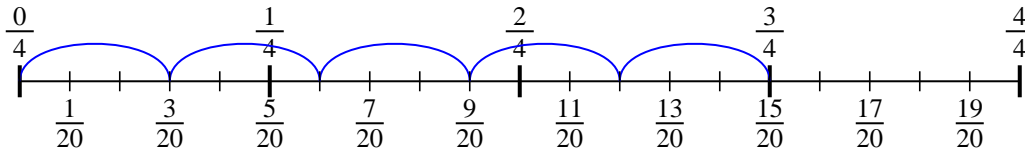
2)  $\frac{2}{3} \div 2$



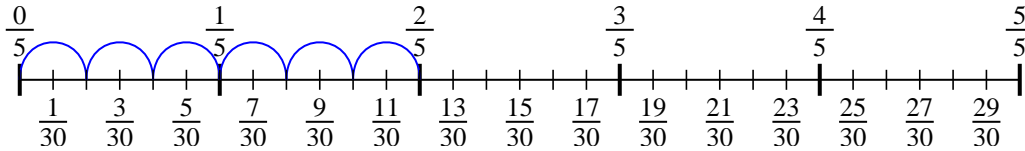
3)  $\frac{2}{3} \div 3$



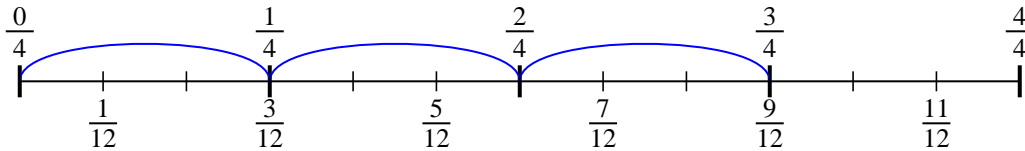
4)  $\frac{3}{4} \div 5$



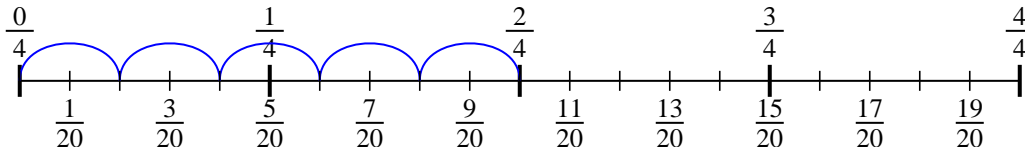
5)  $\frac{2}{5} \div 6$



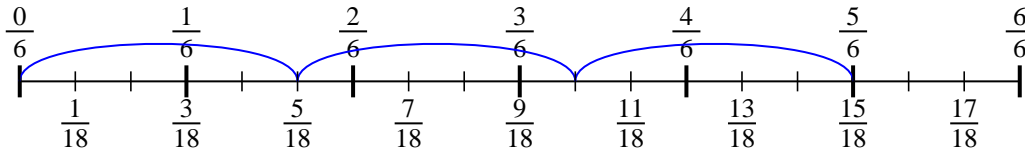
6)  $\frac{3}{4} \div 3$



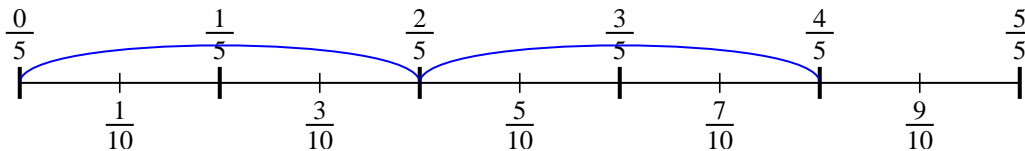
7)  $\frac{2}{4} \div 5$



8)  $\frac{5}{6} \div 3$



9)  $\frac{4}{5} \div 2$

**Respuestas**

1.  $\frac{2}{12}$

2.  $\frac{2}{6}$

3.  $\frac{2}{9}$

4.  $\frac{3}{20}$

5.  $\frac{2}{30}$

6.  $\frac{3}{12}$

7.  $\frac{2}{20}$

8.  $\frac{5}{18}$

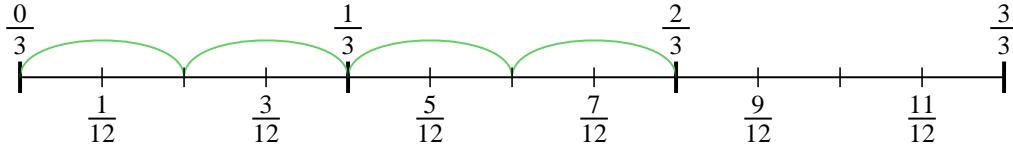
9.  $\frac{4}{10}$



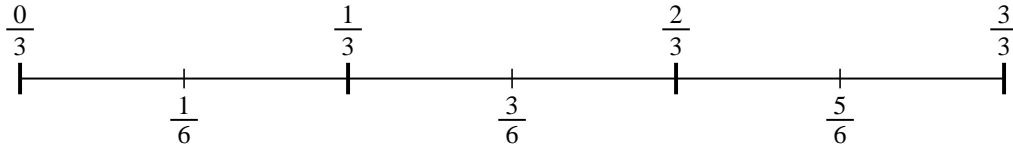
Usa la recta numérica para resolver cada problema. El primero ya está marcado como ejemplo.

**Respuestas**

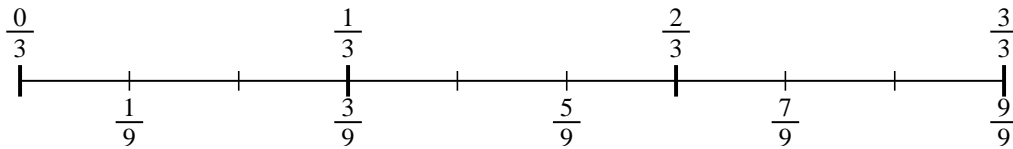
1)  $\frac{2}{3} \div 4$



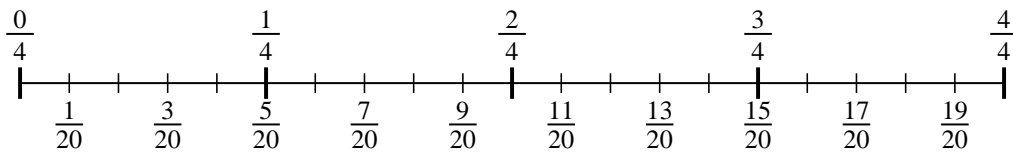
2)  $\frac{2}{3} \div 2$



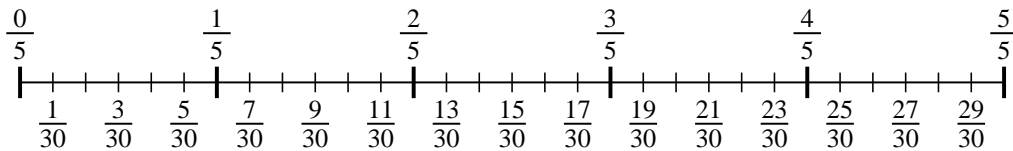
3)  $\frac{2}{3} \div 3$



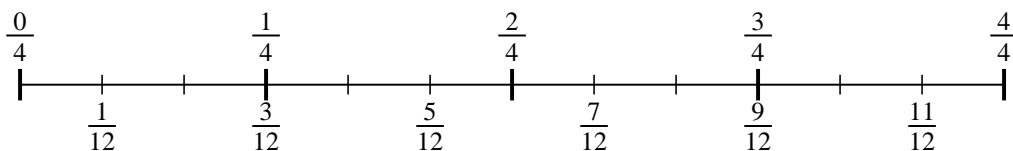
4)  $\frac{3}{4} \div 5$



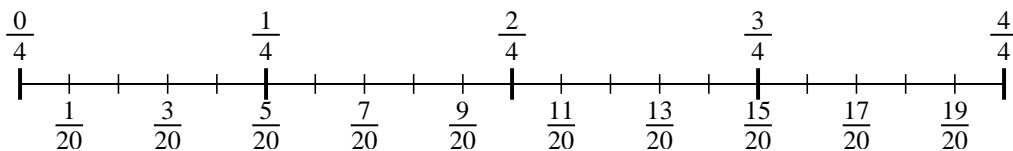
5)  $\frac{2}{5} \div 6$



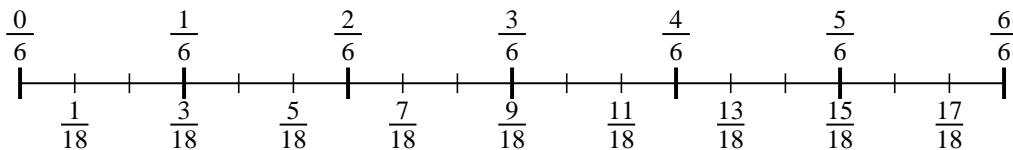
6)  $\frac{3}{4} \div 3$



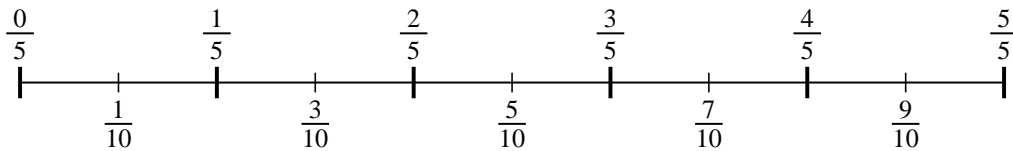
7)  $\frac{2}{4} \div 5$



8)  $\frac{5}{6} \div 3$



9)  $\frac{4}{5} \div 2$



1. \_\_\_\_\_
2. \_\_\_\_\_
3. \_\_\_\_\_
4. \_\_\_\_\_
5. \_\_\_\_\_
6. \_\_\_\_\_
7. \_\_\_\_\_
8. \_\_\_\_\_
9. \_\_\_\_\_