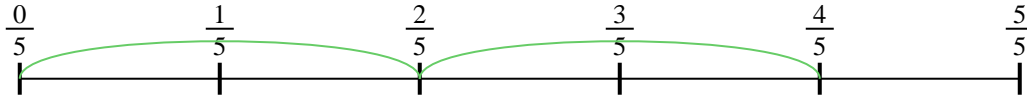




Usa la recta numérica para resolver cada problema. El primero ya está marcado como ejemplo.

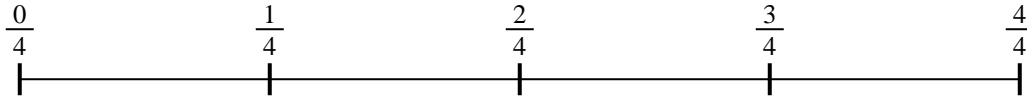
Respuestas

1) $\frac{4}{5} \div 2$




1. _____

2) $\frac{2}{4} \div 2$




2. _____

3) $\frac{3}{5} \div 2$




3. _____

4) $\frac{3}{7} \div 5$



4. _____

5) $\frac{5}{7} \div 3$




5. _____

6) $\frac{2}{3} \div 5$



6. _____

7) $\frac{2}{7} \div 3$



7. _____

8) $\frac{2}{3} \div 6$



8. _____

9) $\frac{4}{5} \div 4$

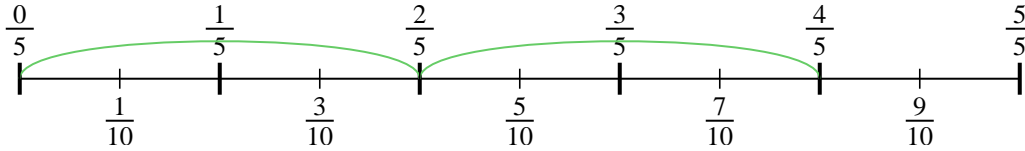


9. _____

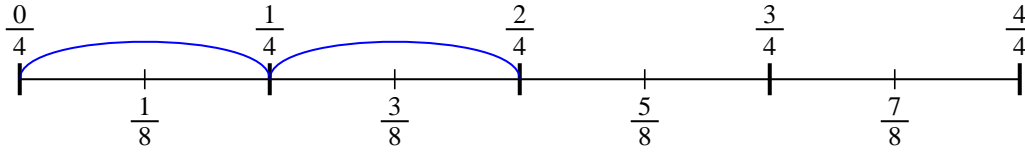


Usa la recta numérica para resolver cada problema. El primero ya está marcado como ejemplo.

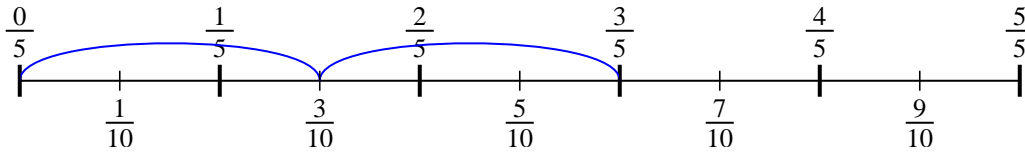
1) $\frac{4}{5} \div 2$



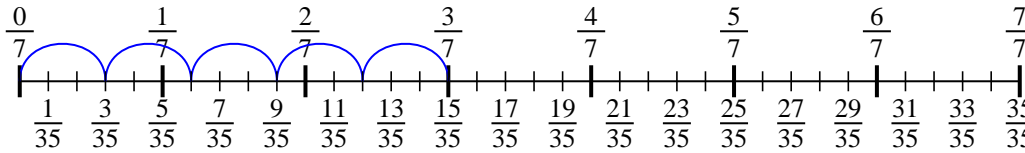
2) $\frac{2}{4} \div 2$



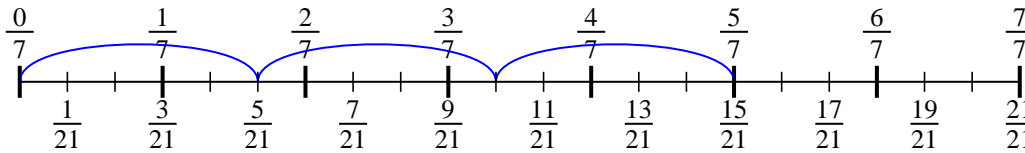
3) $\frac{3}{5} \div 2$



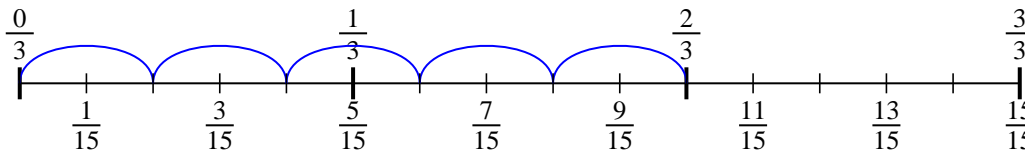
4) $\frac{3}{7} \div 5$



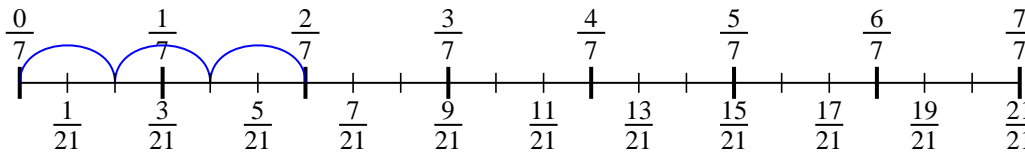
5) $\frac{5}{7} \div 3$



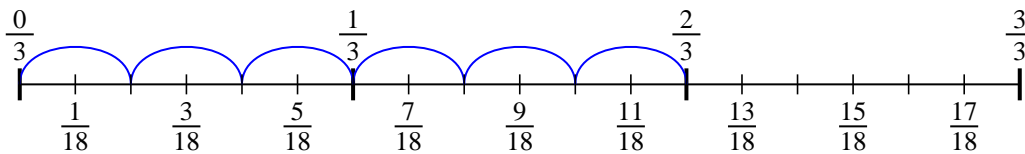
6) $\frac{2}{3} \div 5$



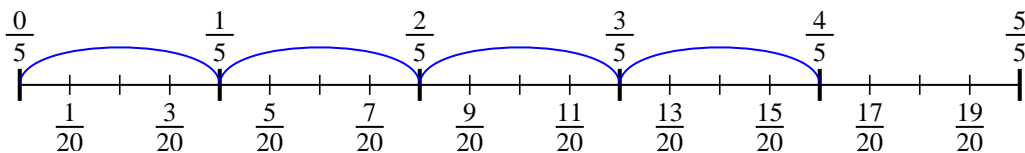
7) $\frac{2}{7} \div 3$



8) $\frac{2}{3} \div 6$



9) $\frac{4}{5} \div 4$



Respuestas

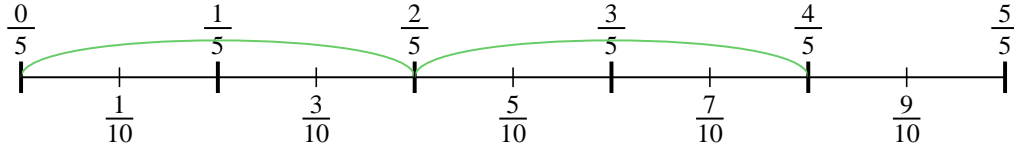
1. $\frac{4}{10}$
2. $\frac{2}{8}$
3. $\frac{3}{10}$
4. $\frac{3}{35}$
5. $\frac{5}{21}$
6. $\frac{2}{15}$
7. $\frac{2}{21}$
8. $\frac{2}{18}$
9. $\frac{4}{20}$



Usa la recta numérica para resolver cada problema. El primero ya está marcado como ejemplo.

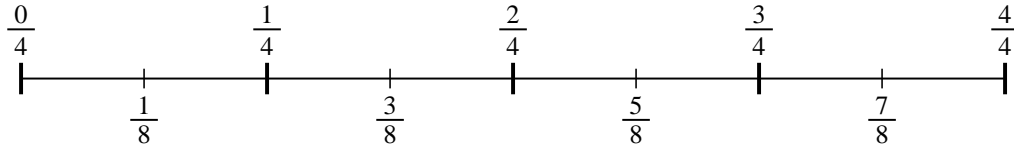
Respuestas

1) $\frac{4}{5} \div 2$



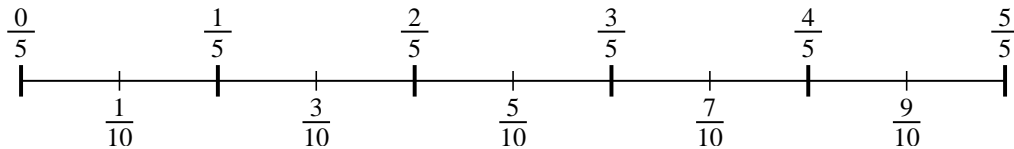
1. _____

2) $\frac{2}{4} \div 2$



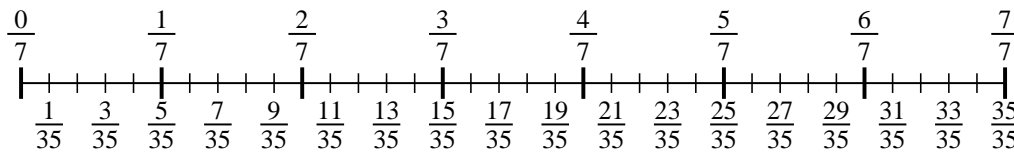
2. _____

3) $\frac{3}{5} \div 2$



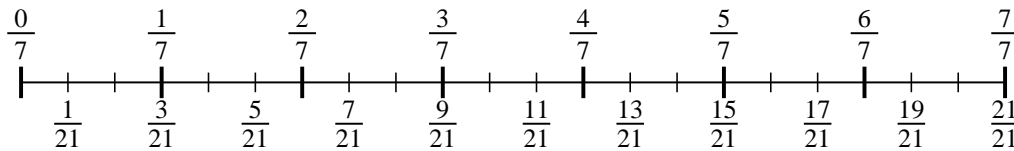
3. _____

4) $\frac{3}{7} \div 5$



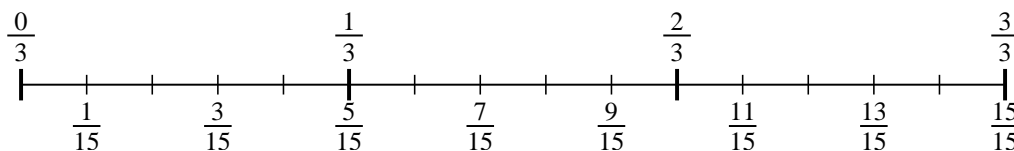
4. _____

5) $\frac{5}{7} \div 3$



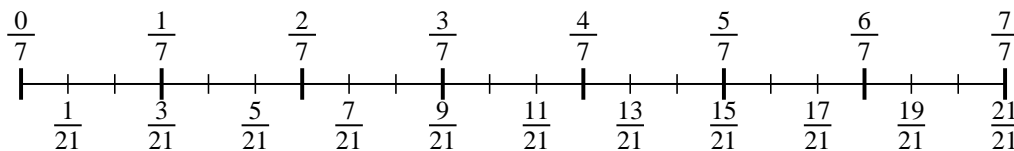
5. _____

6) $\frac{2}{3} \div 5$



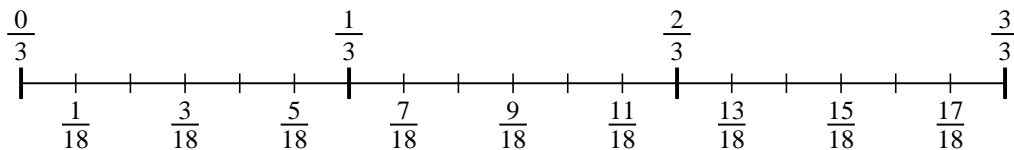
6. _____

7) $\frac{2}{7} \div 3$



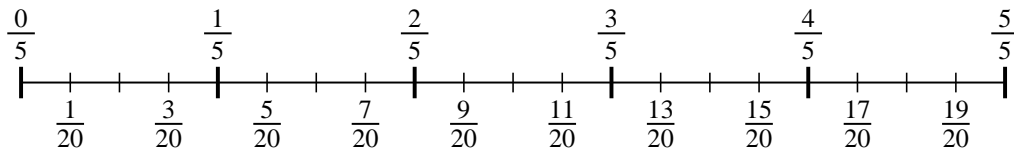
7. _____

8) $\frac{2}{3} \div 6$



8. _____

9) $\frac{4}{5} \div 4$



9. _____