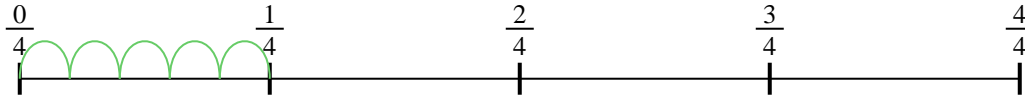




Usa la línea numérica para resolver cada problema. El primero ya está hecho como ejemplo

Respuestas

1) $\frac{1}{4} \div 5$




1. _____

2) $\frac{1}{5} \div 5$



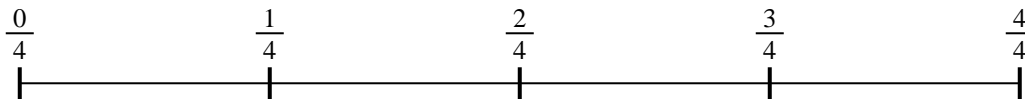
2. _____

3) $\frac{1}{7} \div 5$




3. _____

4) $\frac{1}{4} \div 4$



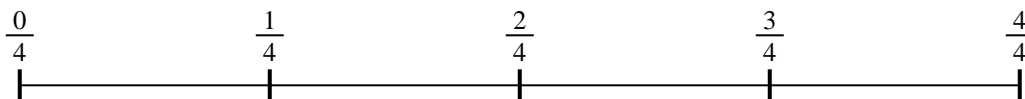
4. _____

5) $\frac{1}{3} \div 6$



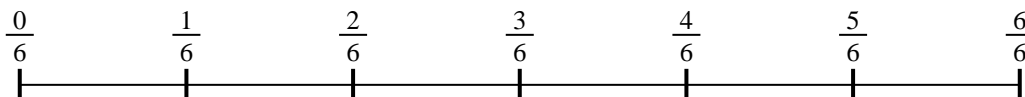
5. _____

6) $\frac{1}{4} \div 3$




6. _____

7) $\frac{1}{6} \div 5$



7. _____

8) $\frac{1}{7} \div 5$



8. _____

9) $\frac{1}{3} \div 2$



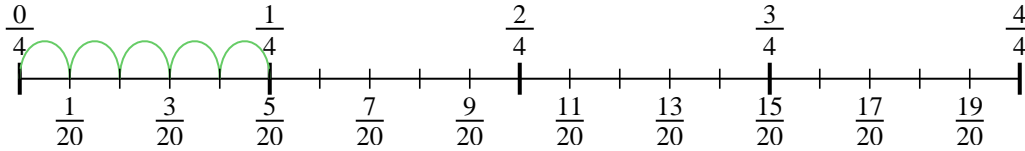
9. _____



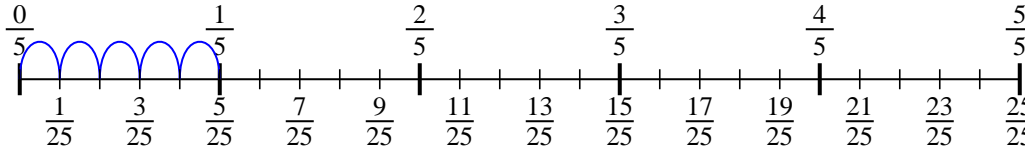
Usa la línea numérica para resolver cada problema. El primero ya está hecho como

ejemplo

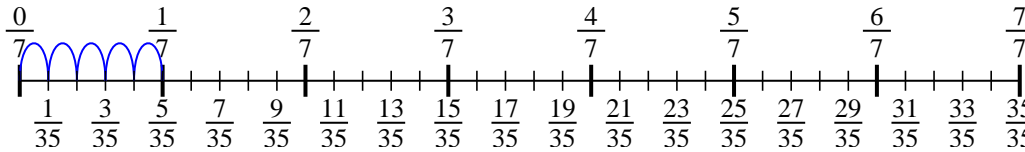
1) $\frac{1}{4} \div 5$



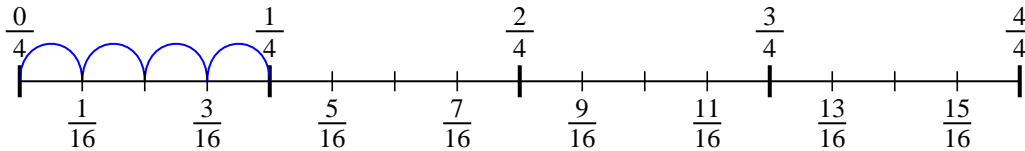
2) $\frac{1}{5} \div 5$



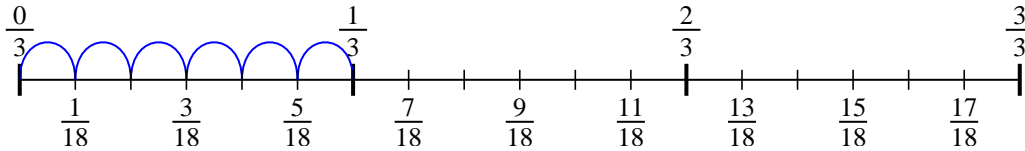
3) $\frac{1}{7} \div 5$



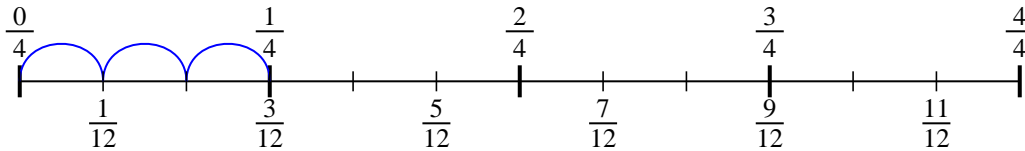
4) $\frac{1}{4} \div 4$



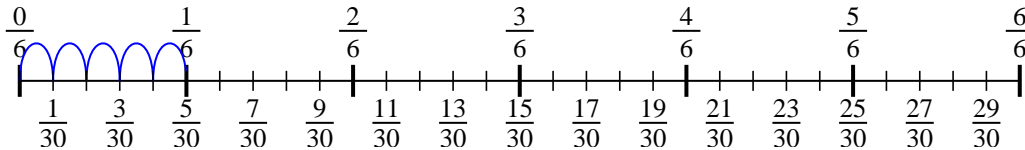
5) $\frac{1}{3} \div 6$



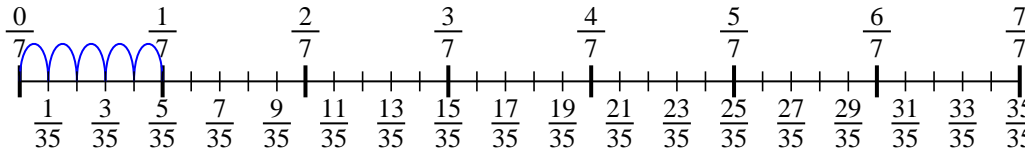
6) $\frac{1}{4} \div 3$



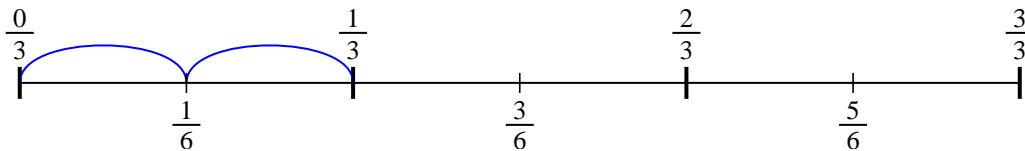
7) $\frac{1}{6} \div 5$



8) $\frac{1}{7} \div 5$



9) $\frac{1}{3} \div 2$



Respuestas

1. $\frac{1}{20}$

2. $\frac{1}{25}$

3. $\frac{1}{35}$

4. $\frac{1}{16}$

5. $\frac{1}{18}$

6. $\frac{1}{12}$

7. $\frac{1}{30}$

8. $\frac{1}{35}$

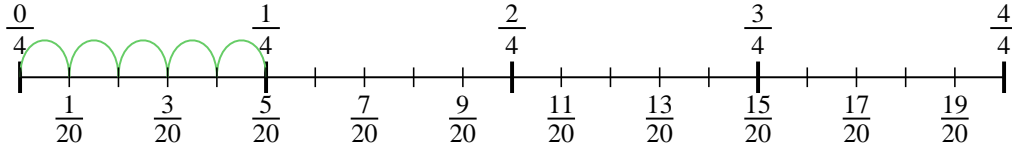
9. $\frac{1}{6}$



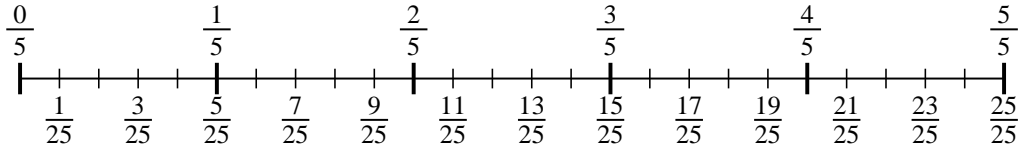
Usa la línea numérica para resolver cada problema. El primero ya está hecho como ejemplo

Respuestas

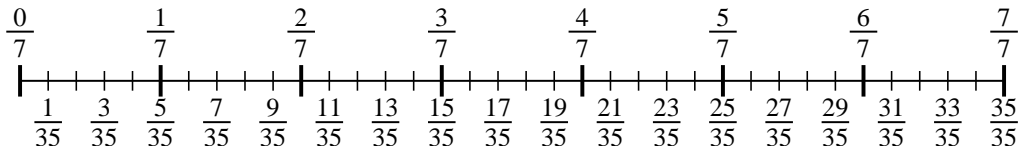
1) $\frac{1}{4} \div 5$



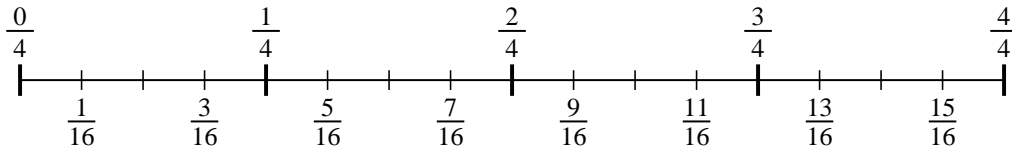
2) $\frac{1}{5} \div 5$



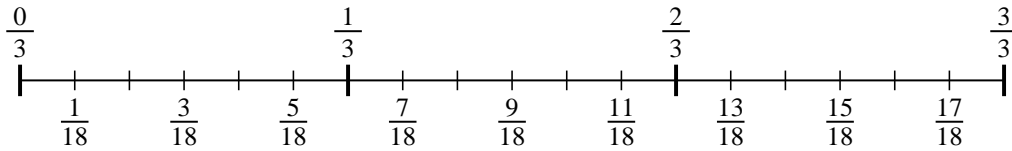
3) $\frac{1}{7} \div 5$



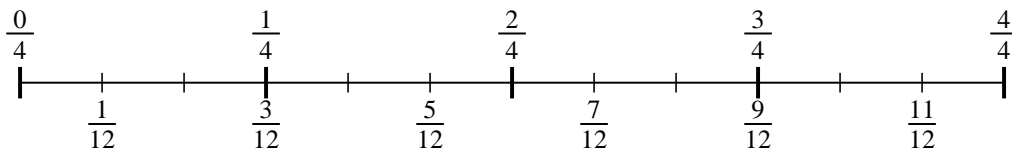
4) $\frac{1}{4} \div 4$



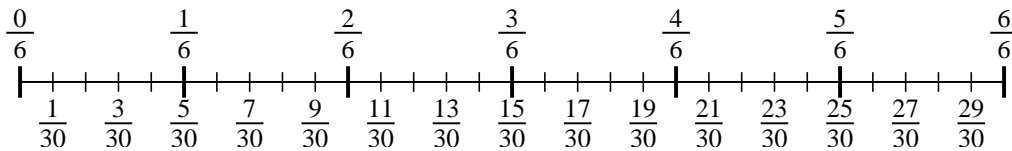
5) $\frac{1}{3} \div 6$



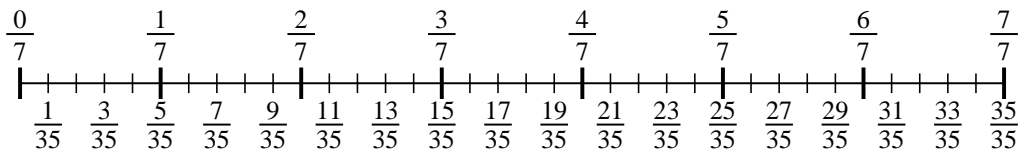
6) $\frac{1}{4} \div 3$



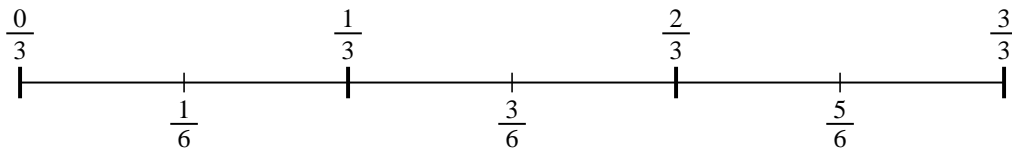
7) $\frac{1}{6} \div 5$



8) $\frac{1}{7} \div 5$



9) $\frac{1}{3} \div 2$



1. _____

2. _____

3. _____

4. _____

5. _____

6. _____

7. _____

8. _____

9. _____