




Usa la línea numérica para resolver cada problema. El primero ya está hecho como ejemplo

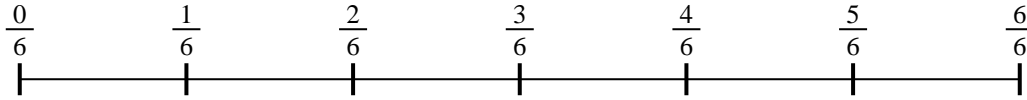
Respuestas

1) $\frac{1}{3} \div 3$



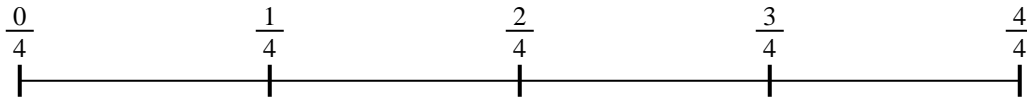
1. _____

2) $\frac{1}{6} \div 5$




2. _____

3) $\frac{1}{4} \div 5$



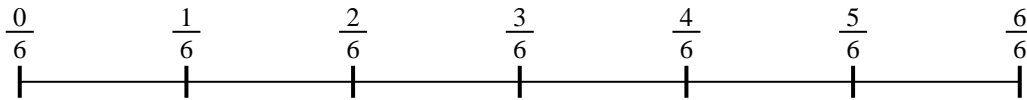
3. _____

4) $\frac{1}{5} \div 2$



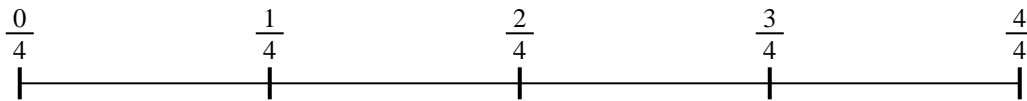
4. _____

5) $\frac{1}{6} \div 4$



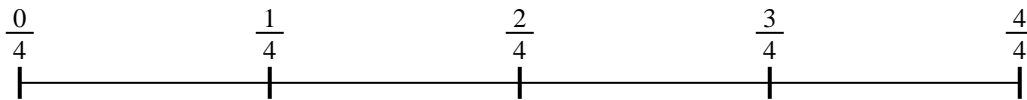
5. _____

6) $\frac{1}{4} \div 4$



6. _____

7) $\frac{1}{4} \div 6$



7. _____

8) $\frac{1}{3} \div 6$



8. _____

9) $\frac{1}{5} \div 4$



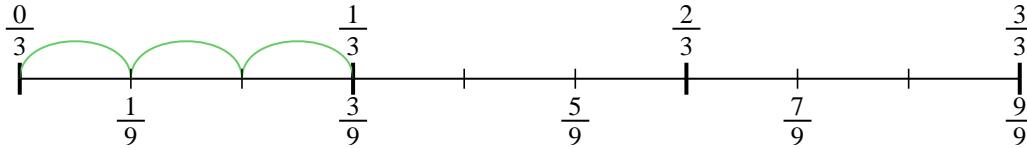
9. _____



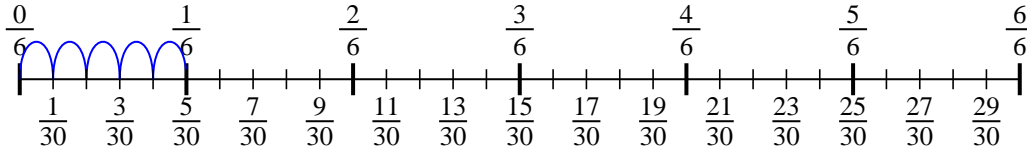
Usa la línea numérica para resolver cada problema. El primero ya está hecho como ejemplo

ejemplo

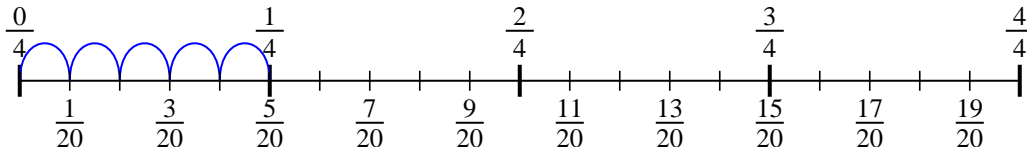
1) $\frac{1}{3} \div 3$



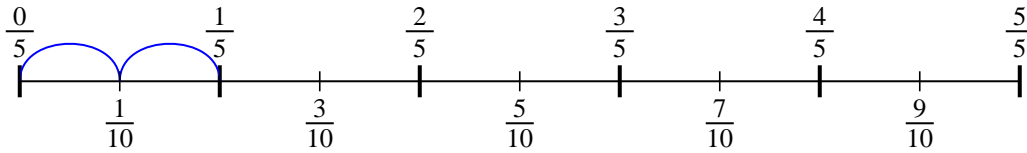
2) $\frac{1}{6} \div 5$



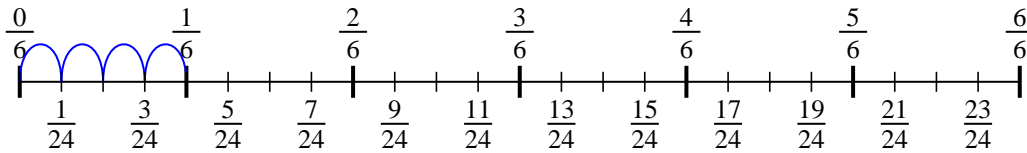
3) $\frac{1}{4} \div 5$



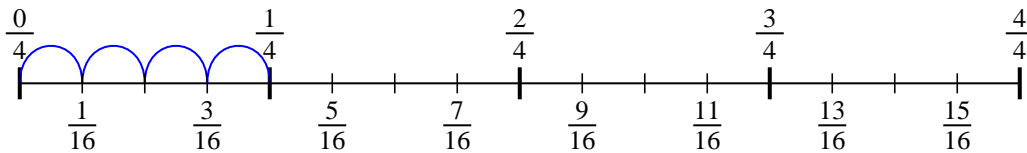
4) $\frac{1}{5} \div 2$



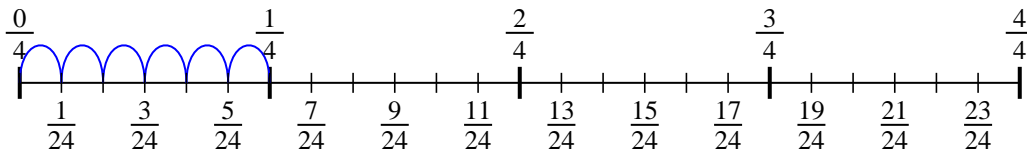
5) $\frac{1}{6} \div 4$



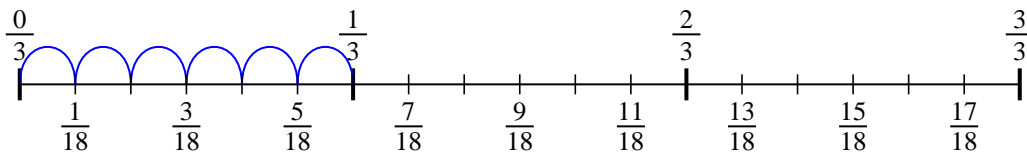
6) $\frac{1}{4} \div 4$



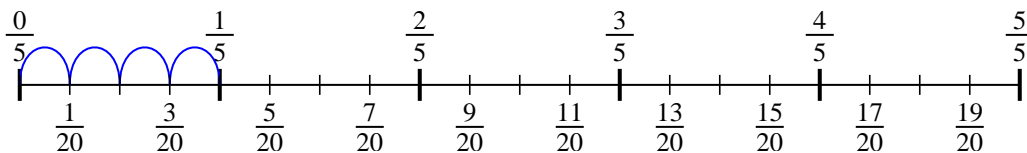
7) $\frac{1}{4} \div 6$



8) $\frac{1}{3} \div 6$



9) $\frac{1}{5} \div 4$



Respuestas

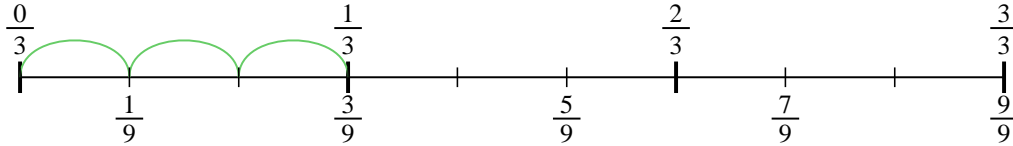
1. $\frac{1}{9}$
2. $\frac{1}{30}$
3. $\frac{1}{20}$
4. $\frac{1}{10}$
5. $\frac{1}{24}$
6. $\frac{1}{16}$
7. $\frac{1}{24}$
8. $\frac{1}{18}$
9. $\frac{1}{20}$



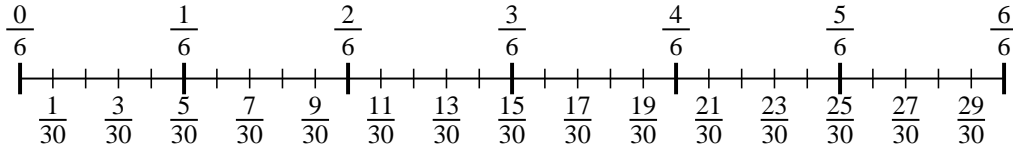
Usa la línea numérica para resolver cada problema. El primero ya está hecho como ejemplo

Respuestas

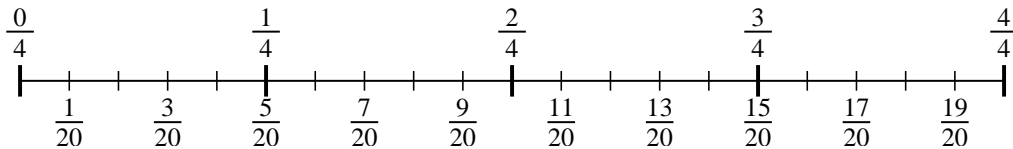
1) $\frac{1}{3} \div 3$



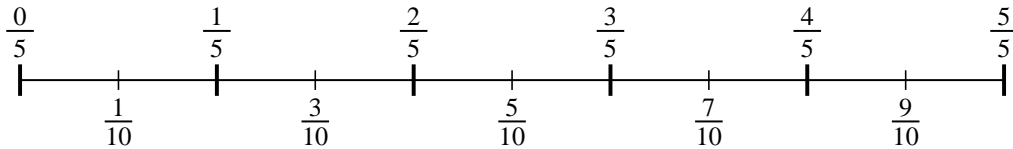
2) $\frac{1}{6} \div 5$



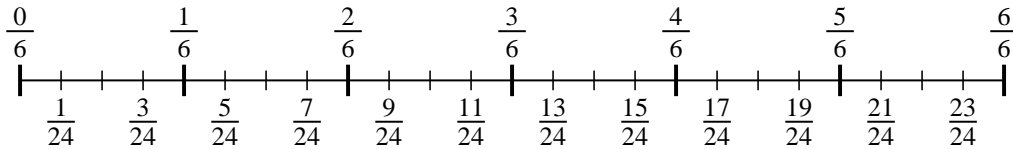
3) $\frac{1}{4} \div 5$



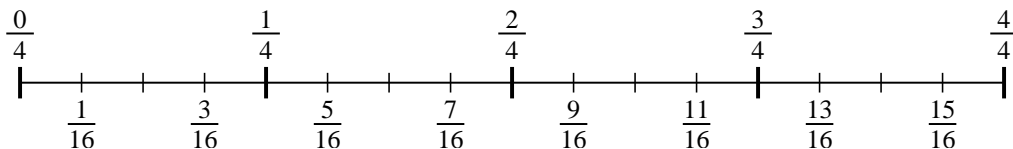
4) $\frac{1}{5} \div 2$



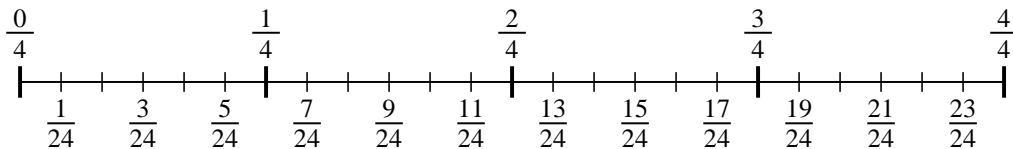
5) $\frac{1}{6} \div 4$



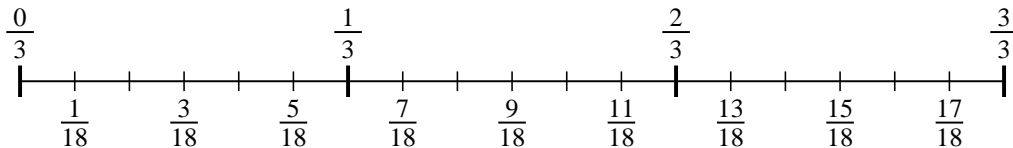
6) $\frac{1}{4} \div 4$



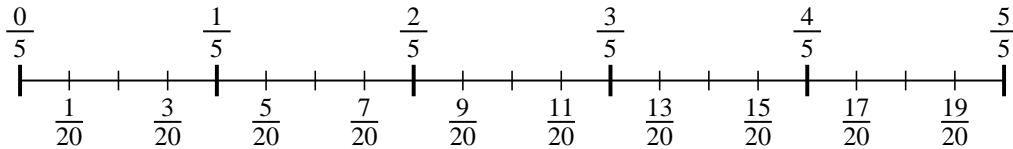
7) $\frac{1}{4} \div 6$



8) $\frac{1}{3} \div 6$



9) $\frac{1}{5} \div 4$



1. _____
2. _____
3. _____
4. _____
5. _____
6. _____
7. _____
8. _____
9. _____