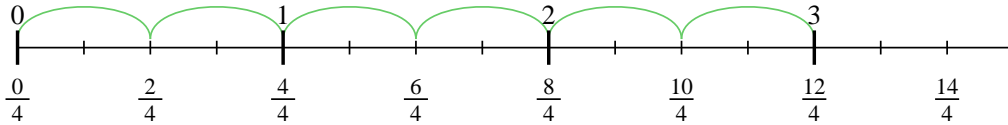


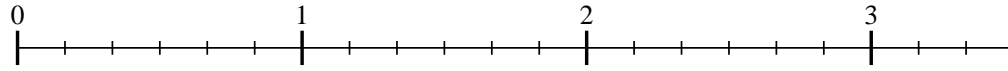


Usa la recta numérica para resolver cada problema. El primero ya está marcado como ejemplo.

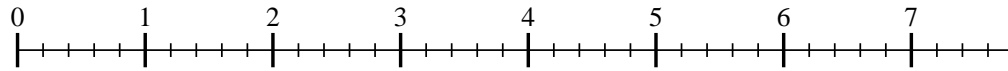
1)  $3 \div \frac{2}{4}$



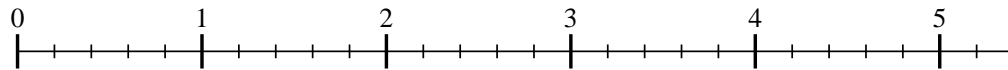
2)  $3 \div \frac{3}{6}$



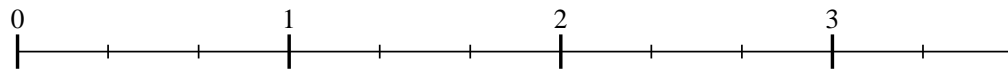
3)  $7 \div \frac{2}{5}$



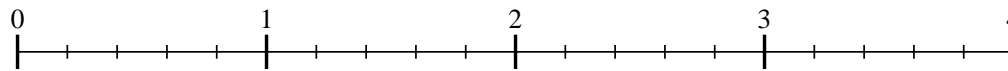
4)  $5 \div \frac{2}{5}$



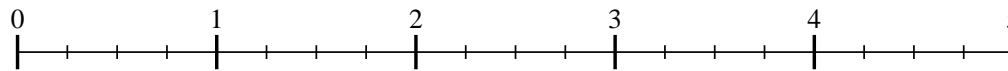
5)  $3 \div \frac{2}{3}$



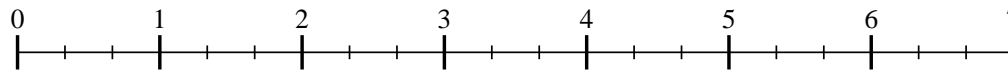
6)  $3 \div \frac{3}{5}$



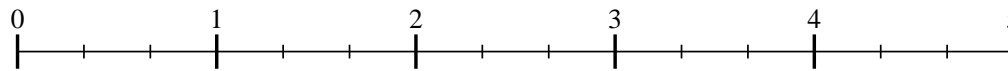
7)  $4 \div \frac{2}{4}$



8)  $6 \div \frac{2}{3}$



9)  $4 \div \frac{2}{3}$



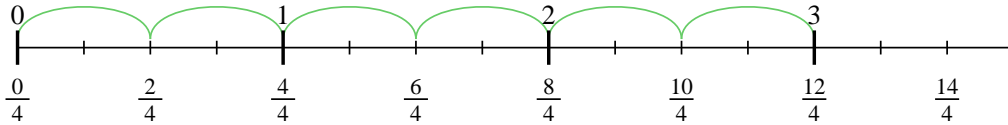
**Respuestas**

- 1. \_\_\_\_\_
- 2. \_\_\_\_\_
- 3. \_\_\_\_\_
- 4. \_\_\_\_\_
- 5. \_\_\_\_\_
- 6. \_\_\_\_\_
- 7. \_\_\_\_\_
- 8. \_\_\_\_\_
- 9. \_\_\_\_\_

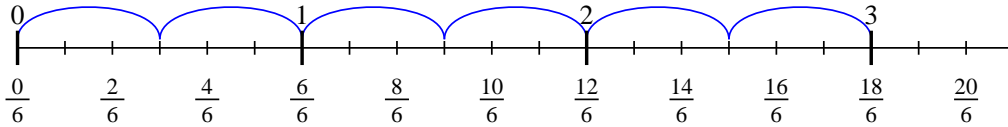


Usa la recta numérica para resolver cada problema. El primero ya está marcado como ejemplo.

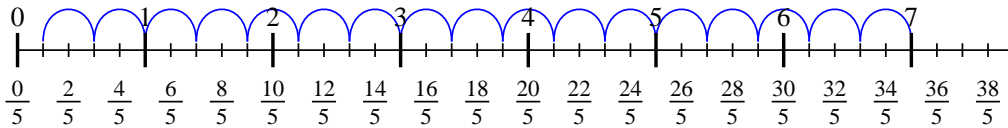
1)  $3 \div \frac{2}{4}$



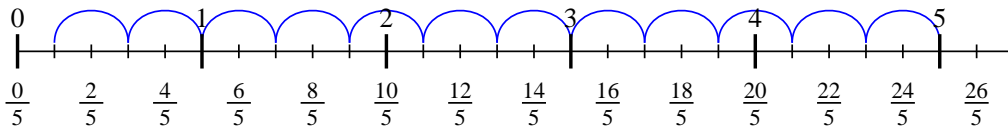
2)  $3 \div \frac{3}{6}$



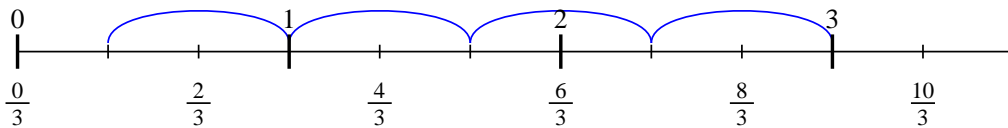
3)  $7 \div \frac{2}{5}$



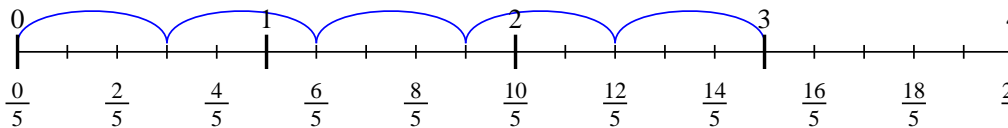
4)  $5 \div \frac{2}{5}$



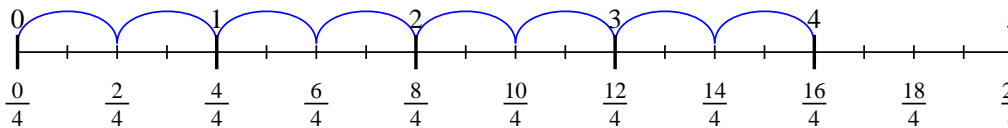
5)  $3 \div \frac{2}{3}$



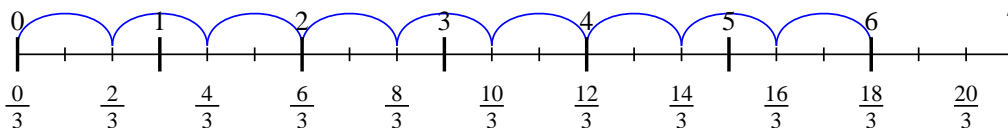
6)  $3 \div \frac{3}{5}$



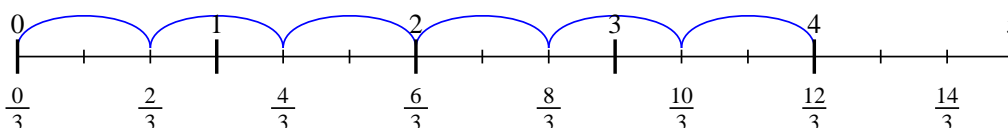
7)  $4 \div \frac{2}{4}$



8)  $6 \div \frac{2}{3}$



9)  $4 \div \frac{2}{3}$



**Respuestas**

1. 6
2. 6
3. 17 1/2
4. 12 1/2
5. 4 1/2
6. 5
7. 8
8. 9
9. 6